

Valentine's Day


addition &
subtraction

common core
aligned



Kayla Parker
Meet Miss Parker
© 2013

oh so sweet addition & subtraction



1. There were 12 chocolates in the box. You ate 5 of the chocolates for dessert. How many chocolates are left?

$$\underline{\quad\quad} - \underline{\quad\quad} = \underline{\quad\quad}$$

2. You baked 20 cupcakes for your friends at school. If you brought 4 cupcakes back home, how many cupcakes were eaten?

$$\underline{\quad\quad} - \underline{\quad\quad} = \underline{\quad\quad}$$

3. On Tuesday, you made 10 valentines for your friends. On Wednesday, you made 9 more valentines. How many valentines did you make in all?


$$\underline{\quad\quad} + \underline{\quad\quad} = \underline{\quad\quad}$$

4. There were 6 brownies baking in the oven and 9 more brownies on the counter. How many brownies in all?

$$\underline{\quad\quad} + \underline{\quad\quad} = \underline{\quad\quad}$$

Valentine Secret Message

Hi! My name is Matt! I need your help to get to the figure out the message on my valentine. Will you help me?



Directions: Help Matt figure out the message by answering the addition and subtraction problems below. Use your answers and the letter code (next page) to fill in the blanks in the message.

1.
$$\begin{array}{r} 5 \\ + 5 \\ \hline \end{array}$$

2.
$$\begin{array}{r} 7 \\ - 2 \\ \hline \end{array}$$

3.
$$\begin{array}{r} 6 \\ + 5 \\ \hline \end{array}$$

4.
$$\begin{array}{r} 8 \\ - 6 \\ \hline \end{array}$$

5.
$$\begin{array}{r} 8 \\ - 2 \\ \hline \end{array}$$

6.
$$\begin{array}{r} 3 \\ + 6 \\ \hline \end{array}$$

7.
$$\begin{array}{r} 2 \\ + 6 \\ \hline \end{array}$$

8.
$$\begin{array}{r} 5 \\ - 4 \\ \hline \end{array}$$

9.
$$\begin{array}{r} 9 \\ - 5 \\ \hline \end{array}$$

10.
$$\begin{array}{r} 4 \\ + 8 \\ \hline \end{array}$$

11.
$$\begin{array}{r} 3 \\ + 4 \\ \hline \end{array}$$

12.
$$\begin{array}{r} 9 \\ - 6 \\ \hline \end{array}$$

13.
$$\begin{array}{r} 10 \\ + 3 \\ \hline \end{array}$$

10 3 7 7

5 4 11




2 9

6 5

1 8 7 9 13 12 3 13 9 ?

secret message letters

You almost cracked the secret message! All you need to do is use the answers from the first page to figure out which letter goes with the number. You can do it!



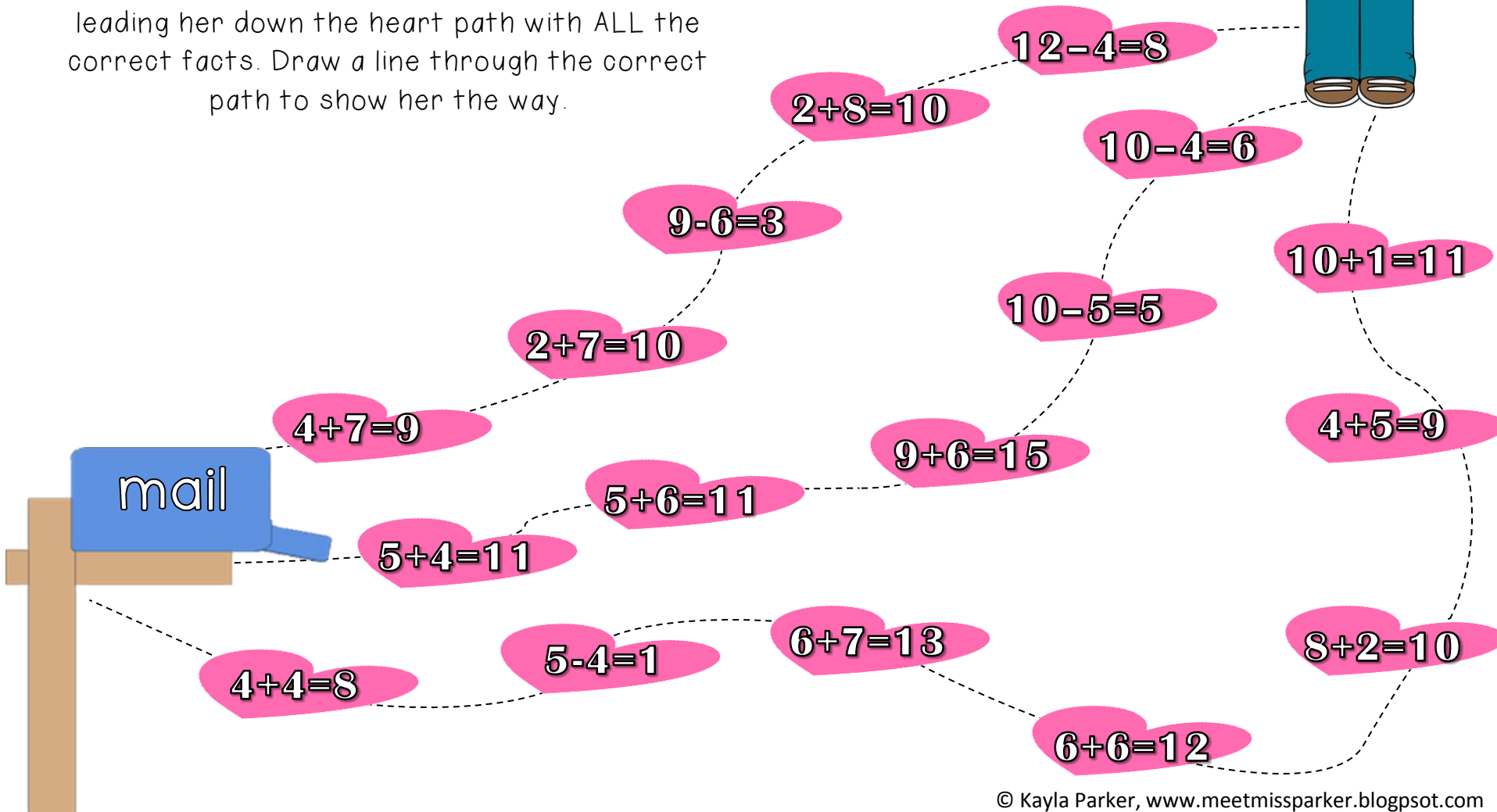

a	b	c	d	e	f	g	h	i	j	k	l	m
8	2	14	21	9	18	26	22	3	23	16	7	6

n	o	p	q	r	s	t	u	v	w	x	y	z
13	4	25	17	20	19	12	11	1	10	24	5	15

valentine delivery

Directions: Help Zoey get to the mailbox by leading her down the heart path with ALL the correct facts. Draw a line through the correct path to show her the way.

Hi! My name is Zoey! I need your help to get to the mailbox to deliver my valentines. Will you help me?

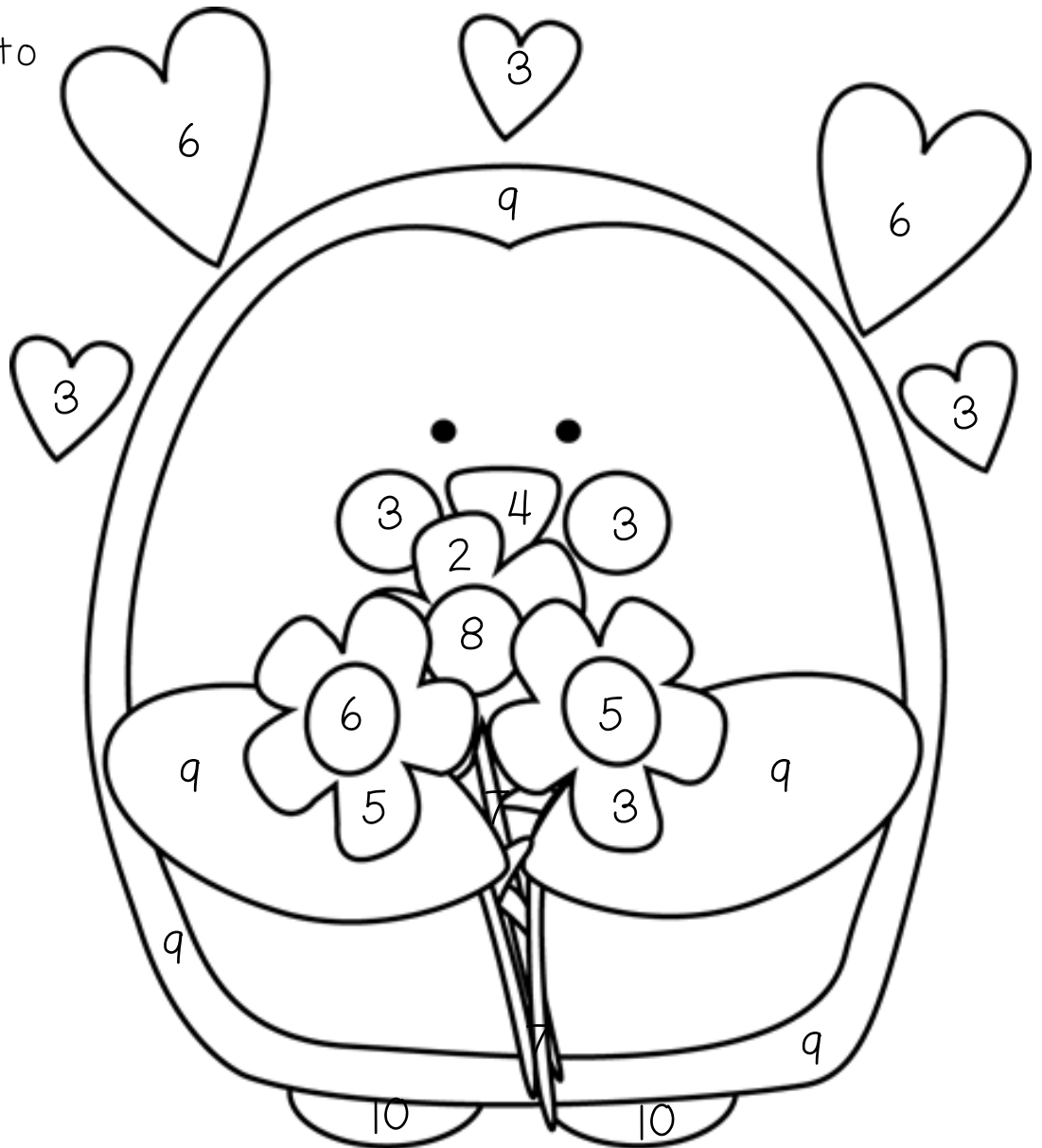


color by number penguin



Directions: Solve each addition and subtraction problem. Use the answer to color by number.

- 1) $2 + 6 =$ _____
- 2) $5 + 5 =$ _____
- 3) $6 - 3 =$ _____
- 4) $10 - 4 =$ _____
- 5) $4 - 2 =$ _____
- 6) $6 + 3 =$ _____
- 7) $5 + 2 =$ _____
- 8) $8 - 3 =$ _____
- 9) $3 + 1 =$ _____

- | | |
|------------|-----------|
| 2 - purple | 7 - green |
| 3 - pink | 8 - blue |
| 4 - orange | 9 - black |
| 5 - yellow | 10 - gray |
| 6 - red | |



box of chocolate addition race



Directions: Players take turns rolling 2 dice. Add up the two numbers and color in the matching numbered chocolate on your heart. If the sum of your two numbers is already colored, wait for your next turn. The winner is the first person to color all of his/her chocolates!

thank you for downloading!

A HUGE thanks to...
mycutegraphics.com for the borders and images
&
kevinandamanda.com for their amazing fonts.

Meet Miss Parker
meetmissparker.blogspot.com

Check out my TPT store for more products!
<http://www.teacherspayteachers.com/Store/Kayla-Parker>

