



# Digital Time - Half Past

What is the time?


Write digits in the clocks to show the time. The first one has been done for you.




half past 2




half past 5




half past 10




half past 8




half past 12




half past 3



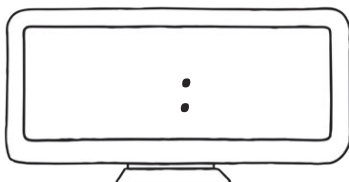
half past 9



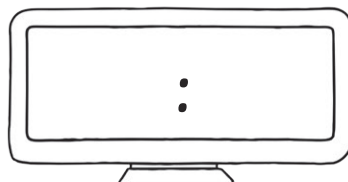
half past 7




half past 1



half past 4



half past 11




half past 6


# Digital Time - Half Past Answer sheet

What is the time?

Write digits in the clocks to show the time. The first one has been done for you.



half past 2




half past 5



half past 10



half past 8



half past 12



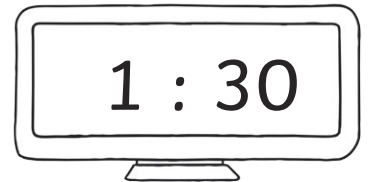
half past 3




half past 9




half past 7




half past 1



half past 4



half past 11



half past 6