

Page

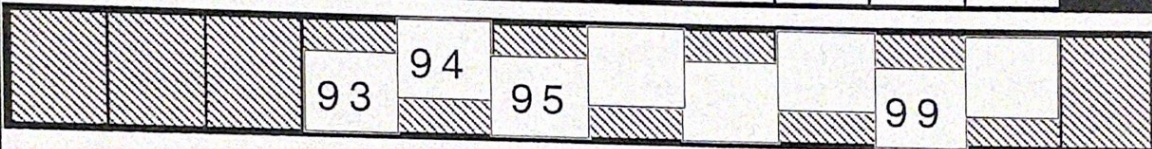
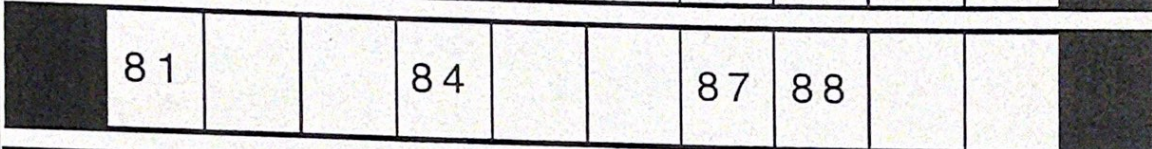

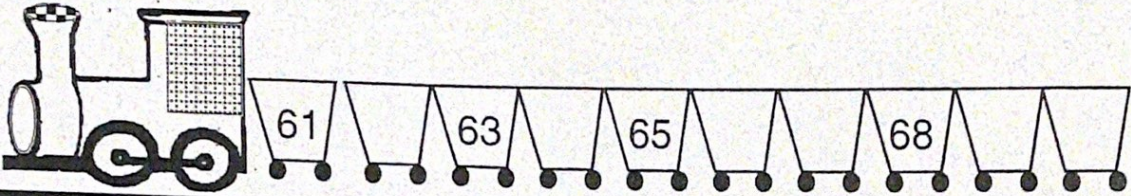
Homework Examples

3 /
4.
cont

Write the missing numbers.



B



Take away 1.

77 → <input type="text"/>	55 → <input type="text"/>	70 → <input type="text"/>
64 → <input type="text"/>	83 → <input type="text"/>	96 → <input type="text"/>
92 → <input type="text"/>	91 → <input type="text"/>	100 → <input type="text"/>

Add 1.

95 → → 96 → → →

