


Digital Time – Quarter Past

What is the time?

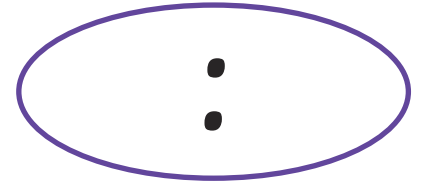
Write digits in the clocks to show the time. The first one has been done for you.




quarter past 2




quarter past 5




quarter past 10




quarter past 8




quarter past 12




quarter past 3



quarter past 9




quarter past 7




quarter past 1



quarter past 4



quarter past 11



quarter past 6

Digital Time – Quarter Past Answers

What is the time?

Write digits in the clocks to show the time. The first one has been done for you.

02:15

quarter past 2

05:15

quarter past 5

10:15

quarter past 10

08:15

quarter past 8

12:15

quarter past 12

03:15

quarter past 3

09:15

quarter past 9

07:15

quarter past 7

01:15

quarter past 1

04:15

quarter past 4

11:15

quarter past 11

06:15

quarter past 6