






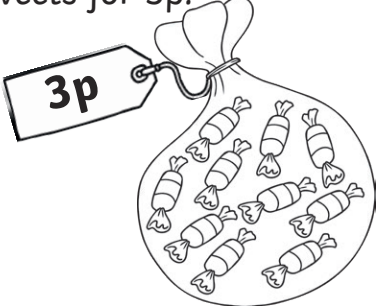











Calculating Change from 20p

You go to the shop with 20p. For each item you need to work out which coins, out of the 20p, you need to pay for the item and score them out. Then work out how much you have left from 20p by adding together the coins that are left. Write how much you have left in the final box.



<p>I would like to buy an apple for 12p.</p> 	<p>I have 20p. What coins will I use to pay for it?</p> 	<p>How much money do you have left?</p>
<p>I would like to buy a car for 8p.</p> 	<p>I have 20p. What coins will I use to pay for it?</p> 	<p>How much money do you have left?</p>
<p>I would like to buy a pencil for 18p.</p> 	<p>I have 20p. What coins will I use to pay for it?</p> 	<p>How much money do you have left?</p>
<p>I would like to buy a bag of sweets for 3p.</p> 	<p>I have 20p. What coins will I use to pay for it?</p> 	<p>How much money do you have left?</p>

<p>I would like to buy a toy boat for 15p.</p> 	<p>I have 20p. What coins will I use to pay for it?</p> 	<p>How much money do you have left?</p>
<p>I would like to buy a flower for 7p.</p> 	<p>I have 20p. What coins will I use to pay for it?</p> 	<p>How much money do you have left?</p>
<p>I would like to buy a paper plane for 20p.</p> 	<p>I have 20p. What coins will I use to pay for it?</p> 	<p>How much money do you have left?</p>
<p>I would like to buy a football for 5p.</p> 	<p>I have 20p. What coins will I use to pay for it?</p> 	<p>How much money do you have left?</p>