

# Halves and Quarters Fractions

Find the fractions of these numbers. Draw pictures to show your thinking.

Here is an example:

$\frac{1}{2}$ of 12 = 6	
-------------------------	--

Now it's your turn!

$\frac{1}{2}$  of 8 =


$\frac{1}{2}$  of 14 =


$\frac{1}{4}$  of 12 =

$\frac{1}{2}$  of 18 =

$\frac{1}{4}$  of 24 =

$\frac{1}{4}$  of 32 =

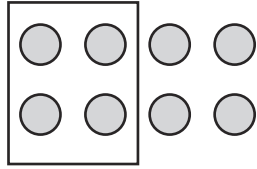
$\frac{1}{4}$  of 20 =

$\frac{1}{2}$  of 24 =

# Halves and Quarters Fractions Answers

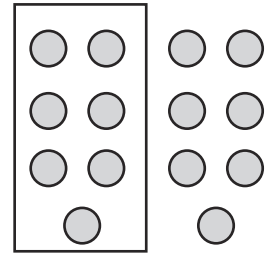
$\frac{1}{2}$  of 8 =

4



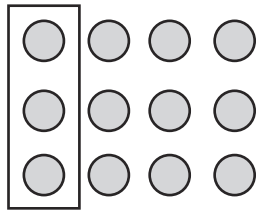
$\frac{1}{2}$  of 14 =

7



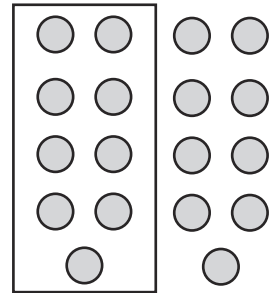
$\frac{1}{4}$  of 12 =

3



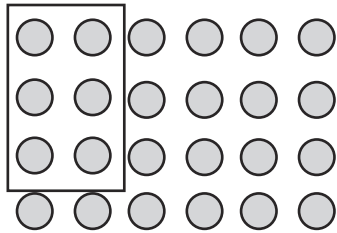
$\frac{1}{2}$  of 18 =

9



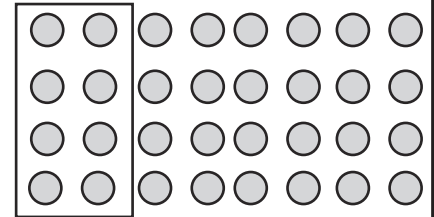
$\frac{1}{4}$  of 24 =

6



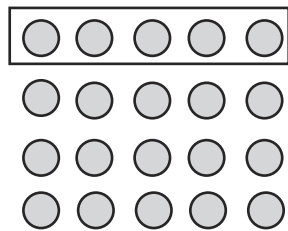
$\frac{1}{4}$  of 32 =

8



$\frac{1}{4}$  of 20 =

5



$\frac{1}{2}$  of 24 =

12

