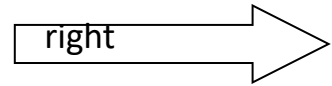






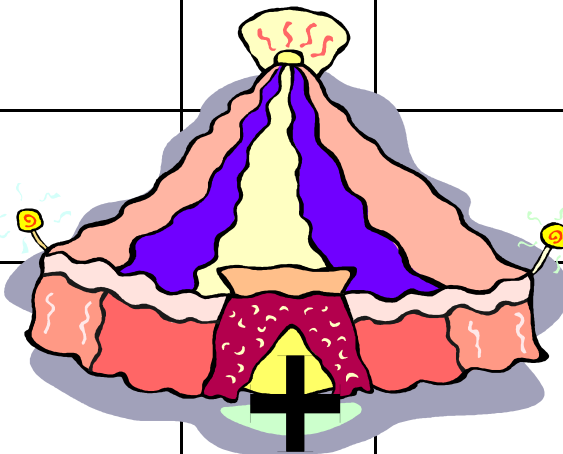











# Circus Directions

Can you give the Clown directions to the places on the grid? Watch out for the custard pies!

Use forward, backward, left and right and count the squares until you arrive at your location. Places with more than 1 square are marked with a



|   |  |   |   |  |  |   |   |  |   |
|---|--|---|---|--|--|---|---|--|---|
|    |  |   |   |    |  |  |   |  |   |
|   |  |    |   |  |  |   |   |  |    |
|   |  |   |  |  |  |   |    |  |    |
|   |  |   |   |  |  |   |   |  |   |
|   |  |   |   |  |  |   |   |  |   |
|   |  |   |   |  |  |   |  |  |   |
|  |  |  |   | <b>Start</b>   |  |   |   |  |  |

Write how you would get to.....

