

Perimeter of a Square

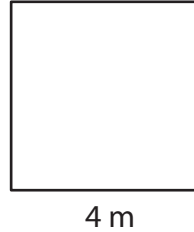
Find the perimeter of each square.

1)



Perimeter = _____

2)



Perimeter = _____

3)



Perimeter = _____

4)



Perimeter = _____

5)



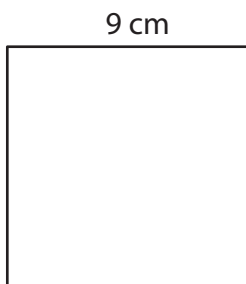
Perimeter = _____

6)




Perimeter = _____

7)




Perimeter = _____

8)



Perimeter = _____

9)



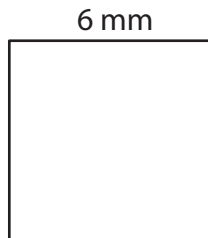
Perimeter = _____

Perimeter of a Square

Answer key

Find the perimeter of each square.

1)



Perimeter = 24 mm

2)




Perimeter = 16 m

3)



Perimeter = 32 cm

4)




Perimeter = 80 m

5)



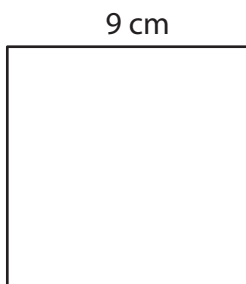
Perimeter = 44 cm

6)




Perimeter = 28 mm

7)




Perimeter = 36 cm

8)



Perimeter = 56 mm

9)



Perimeter = 68 m