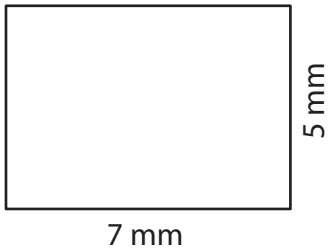


Perimeter of a Rectangle

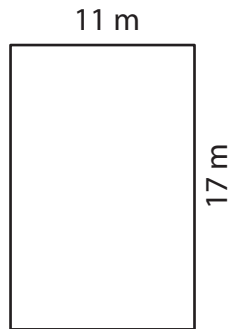
Find the perimeter of each rectangle.

1)



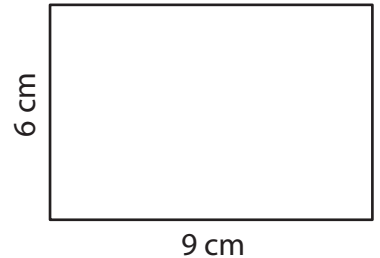
Perimeter = _____

2)



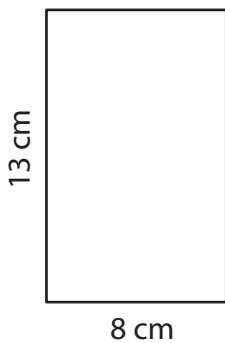
Perimeter = _____

3)



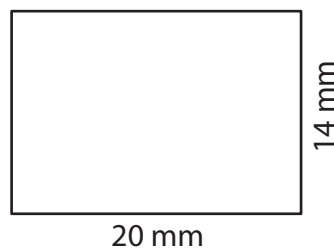
Perimeter = _____

4)



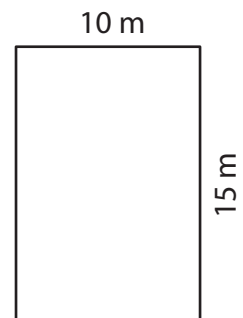
Perimeter = _____

5)



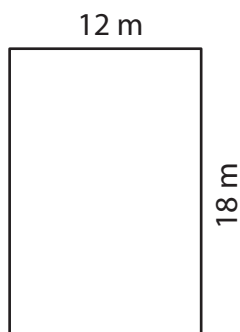
Perimeter = _____

6)



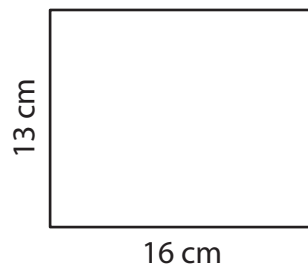
Perimeter = _____

7)



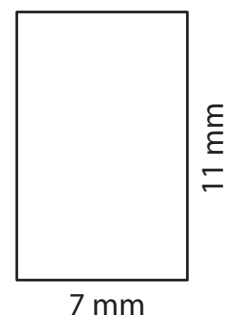
Perimeter = _____

8)



Perimeter = _____

9)



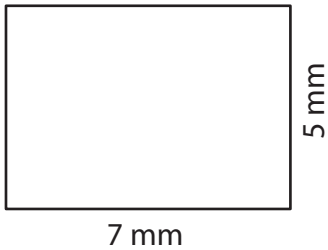
Perimeter = _____

Perimeter of a Rectangle

Answer key


Find the perimeter of each rectangle.

1)



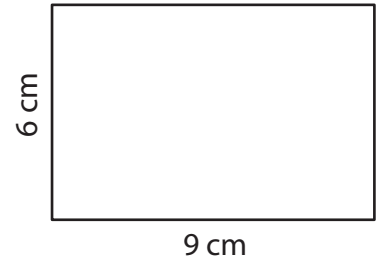
Perimeter = 24 mm

2)



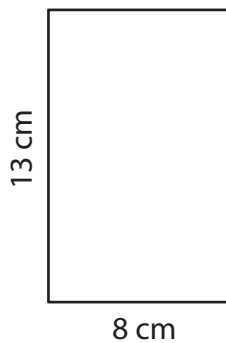
Perimeter = 56 m

3)



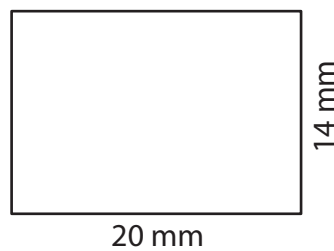
Perimeter = 30 cm

4)



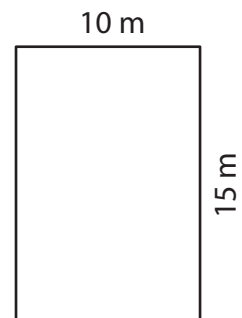
Perimeter = 42 cm

5)



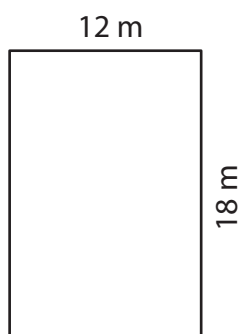
Perimeter = 68 mm

6)



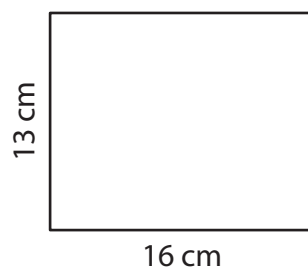
Perimeter = 50 m

7)



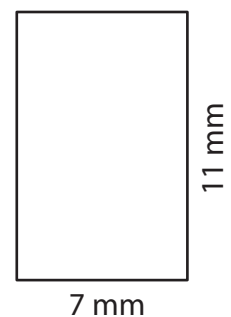
Perimeter = 60 m

8)



Perimeter = 58 cm

9)



Perimeter = 36 mm