

# Time



Recap time, what it is used for and the tools that can be used to measure it.

Recap telling o'clock and half past times. You may want to watch

[https://www.youtube.com/watch?v=K5q65e\\_E-os](https://www.youtube.com/watch?v=K5q65e_E-os) (o'clock) and

<https://www.youtube.com/watch?v=TDAXFvRzUqo> (half past)



<https://www.youtube.com/watch?v=r2K1Py9U87I>

Watch the section of the video clip about digital time. Remember the whole clip is about 34 minutes long and contains quite a lot of information so we will continue to work our way through it in blocks.

Block	Content	Stop Time
1	Time introduction, clock face, o'clock time	6.42
2	Half past time	9.48
3	Quarter past and quarter to time	14.06
4	Time in 5-minute intervals	22.53
5	Time in minute intervals	28.24
6	Digital time	30.55
7	Calendars	34.07



Have a look around your house and see if you can find any digital clocks or watches (you may want to take some photos). You may like to use the template provided to practise writing digital o'clock and half past times.

You can also use the time jigsaw cards to match times, use your whiteboard or the printable sheet provided previously (laminated or in a polypocket) or complete the worksheets to show digital times.

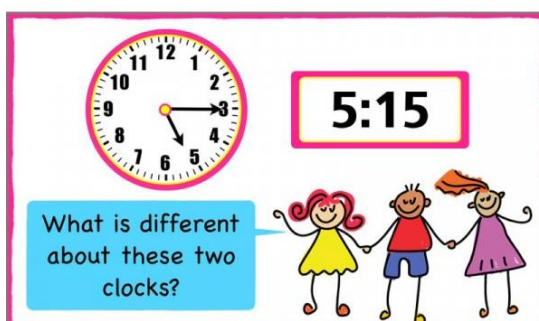



Lots of you seemed to enjoy the song about 'I Know an Old Lady Who Swallowed a Fly' in last week's music lesson so why not watch the song again:

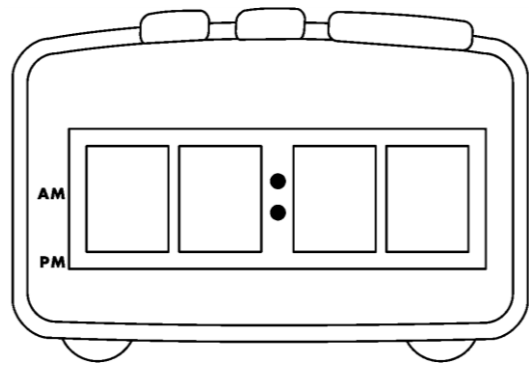
<https://www.youtube.com/watch?v=oNwmzDlyCt8>

You can then use the sheets provided to create your own version of the song but this time including digital times.

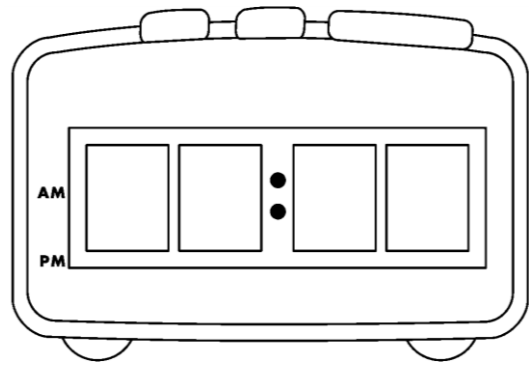
Challenge: Have a go at writing other analogue and digital times (using your whiteboard or the printable sheet previously provided (laminated or in a polypocket).



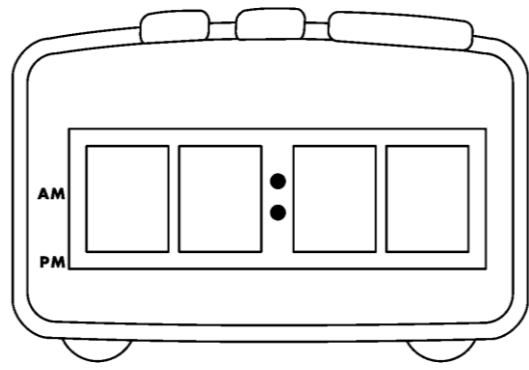




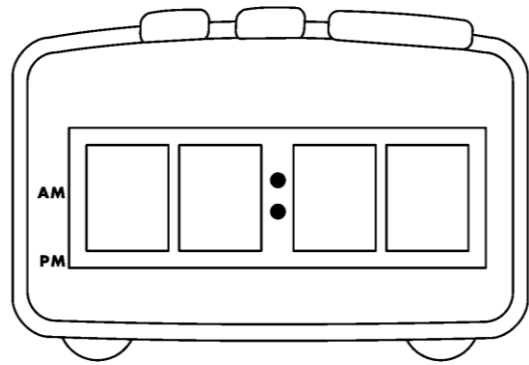
At 8 o'clock  
she swallowed  
a fly.



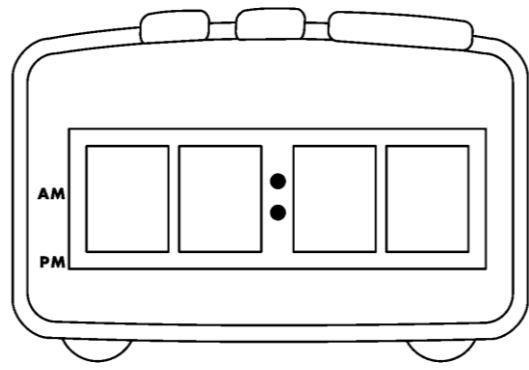
At half past 9  
she swallowed  
a spider.



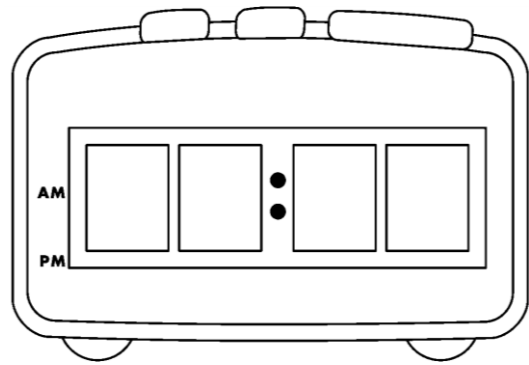
At 10 o'clock  
she swallowed  
a bird.



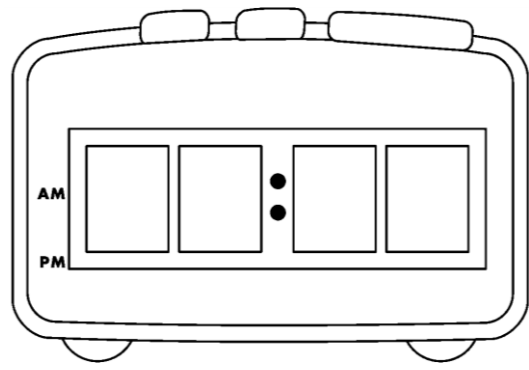
At half past 11  
she swallowed  
a cat.



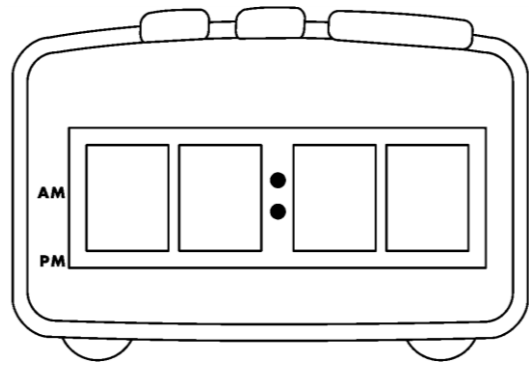
At 12 o'clock  
she swallowed  
a dog.



At half past 1  
she swallowed  
a goat.



At 2 o'clock  
she swallowed  
a cow.



At half past 3  
she swallowed  
a horse (or did she).