

*Today's Star
Number is...*




*Can you use the
star number
above to
complete every
box on the grid?*

Add 1 to it

Add 10 to it

Write it in words

Write the next three numbers




BRAIN BUSTERS

Today's Star
Number is...



Can you use the
star number
above to
complete every
box on the grid?

<i>Add 1 to it</i>	<i>Add 5 to it</i>	<i>Add 10 to it</i>
<i>Subtract 1 from it</i>	<i>Subtract 5 from it</i>	<i>Subtract 10 from it</i>
<i>Double it</i>	<i>Write it in words</i>	<i>Add 100 to it</i>




BRAIN BUSTERS

Today's Star Number is...



Can you use the star number above to complete every box on the grid?

<i>Add 1 to it</i>	<i>Multiply it by 10</i>	<i>Is it odd or even?</i>	<i>Partition it</i>
<i>Write the next three numbers</i>	<i>Subtract 9 from it</i>	<i>Multiply it by 5</i>	<i>Subtract 30 from it</i>
<i>Round it to the nearest 10</i>	<i>Double it</i>	<i>Add 12 to it</i>	<i>Write it in words</i>
<i>Add 101 to it</i>	<i>Multiply it by 100</i>	<i>Halve it</i>	<i>Round it to the nearest 100</i>




BRAIN BUSTERS

Today's Star Number is...



Can you use the star number above to complete every box on the grid?

Add 10 to it	Double it	Add 28 to it	Write the next three consecutive numbers	Divide it by 1000
Write its factors	Partition it	Add 19.5 to it	Multiply it by 10	Subtract 21 from it
Multiply it by 1000	Round it to the nearest 10	Subtract 100 from it	Write it in words	Divide it by 10
Write it in Roman Numerals	Multiply it by 5	Halve it	Find three quarters of it	Round it to the nearest 100
Divide it by 100	Is it odd or even?	Multiply it by 100	Is it a prime number?	Square it



BRAIN BUSTERS