

Name: \_\_\_\_\_

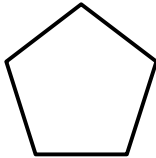
# Solids and Polygons

Write the name of each shape.

**Word Box**  
(You will not use all of the words)

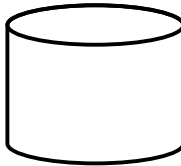
cylinder	rectangular prism	cube	sphere
octagon	pentagon	hexagon	rectangle
parallelogram	triangle	square	trapezoid

1.



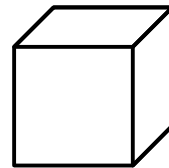
\_\_\_\_\_

2.



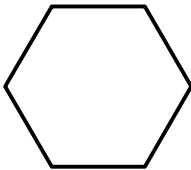
\_\_\_\_\_

3.



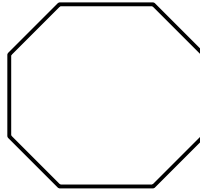
\_\_\_\_\_

4.




\_\_\_\_\_

5.



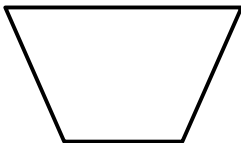
\_\_\_\_\_

6.



\_\_\_\_\_

7.



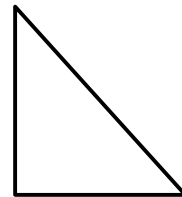
\_\_\_\_\_

8.



\_\_\_\_\_

9.



\_\_\_\_\_

# Solids and Polygons

Write the name of each shape.

## Word Box

(You will not use all of the words)

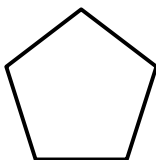
cylinder  
octagon  
parallelogram

rectangular prism  
pentagon  
triangle

cube  
hexagon  
square

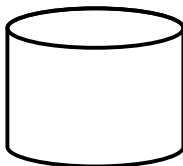
sphere  
rectangle  
trapezoid

1.



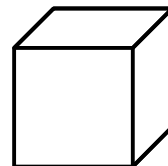
pentagon

2.



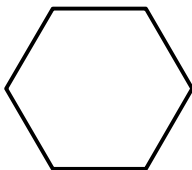
cylinder

3.



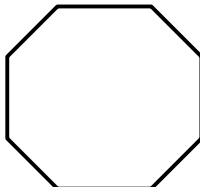
cube

4.



hexagon

5.



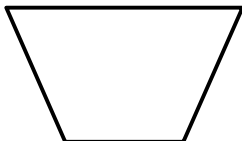
octagon

6.



rectangular prism

7.



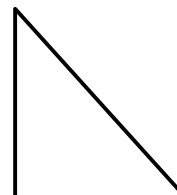
trapezoid

8.



parallelogram

9.



triangle