

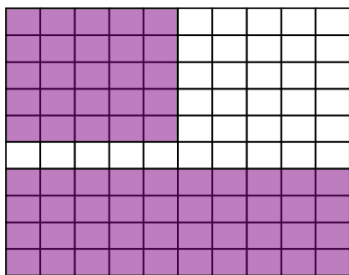
Level 2 Percentages

Answer the following questions, showing all your working. **No calculator allowed.**

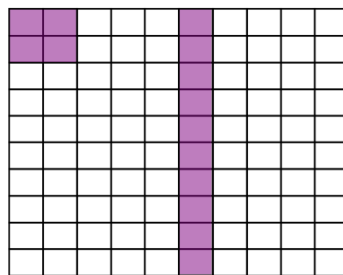
- 3.29×9
- $145 + 2299 + 33$
- $15070 - 758$
- $7.44 \div 4$
- 100×24.35

6. Write down each separate shaded section as a percentage of each shape.

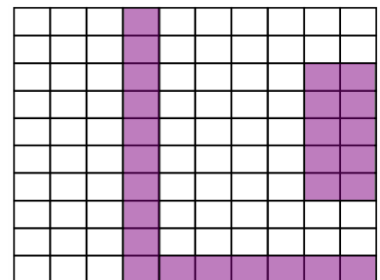
a)



b)



c)



7. Write each of the following as a **fraction**: -

- a) 45% b) 23% c) 90% d) 15% e) 7% f) 2%

8. Write each of the following as a **decimal**: -

- a) 55% b) 63% c) 42% d) 8% e) 3% f) 100%

9. Write each of the following as a **percentage**: -

- a) $\frac{33}{100}$ b) 0.69 c) $\frac{79}{100}$ d) 0.04 e) $\frac{2}{100}$ f) 0.5

10. Find: -

- a) 50% of £200 b) 25% of 16kg c) 10% of 205mm

11. Craig lost 50% of his £9 pocket money. How much did he lose?