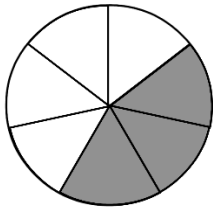


S1 Level 2 Homework Fractions


Answer the following questions, showing all your working. **No calculator allowed.**

1. $9999 + 1400$
2. $2.35 + 5.6$
3. $9.48 - 3.97$
4. $7314 \div 6$
5. 100×2140
6. For each shape, say what fraction has been shaded: -

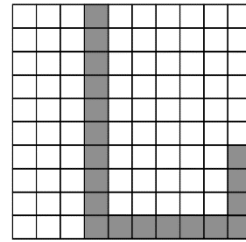
a)



b)



c)



7. Write down two fractions equivalent to: -

a) $\frac{3}{4}$

b) $\frac{5}{8}$

c) $\frac{2}{3}$

8. Write each of these fractions in their simplest form: -

a) $\frac{4}{10}$

b) $\frac{9}{36}$

c) $\frac{32}{64}$

9. Find: -

a) $\frac{1}{2}$ of 24

b) $\frac{3}{4}$ of 250

c) $\frac{5}{8}$ of 64

10. Ellie had £48 birthday money. She spent half of it on clothes and a third of it at the cinema.

- a) How much did she spend on clothes?
- b) How much did she spend at the cinema?
- c) How much did she have left?