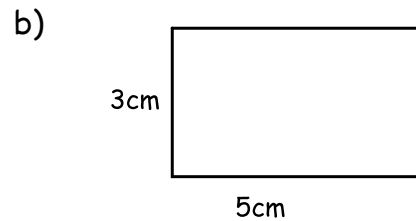
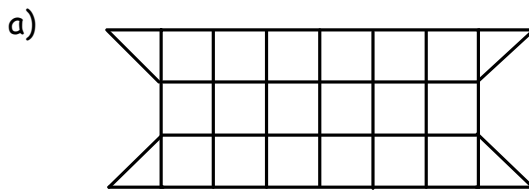


## Length and Area

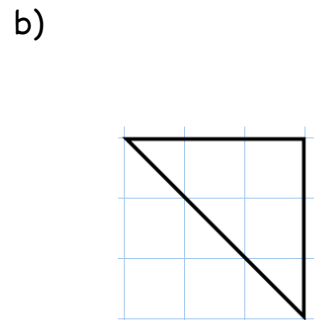
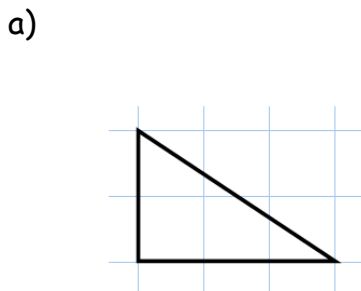
Answer the following questions, showing all your working. **No calculator allowed.**

1.  $10000 - 4257$
2.  $10.25 + 8.6 + 48.01$
3.  $3.76 \times 100$
4.  $632 \div 8$
5.  $387 \times 5$

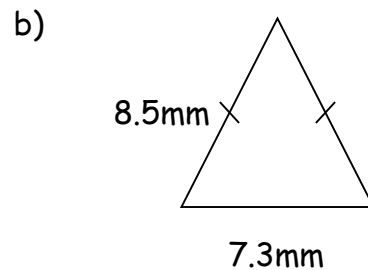
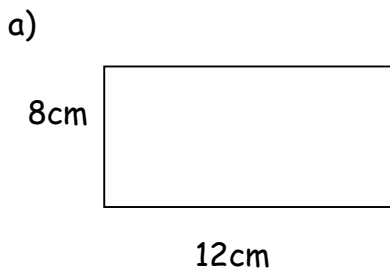
6. Calculate the area of the following shapes.



7. Calculate the area of the triangles.



8. Calculate the perimeter of the shapes below.



9. Change: -

a) 8.5 m to cm

b) 7500 m to km

c) 60 mm to cm