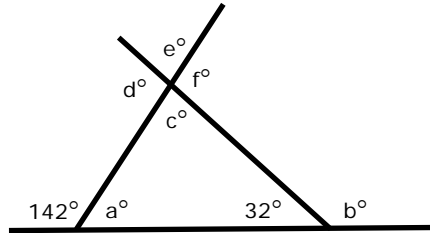
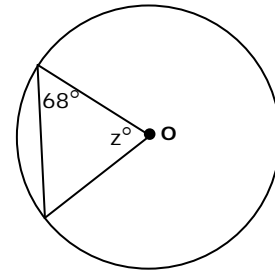
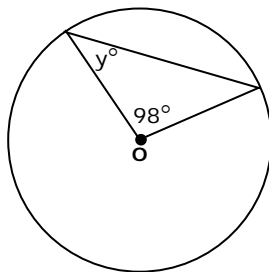
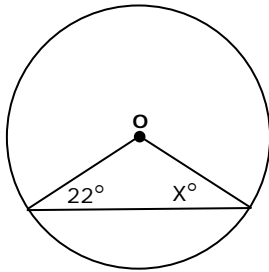


National 4 Homework Exercise 20 Circles and Angles

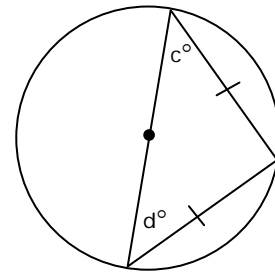
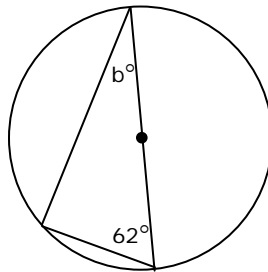
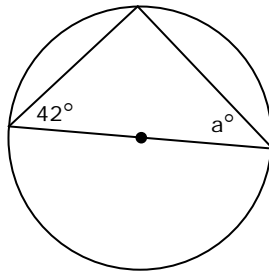
Q1 Find the missing angles in this diagram



Q2 In the following diagrams two radii are drawn from **O**, the centre of the circle. Calculate the size of the labeled angles.



Q3 Calculate the size of each lettered angle in these diagrams.



Q4 Line ET is a tangent to the circle, centre O
Angle AET is 38°
Calculate the size of angle AOE

