

National 4
Homework Exercise 12
Symmetry

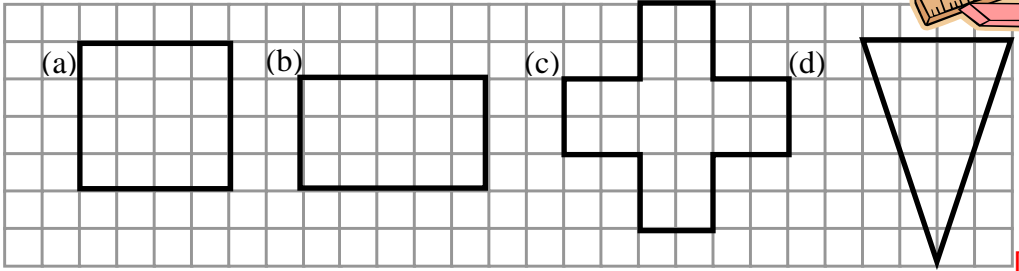
1. Complete all calculations below **without a calculator**. Show all working!

- (a) $5.42 - 1.8$ (b) $(-17) - (-15)$ (c) $66\frac{2}{3}\%$ of £22.50

[4]

USE A RULER!!!!

2. Copy each of the following shapes and mark **all** the lines of symmetry.

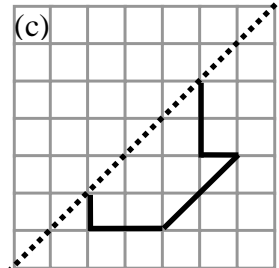
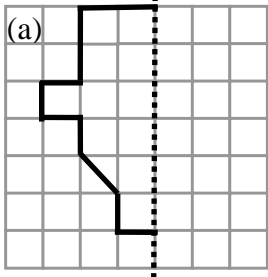


[6]

3. Write all the **capital** letters in the alphabet that have exactly **two** lines of symmetry.

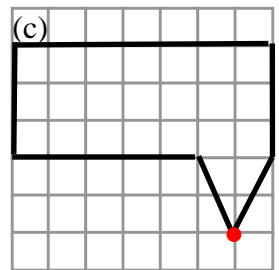
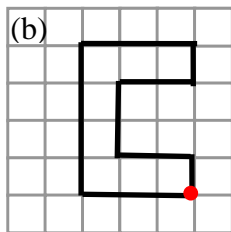
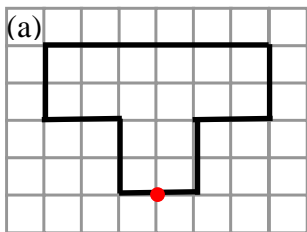
4. Copy each diagram below and neatly draw the other half.

[2]



[7]

5. Copy each shape and rotate each shape by 180° around the dot to produce a shape with half turn symmetry.



[9]

6. Complete this multiplication square.

3	×	-7	=	
×		×		×
-1	×	5	=	
=		=		=
	×		=	

[4]