









# Phase 2 Money Assessment

Phase 2 Progression Overview	Assessment Note	Marks
I can order coins from the least in value to the most	Question 1	
I can use 1p, 2p, 5p, 10p and 20p coins to pay for items up to 50p	Question 2	
I can work out change up to 20p	Question 3	
<b>Assessment Note: Ensure that the coins are available for children to use during the assessment.</b>		

	Question	Mark
1	<p>Name each coin and order the coins from smallest value to biggest value</p> <p>(a)</p> <div style="display: flex; justify-content: space-around; align-items: center;">     </div> <p>Name each coin</p> <p>_____</p> <p>Order coins from smallest to largest</p> <p>_____</p>	1
(b)	<div style="display: flex; justify-content: space-around; align-items: center;">     </div> <p>Name each coin</p> <p>_____</p> <p>Order coins from smallest to largest</p> <p>_____</p>	1

(c)



Name each coin

\_\_\_\_\_

\_\_\_\_\_

\_\_\_\_\_

\_\_\_\_\_

Order coins from smallest to largest

\_\_\_\_\_

\_\_\_\_\_

\_\_\_\_\_

\_\_\_\_\_

1

2

What coins you would use to pay for each toy

(a)



29p

1

(b)



34p

1

(c)



48p

1

(d)



31p

1

3 You pay the shopkeeper with a 20p. How much change would you get for each toy?

(a)



16p

1

(b)



9p

1

(c)



5p

1