




Phase 4 Time Assessment

Phase 4 Progression Overview	Assessment Note	Marks
<ul style="list-style-type: none"> • I can tell the time using half past, quarter past and quarter to using analogue and digital 12 hour clocks. 	Question 1	
<ul style="list-style-type: none"> • I can record 12 hour times using am and pm (o'clock, half past, quarter past and quarter to) and is able to identify 24 hour notation, for example, on a mobile phone or computer. 	Question 2 & Question 3	
<ul style="list-style-type: none"> • I can record the date in a variety of ways, using words and numbers. 	Question 4	
<ul style="list-style-type: none"> • I can use and interprets a variety of calendars and 12 hour timetables to plan key events. 	Question 5 & Question 6	
<ul style="list-style-type: none"> • I know the number of seconds in a minute, minutes in an hour, hours in a day, days in each month, weeks and days in a year. 	Question 7	
<ul style="list-style-type: none"> • I can order the months of the year and relates these to the appropriate seasons. 	Question 7	
<ul style="list-style-type: none"> • I can select and use appropriate timers for specific purposes 	Have you observed your learners doing this?	

	Question	Mark
1	Write the following analogue and digital times in words.	
(a)	<p style="text-align: right;">(Write the time in words here)</p> 	1
(b)	<p style="text-align: right;">(Write the time in words here)</p> 	1
(c)	<p style="text-align: right;">(Write the time in words here)</p> 	1

(d)

09:30

(Write the time in words here)

1

(e)

11:45

(Write the time in words here)


1

(f)

04:15

(Write the time in words here)

1

2	Put a tick next to the times that are in 24 hour notation	
	<div style="display: flex; justify-content: space-around; align-items: flex-start;"> <div style="border: 1px solid black; padding: 10px; margin: 10px;">5:30_{pm}</div> <div style="border: 1px solid black; padding: 10px; margin: 10px;">08:45</div> </div> <div style="display: flex; justify-content: space-around; align-items: flex-start; margin-top: 20px;"> <div style="border: 1px solid black; padding: 10px; margin: 10px;">14:15</div> <div style="border: 1px solid black; padding: 10px; margin: 10px;">2:30_{am}</div> </div> <div style="display: flex; justify-content: space-around; align-items: flex-start; margin-top: 20px;"> <div style="border: 1px solid black; padding: 10px; margin: 10px;">22:00</div> <div style="border: 1px solid black; padding: 10px; margin: 10px;">9:15</div> </div>	1
3	Would these times be AM or PM?	
(a)	<div style="display: flex; justify-content: space-between; align-items: center;"> <div style="border: 1px solid black; padding: 10px; margin: 10px;">11:30</div> <div style="text-align: right;">AM or PM</div> </div> <p style="text-align: center; margin-top: 10px;">In the morning.</p>	1
(b)	<div style="display: flex; justify-content: space-between; align-items: center;"> <div style="border: 1px solid black; padding: 10px; margin: 10px;">10:15</div> <div style="text-align: right;">AM or PM</div> </div> <p style="text-align: center; margin-top: 10px;">At night</p>	1
(c)	<div style="display: flex; justify-content: space-between; align-items: center;"> <div style="text-align: center; margin: 10px;">  <p>At lunchtime</p> </div> <div style="text-align: right;">AM or PM</div> </div>	1

<p>4</p>	<p>Fill in the blanks</p> <table border="1" data-bbox="240 188 1334 819"> <tr> <td data-bbox="240 188 786 315">12/03/24</td> <td data-bbox="791 188 1334 315">12th March 2024</td> </tr> <tr> <td data-bbox="240 322 786 443">23/05/27</td> <td data-bbox="791 322 1334 443"></td> </tr> <tr> <td data-bbox="240 450 786 571"></td> <td data-bbox="791 450 1334 571">7th February 2021</td> </tr> <tr> <td data-bbox="240 577 786 698"></td> <td data-bbox="791 577 1334 698">19th December 2029</td> </tr> <tr> <td data-bbox="240 705 786 819">01/01/26</td> <td data-bbox="791 705 1334 819"></td> </tr> </table>	12/03/24	12th March 2024	23/05/27			7th February 2021		19th December 2029	01/01/26		<p>1</p>						
12/03/24	12th March 2024																	
23/05/27																		
	7th February 2021																	
	19th December 2029																	
01/01/26																		
<p>5</p>	<p>Use the timetable to answer the questions.</p> <table border="1" data-bbox="236 965 1334 1346"> <thead> <tr> <th></th> <th>Jumpy</th> <th>Rattle</th> <th>Brimton</th> </tr> </thead> <tbody> <tr> <td>Bus 1</td> <td>9:00am</td> <td>9:45am</td> <td>10:45am</td> </tr> <tr> <td>Bus 2</td> <td>10:15am</td> <td>11:00am</td> <td>12:00pm</td> </tr> <tr> <td>Bus 3</td> <td>12:30pm</td> <td>1:15pm</td> <td>2:15pm</td> </tr> </tbody> </table>		Jumpy	Rattle	Brimton	Bus 1	9:00am	9:45am	10:45am	Bus 2	10:15am	11:00am	12:00pm	Bus 3	12:30pm	1:15pm	2:15pm	
	Jumpy	Rattle	Brimton															
Bus 1	9:00am	9:45am	10:45am															
Bus 2	10:15am	11:00am	12:00pm															
Bus 3	12:30pm	1:15pm	2:15pm															
<p>(a)</p>	<p>What time does Bus 1 arrive in Brimton?</p>	<p>1</p>																
<p>(b)</p>	<p>If I want to get to Rattle for 10am, what bus should I get?</p>	<p>1</p>																
<p>(c)</p>	<p>I leave my house in Jumpy at half past 11. What is the next bus I can get?</p>	<p>1</p>																

6

Use the calendars to answer the questions.

FEB						
Su	Mo	Tu	We	Th	Fr	Sa
		1	2	3	4	5
6	7	8	9	10	11	12
13	14	15	16	17	18	19
20	21	22	23	24	25	26
27	28					

APR						
Su	Mo	Tu	We	Th	Fr	Sa
					1	2
3	4	5	6	7	8	9
10	11	12	13	14	15	16
17	18	19	20	21	22	23
24	25	26	27	28	29	30

(a) What date is the third Sunday in April?

1

(b) What day is the 24th February?

1

(c) How many days are there between the first Wednesday in February and the third Saturday in February?

1

7	Answer the following questions in the space provided	
(a)	Answer Number of seconds in a minute	1
(b)	Answer Number of minutes in an hour	1
(c)	Answer Number of hours in a day	1
(d)	Answer Number of days in a month	1
(e)	Answer Number of months in a year	1
(f)	Answer Number of days in a year	1

