

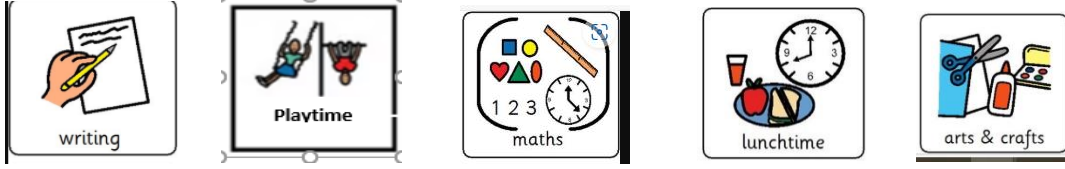

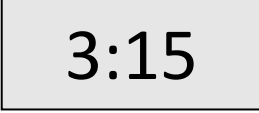



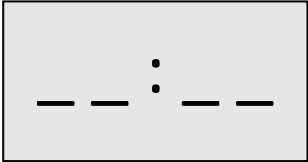

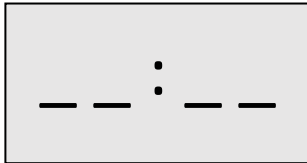
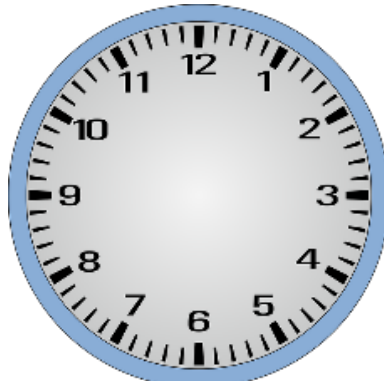
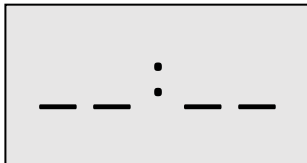




## Phase 2 Money Assessment

Phase 2 Progression Overview	Assessment Note	Marks
<ul style="list-style-type: none"> <li>• I can tell the time using half past</li> </ul>	<p><b>Question 1</b></p> <p><b>Professional Judgement – through observation if appropriate</b></p>	
<ul style="list-style-type: none"> <li>• I have experience of using and interpreting a visual timetable</li> </ul>	<p><b>Question 2</b></p>	
<ul style="list-style-type: none"> <li>• I can start to identify quarter past using analogue and digital clocks</li> </ul>	<p><b>Question 3</b></p>	
<ul style="list-style-type: none"> <li>• I can record 12-hour time using o'clock and half past</li> </ul>	<p><b>Question 4</b></p>	
<ul style="list-style-type: none"> <li>• I am beginning to sequence the months of the year</li> </ul>	<p><b>Have you observed your learner doing this?</b> <b>Question 5</b></p>	
<ul style="list-style-type: none"> <li>• I know there are 7 days in a week and 12 months in a year</li> </ul>	<p><b>Have you observed your learner doing this?</b> <b>Question 6 and 7</b></p>	

	Question	Mark
<b>1</b>	Fill in the following blanks	
<b>(a)</b>		half past _____
<b>(b)</b>		half past _____
<b>2</b>	<p>Look at the visual timetable.</p> 	
<b>(a)</b>	What is after lunchtime?	1
<b>(b)</b>	What is before maths?	1
<b>3</b>	<p>Circle the times that show quarter past.</p>    	1

4	Show the time both ways	
(a)	<p>Half past 11</p>  	1
(b)	<p>5 o'clock</p>  	1
(c)	<p>Half past 9</p>  	1
(d)	<p>2 o'clock</p>  	1

<b>5</b>	Answer the following questions.	
<b>(a)</b>	Circle the month that comes before April  January                  May                  March	<b>1</b>
<b>(b)</b>	Circle the month that comes after October  July                  November                  February	<b>1</b>
<b>(c)</b>	Circle the month that comes before August  December                  July                  May	<b>1</b>
<b>6</b>	Fill in the blanks for the following:  There are _____ days in a week.	<b>1</b>
<b>7</b>	Fill in the blanks for the following:  There are _____ months in a year.	<b>1</b>