

# Level 3 Learning Outcomes & Benchmarks

**SCN 3-01a - I can sample and identify living things from different habitats to compare their biodiversity and can suggest reasons for their distribution. Identify living things using biological keys.**

- Identifies living things using biological keys. Collects and analyses increasingly complex data and information, for example, temperature and light intensity, to suggest reasons for the distribution of organisms within different habitats.

**SCN 3-02a - I have collaborated on investigations into the process of photosynthesis and I can demonstrate my understanding of why plants are vital to sustaining life on Earth.**

- Describe the process of photosynthesis (using the word equation) in terms of reactants (raw materials) and products.
- Apply knowledge gained from practical investigations to explain how green plants make their own food in the form of sugars and store this as starch.
- Investigate and present information on how plants help to sustain life, for example, by providing oxygen, food, habitat, raw materials and medicines.


**SCN 3-03a - Through investigations and based on experimental evidence, I can explain the use of different types of chemicals in agriculture and their alternatives and can evaluate their potential impact on the world's food production.**

- Interprets data and information to establish a link between the use of fertilisers and plant yield and nutrient levels in the soil. Researches an agricultural method, for example, chemical fertilisers, herbicides, pesticides, organic methods, genetic modification (GM) and biological control and evaluates their impact on food production.

**NB 2<sup>nd</sup> level outcomes and 4<sup>th</sup> level outcomes are at the end of the powerpoint. The assessment target for S2 is LEVEL 3 but some pupils may be "supported" with L2 or "stretched" with L4**

## Starter:

Write down living things that might live in this woodland ecosystem

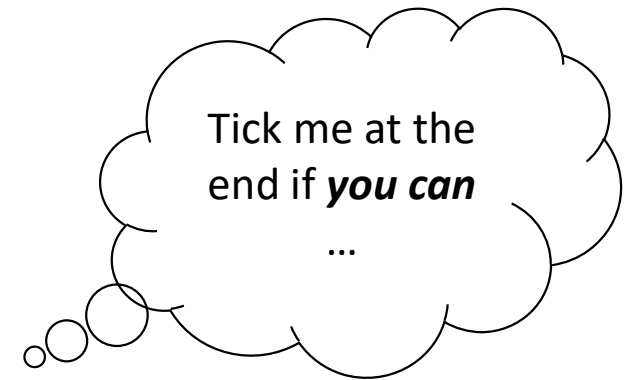


## **Learning Intentions:**

1. To understand and explain what an ecosystem is
2. To define key biological words

## Success Criteria

- ☐ I can describe an ecosystem
- ☐ I can use the biological words in the word bank



### Word bank

*predator*

*prey*

*carnivore*

*herbivore*

*producer*

*consumer*

*habitat*

*population*

*ecosystem*

*omnivore*

*community*

*SCN 4-01a - I can use scientific vocabulary such as 'population', 'community' and 'species'.*



# Ecosystems

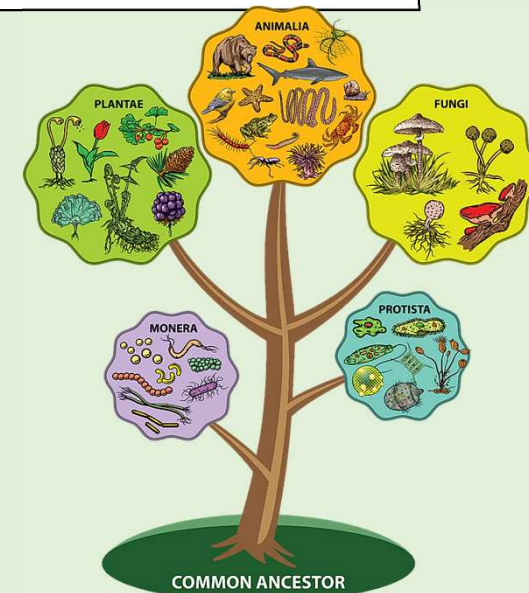
An **ecosystem** is made up of both living and non-living parts.

It is made up of a number of habitats and communities.



Non-living parts might include rocks, air, water or even rubbish!!!

Living parts could include animals, plants, fungi, algae and bacteria!



# Ecosystems

A **habitat** is the place where an organism lives

A **community** is ALL the living organisms that live in a specific habitat

A community contains lots of different species.

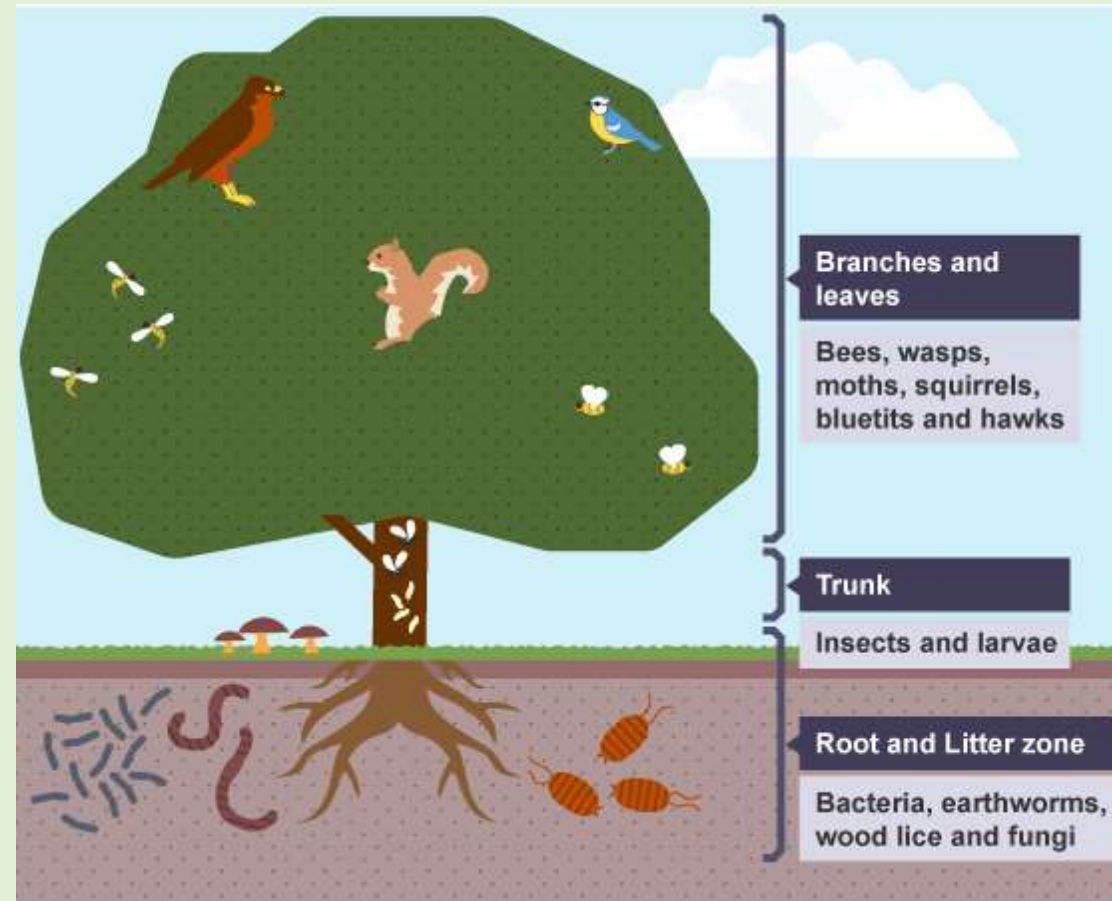


# Example of an ecosystem

This oak tree is in a woodland **ecosystem**.

Each zone of the oak tree can be seen as a **habitat** for a distinct **community** of organisms.

These organisms could be plants, animals, or even micro-organisms.




# Ecosystems

[Video clip](#)

Page 5

**Watch** the video clip. **Complete** the table to show one example of a plant and one example of an animal for each layer of the ecosystem.

Layer of Ecosystem	Example of plant	Example of animal
Canopy	<b>oak tree</b>	<b>buzzard</b>
Sub-canopy	<b>holly</b>	<b>small birds</b>
Overground		<b>deer</b>
Herb layer	<b>bluebell</b>	<b>caterpillars</b>
Ground layer	<b>moss</b>	<b>beetle</b>
Underground	<b>plant roots</b>	<b>fox</b>

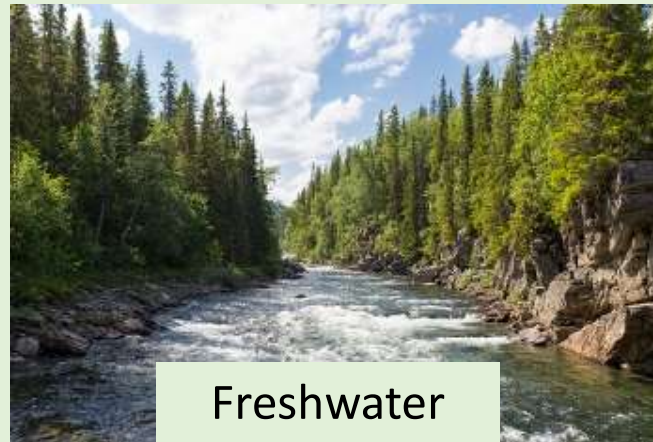




# Other ecosystem examples include...



Forests



Freshwater




Marine



Grasslands



Tundra



Deserts

# Ecosystems

Ecosystems are stable if they have large biodiversity

This means that there are lots of different species living in the ecosystem.



# Key biological terms

Key term	Definition
Predator	
	An organism that is hunted and killed
Carnivore	
	An organism that only feeds on plants
Omnivore	
	An organism that produces its own food.
Consumer	
	The place where and organism lives
Population	
	All the living organisms in a habitat
Ecosystem	





# Key biological terms

Page 5

Key term	Definition
Predator	An organism that hunts and kills another organism
Prey	An organism that is hunted and killed
Carnivore	An organism that only feeds on animals
Herbivore	An organism that only feeds on plants
Omnivore	An organism that feeds on both plants and animals
Producer	An organism that makes its own food
Consumer	An organism that gets its energy from eating other organisms
Habitat	The place where an organism lives
Population	All of the organisms of the same species living in a habitat
Community	All the living organisms in a habitat
Ecosystem	A biological unit made up of a number of habitats and communities



# Introduction to the Environment

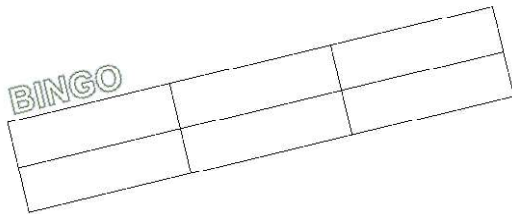
09/01/2025

## Plenary: BINGO!

Page **BACK OF**  
**BOOKLET**

Write 6 words from the word bank into the grid at the **back of your booklet.**

Listen to the descriptions your teacher reads out and cross off the words in your grid.  
Once you have all crossed off shout BINGO!



### Word bank

*predator**prey**carnivore**herbivore**producer**consumer**habitat**population**ecosystem**omnivore**community*

## Success Criteria

- ☐ I can describe an ecosystem
- ☐ I can use the biological words in the word bank

Tick me at the  
end if ***you can***

...

## Slide 13

---

**MG3**

USE THE DEFINITIONS ON THE PREVIOUS SLIDE TO CALL THE BINGO!!!

Mrs Gannon, 27/09/2023



# HOMework TASK

Page BACK OF  
BOOKLET

**Aim: To produce a poster on a chosen ecosystem:**

**DESERT or TUNDRA or MARINE or FOREST or GRASSLAND**

**Success Criteria:**

- **State WHERE on Earth your ecosystem can be found.**
- **Identify CLIMATE in your chosen ecosystem** (*temperature range, rainfall, wind speed, etc.*)
- **Identify EXAMPLES of both plants and animals**
- ★ **Comment on the BIODIVERSITY of your chosen ecosystem**
- ★ **Suggest how HUMANS may impact on the BIODIVERSITY of your ecosystem**

**SCN 3-01a SCN 4-01a SCN 4-20b**



## Starter:

**Correct** the following statements

1. An omnivore is an organism that eats only plants.
2. A producer gets its energy from consuming other organisms.
3. A population is all the living organisms in a habitat.



**Starter:** Did you get any of these????

1. A **herbivore** is an organism that eats only plants.  
An omnivore is an organism that eats **plants and animals**.
2. A **consumer** gets its energy from consuming other organisms.  
A producer gets its energy from **the sun**.
3. A population is all the living organisms **of one species** in a habitat.



## **Learning Intentions:**

1. To describe how energy flows between organisms in ecosystems
2. To construct and analyse food chains
3. To label our food chains with the key terms producer, consumer, herbivore, omnivore, carnivore

# Interactions in an Ecosystem

Ecosystems survive through the interactions between plants and animals. Without these interactions, ecosystems risk being broken down.




The interactions between plants and animals in an ecosystem can be displayed using food chains and food webs.

[Video clip](#)



# Food Chains Example



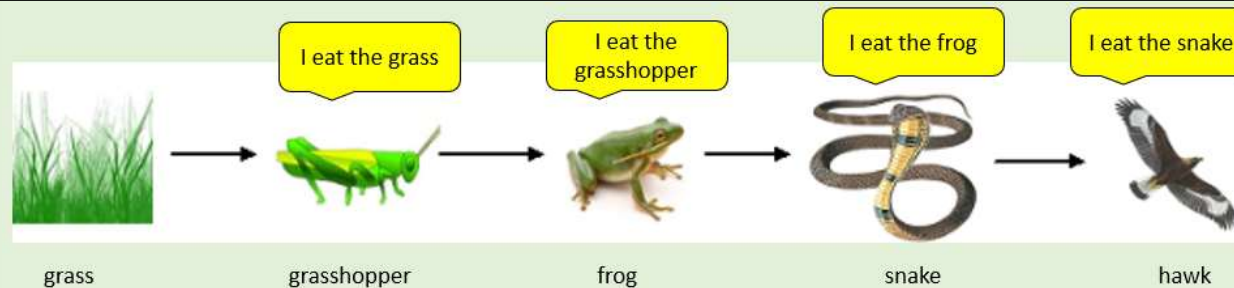
The arrows in a food chain show the direction the energy is flowing.

For example, energy flows from the grasshopper to the frog.



# Food Chains

Plants are known as producers. This is because they create their own food using a process called *photosynthesis*\*\*\*. Producers are at the bottom of the food chain and serve as the foundation for all food chains. We always draw the producer at the **start** of our chain.



\*\*\*  
We will look at photosynthesis later on in this unit

All other organisms in a food chain must eat other organisms to get their energy. They are consumers.



## EXTRA

- Circle the producer
- Underline the consumers
- Write the name of a predator
- Write the name of a prey species



# Producers or consumers

Split the following examples into two groups: **producers or consumers**



# Producers or consumers



What do you  
notice about all  
of the  
producers?

PRODUCERS	CONSUMERS
Grass	Sheep
Moss	Fox
Algae	Lion
Tree	Clown fish
Cacti	Sparrow



# Food Chains Example

A food chain shows which animals eat each other within an ecosystem. It starts at the beginning with plants which are referred to as a producer because they make their own food.



The first animal in the food chain only eats plants and so it is referred to as a herbivore. The other animals in the food chain that only eat other animals are known as a carnivore. The animals, including humans, that eat plants and other animals are known as an omnivore.

The animals in the food chain which prey on other animals are called predators. The animals that get hunted by the other animals are called prey.

Word bank:

Carnivore/Plants/Predators/Herbivore/Animals/Producer/Omnivore/Prey



# Food Chains Example

Arrange the following organisms into a food chain




Arctic Fox

grasses + heather



Arctic Wolf




Producers	1 <sup>st</sup> Consumer	2 <sup>nd</sup> Consumer	3 <sup>rd</sup> Consumer

Hare



# Food Chains Example

Page 7



Grasses +  
Heathers

Hare

Fox

Wolf

The grasses and  
heathers are eaten  
by the hare

The hare is eaten by  
the fox

The fox is eaten by  
the wolf

# More Food Chain Examples



Draw food chains for the following examples:

1. Rat, corn, owl
2. Hawk, grass, snake, mouse
3. Fruit fly, eagle, mango, thrush
4. Crab, killer whale, seaweed, squid, seal

## Think:

- Which way should your arrows be pointing?
  - What does this represent?

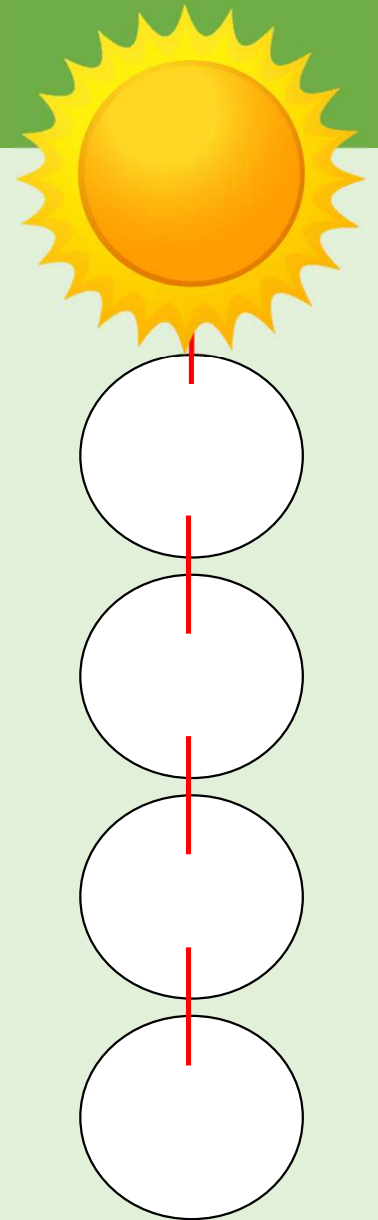
# Food Chain Activity

Use the cut outs to create your own food chain.

In pairs, you will need:

- 1 sun cut-out
- 4 circles
- String

1. Draw a different organism on each of the circles.
2. On the back of each circle, label whether they are a producer or a consumer.
3. Assemble your food chain using string.
4. Challenge: Can you work out if any of your organisms are predator or prey?  
Write this on the back.



# Food Chain Plenary

BBC Bitesize food chain challenge.  
How many food chains can you find?



[Link to game](#)

OR

## Plenary

*Unscramble to reveal some of today's terms!*

cup order	green wolfy	mon curse	teardrop	pyre

producer

consumer

pyre

energy flow


predator

## Starter:

1. Does a grasshopper only eat carrots? Does a snake only eat frogs? What other things might these organisms eat?



2. How could we display this information?

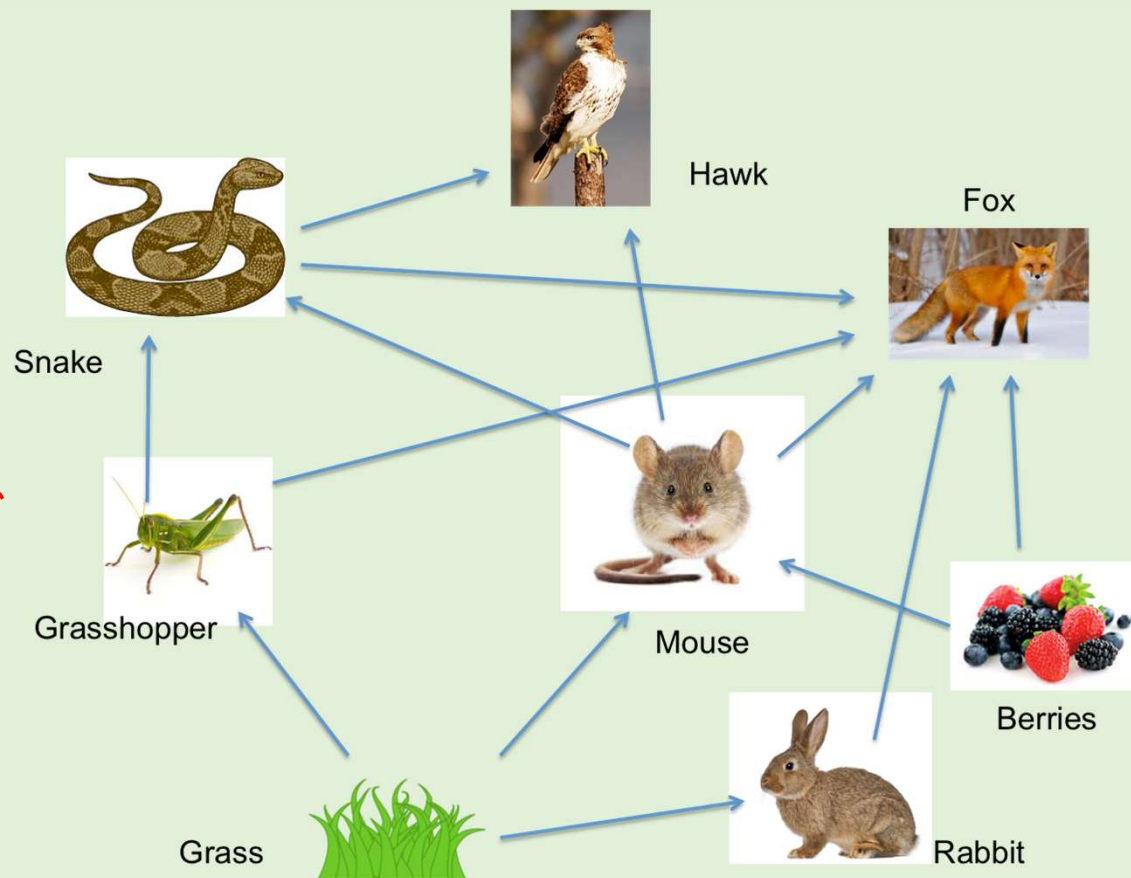


## Learning Intentions

1. To be able to select food chains from a food web
2. To explain what happens when an organism is added or removed from a food web **SCN 4-01a**



# Food webs



Consumers can't rely on just one food source. For this reason, food chains tend to overlap.

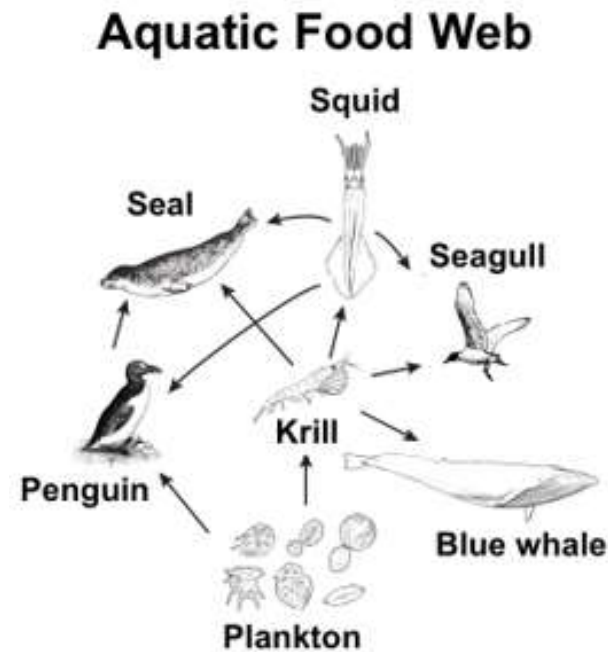
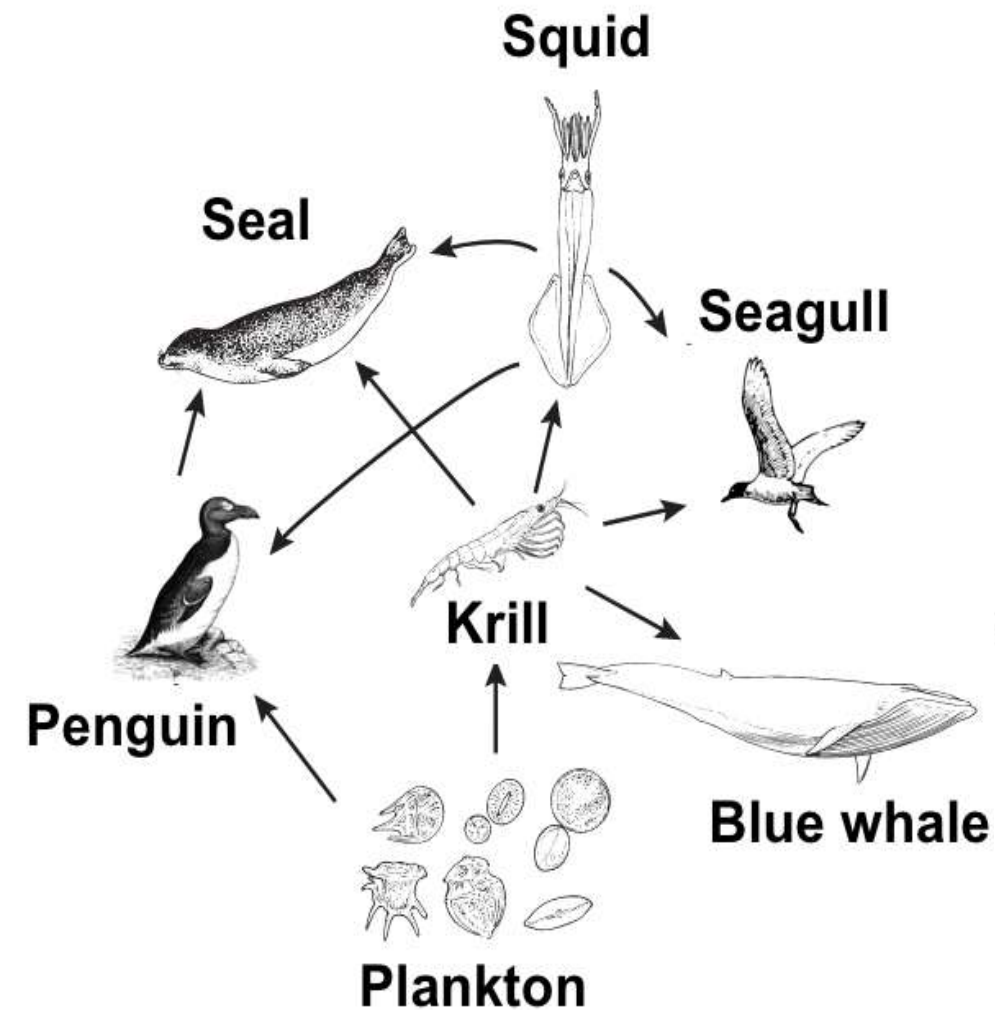
This can be shown using a **food web**.

Look at the food web and complete the blanks:

- The \_\_\_\_\_ gets its energy by eating BOTH grass and berries.
- The \_\_\_\_\_ gets its energy by eating snakes, grasshoppers, mice, rabbits AND berries.
- The \_\_\_\_\_ gets its energy by consuming mice and snakes.
- The \_\_\_\_\_ gets its energy by consuming grasshoppers and mice.
- The \_\_\_\_\_ and the \_\_\_\_\_ only eat grass.



# Food webs



This is an example of an aquatic food web.

Can you identify and write down a food chain with **3 organisms only**?

**plankton → penguin → seal**

Can you identify and write down a food chain with **4 organisms only**?

**plankton → krill → squid → seal**

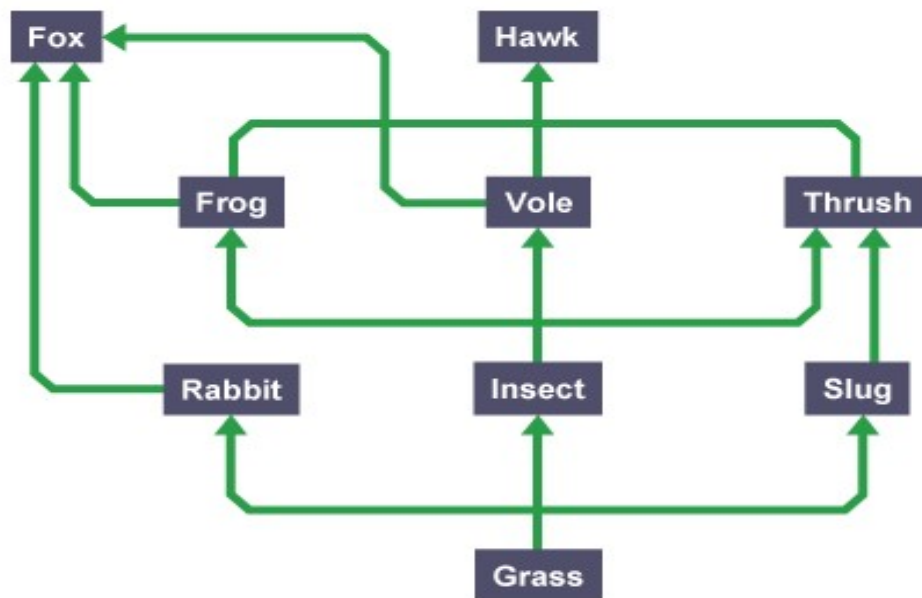
What is the **maximum number of different** food chains in this food web?

**8?**

What is the **maximum number of different food chains** in this food web?

# Food webs

A **food web** shows the feeding relationships among different species within a habitat. The **arrows** in a food chain and food web show the direction that the energy is flowing.



Although it looks complicated, it is just several food chains joined together.

Can you complete the food chains in this food web?

grass → insect →     ?     →     ?    .

grass → insect →     ?     →     ?    .

grass → slug →     ?     →     ?    .



# Food webs

**Think:** What might happen if we add or remove an organism from the food web?

Scenario 1:

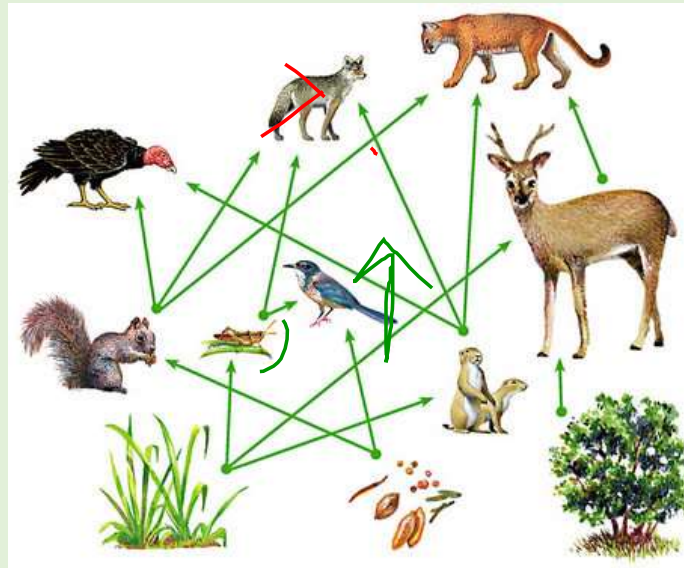
A **disease** could destroy all the corn

Scenario 2:

The wolves could be **hunted** to extinction

Scenario 3:

Grey squirrels could be introduced and could **compete** with the red squirrels



Can you identify all of the species above????

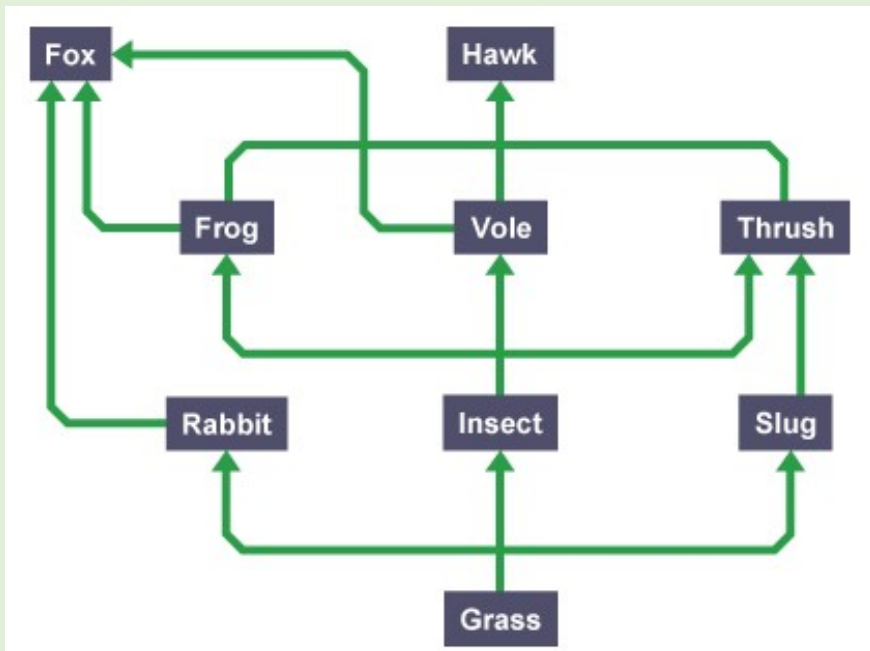
DEER	MARMOT	KINGFISHER	VULTURE
LYNX	WOLF	RED SQUIRREL	BERRIES
CORN	SEEDS	GRASSHOPPER	BUSH

If we remove an organism, some animals can just eat more of a different organism

If we remove a predator, some prey populations will grow and grow and grow!

If we introduce a new species, food will be less available. Competition may be strong and weaker individuals will starve and die

# Food webs



Try the questions in your booklet.....



1. What would happen if the grass died?
2. If the population of slugs decreased, what would happen to the population of a) grass and b) thrush?
3. Challenge: a large population of bears were introduced to the ecosystem. Bears prey on foxes. Predict what would happen to a) the fox population and b) the rabbit population

# Task: Creating a food web

1. Arrange the organisms into a food web.
2. Use the feeding relationships table to help.
3. Draw arrows in between the organisms to show which way the energy is flowing.

Organism	What organism consumes
Rabbit	Grass
Vole	Insects
<i>Grass (producer)</i>	
Slug	Grass
Thrush	Insects, Slugs
Frog	Insects
Hawk	Frogs, Voles, Thrush
Insect	Grass
Fox	Rabbits, Frogs, Voles

# Plenary

Roll the dice twice and answer the question about today's lesson.

	1	2	3	4	5	6
1	Explain what you learnt in the lesson today.	How does this topic link to another subject?	What would you do differently next time?	What is your target for next lesson?	Can you list three key words from today's lesson?	How do you know you have progressed?
2	What question(s) do you still have?	Why do you think we are learning about this topic?	What did you enjoy about the lesson today?	What went well today for you?	Did you achieve any targets today?	Which of the traffic light colours would you use to describe your understanding of the lesson?
3	What skills have you developed this lesson?	When do you think today's lesson will help you?	How did you learn today?	What do you feel confident about?	Is there a key fact or point you must remember from this lesson?	Has anything inspired you today?
4	Describe the lesson using three adjectives.	Sum up the lesson in a sentence.	How could today's lesson be improved?	Did you make any mistakes today that you can learn from?	What is the most important thing you have found out in the lesson?	What was your contribution to the lesson?
5	Is there anything you did not understand in the lesson today?	Have you learnt something new this lesson?	Did you work develop any of your literacy and/or numeracy skills today?	What has really stuck with you today?	Did you try your best today in the lesson?	Where does today's lesson fit into the whole topic, what is the bigger picture?
6	What do you need to practice more?	Did you know anything before the lesson that helped you today?	How can the teacher help and support you more next lesson?	What was the most challenging part of the lesson for you?	How would you describe your level of effort for this lesson?	What has been your greatest success today in the lesson?



# HOMework TASK

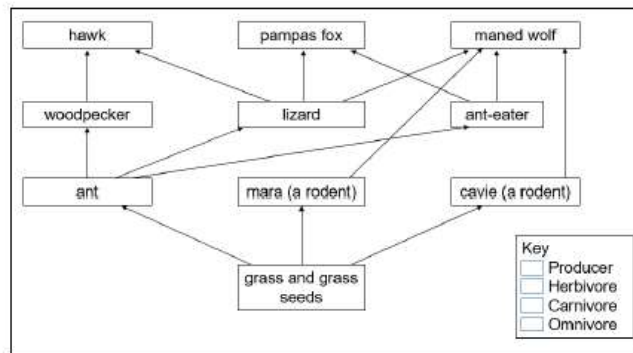
\\acad-kik-file\shared files\Curriculum Areas\Science\S1 S2 SCIENCE\S2 COURSE\NEW S2 COURSE\Science and the Environment\Biodiversity IG\Ecosystems\Homework

## Food Chains and Food Webs Homework S2 Science – Science in the Environment

Name \_\_\_\_\_

In the pampas (grassland) of South America the climate is just right for grass – never hot enough to dry all the grass out, or cold enough to stop it growing. There is also rain all year round.

This diagram shows part of a food web in the pampas, which depends on grass for its survival.



Check the 'further facts' box and answer the questions

- Plants make their own food using sunlight. They are called **producers**. Colour the box showing the producer green.
- Using the 'further facts' add two more arrows from the producer box.
- Animals that eat only plants are called **herbivores**. Colour the boxes containing the herbivores yellow.
- Animals that eat both plants and animals are called **omnivores**. Colour the omnivores blue.
- Animals that only eat other animals are called **carnivores**. Colour these boxes red.
- Complete the key
- Complete the food chain using the food web to help you.



- On the back of this sheet, write out three more food chains that exist in the pampas.

### Further facts

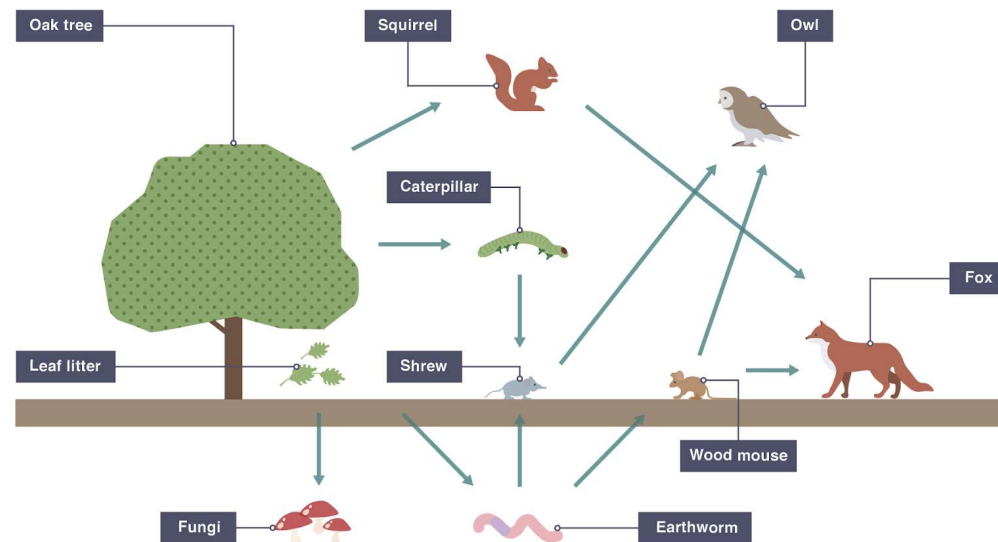
- Woodpeckers eat grass seeds as well as insects.
- Maned wolves like fruit as well as flesh!
- The pampas fox eats grass seeds and berries too.
- Ants also eat flies and other insects.
- Maras and cavies are strictly vegetarian!
- Hawks, ant-eaters and lizards don't eat plants.

**SCN 3-01a:** I can collect and analyse increasingly complex data and information, to suggest reasons for the distribution of organisms within different habitats.

## Starter:

What would happen if the wood mouse was removed from the food web?

- a. To the fox population?
- b. To the shrew population?
- c. To the red squirrel population?



## Learning Intentions

1. To explain why we need to take samples
2. To describe how to measure living and non-living factors



# Sampling in an Ecosystem

Why do we need to sample?

It is **impossible** for us to count each and every kind of (and the number of each) plant and animal in a habitat.

It would be like trying to count different sizes and colours of grains of sand on the beach!



# Sampling in an Ecosystem

The variety (how many different species) and abundance (how many individuals in a population) tells us about the level of biodiversity. The level of biodiversity tells us how healthy an ecosystem is.

lots of species + lots of individuals = high biodiversity

few species + few individuals = low biodiversity




few species + lots of individuals = unstable biodiversity

*Complete the table on Page 10*



# Sampling in an Ecosystem



Ecosystem	Variety <i>How many different species</i>	Abundance <i>How many of each species</i>	Biodiversity level <i>Low / high / unstable</i>
	<b>2</b> <b>(bird + tree)</b>	<b>2</b> <b>(1 bird + 1 tree)</b>	<b>LOW</b>
	<b>9</b> <b>(birds + trees + frogs + deer + plants + flowers + rabbits + ducks + mice)</b>	<b>9</b> <b>(3 birds + 2 trees + 1 frog + 2 deer + 6 plants + 4 flowers + 1 rabbit + 3 ducks + 2 mice)</b>	<b>HIGH</b>
	<b>2</b> <b>(plants + rabbits)</b>	<b>9</b> <b>(18 plants + 2 rabbits)</b>	<b>UNSTABLE</b>

lots of species + lots of individuals = **high biodiversity**  
 few species + few individuals = **low biodiversity**  
 few species + lots of individuals = **unstable biodiversity**





# BIG BUTTERFLY COUNT

15 JULY - 7 AUGUST 2022

Spend 15 minutes in a sunny spot. Use this chart to note how many of each species you see. Then submit your sightings at [www.bigbutterflycount.org](http://www.bigbutterflycount.org) or download our free app

DFN Charitable Foundation



Large White



Small White



Green Veined White



Common Blue




Holly Blue



Small Copper



Speckled Wood



Meadow Brown




Ringlet



Scotch Argus




Comma



Painted Lady



Peacock




Red Admiral



Small Tortoiseshell



Silver Y



Six-spot Burnet



Don't forget to join us online with [#ButterflyCount](https://www.instagram.com/butterflycount)



Males and females of some species vary and are not all illustrated on this chart. Please refer to the Big Butterfly Count app or website for more information on how to identify butterflies and moths correctly.

Images not to scale




We can investigate an ecosystem by using sampling techniques

We can sample variety and abundance of plants and animals:  
living factors .

We can also measure non - living factors such as temperature, soil pH and light intensity



quadrat



pit fall trap



thermo-  
meter



pH meter



light meter



# Sampling Ecosystems

09/01/2025

quadrat



Quadrats are used to sample plants (or very slow animals!)

pit fall trap



Pit fall traps are used to sample invertebrates (like insects)

Both **quadrats** and **pit fall** traps allow us to estimate **living factors** like abundances of plant species and animal species

# Sampling Ecosystems

09/01/2025

thermometer



temperature!

pH/soil moisture meters



soil pH and soil moisture!

light meter



light intensity!

**Thermometers, pH meters, soil moisture meters and light meters are just a few of the tools we can use to measure non-living factors.**



# Sampling: lets go outside!!!!

09/01/2025

Lets look at this quadrat sample first.....

Quadrats have 5x5 squares

Rather than count individual plants, 😞  
We count the number of squares that  
contain a plant species.

This gives us an abundance score out of 25.

The abundance score of daisies in this  
sample is.....






# Sampling: lets go outside!!!!

09/01/2025

What if one plant is in more than one square???? Like this dandelion?

We have to agree a rule so that we don't count the same plant twice

The easiest way to do this is to only count plants in if most of the plant touches the **left and bottom** sides of the square.



Lets try this on the next slide.....





# Sampling: lets go outside!!!!

09/01/2025

Remember the “L-rule!”  
**left and bottom** sides of the square.

We would say that the abundance score for dandelions in this sample is 3.

What do you think the abundance score is for grass?!!!!






# Sampling: lets go outside!!!!

09/01/2025

Remember the “L-rule!”  
**left and bottom** sides of the square.

We would say that the abundance score for dandelions in this sample is 3.

What do you think the abundance score is for grass?!!!! 😊



# Sampling: lets go outside!!!!

09/01/2025

What if our quadrat was in a part of the field that just didn't have many daisies?

To get a more reliable estimate, we should sample more than one area of the field!

How many samples?

Well that depends!!!!





# Sampling: lets go outside!!!!

09/01/2025



What if our quadrat was in a part of the field that just didn't have many daisies?

To get a more reliable estimate, we should sample more than one area of the field!

How many samples?

Well that depends!!!!

Is the field very big???




# Sampling: lets go outside!!!!

09/01/2025

Page 11

How to use a quadrat:

1. **Identify** a plant (daisies/clover/etc.)
2. **Record** the name of your plant in the table
3. Throw the quadrat randomly
4. **Count the number of squares** that have **your plant**
5. Record the abundance score in the table
6. **Repeat** another 9 times
7. Take an average of the ten throws



Quadrat	Number of _____
1	
2	
3	
4	
5	
6	
7	
8	
9	
10	
<b>Average</b>	
per quadrat	

# Quadrats: Shared working

09/01/2025

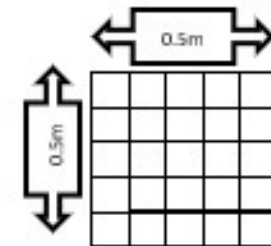
Page 11

Quadrat	Number of _____
1	
2	
3	
4	
5	
6	
7	
8	
9	
10	
Average	
per quadrat	

## Numeracy extension:

1. Our quadrat measures 0.5 metres by 0.5 metres.  
What is the area of ONE quadrat?

*space for working*



Answer = \_\_\_\_\_ m<sup>2</sup>

2. What was the **average** abundance score *(from table)*?

Answer = \_\_\_\_\_ plants

3. The area we sampled was 20 metres by 60 metres  
Work out the area of our sample?

*space for working*

Answer = \_\_\_\_\_ m<sup>2</sup>

4. What is our estimate of the total number of plants in our sample area?

*space for working*

Answer = \_\_\_\_\_ estimated plants in area.

*Hint: Divide the total area (qn 3) by the area of one quadrat (qn 1)  
Then, multiply this by our average abundance score (qn 2)*

# Quadrats: Example of working

09/01/2025

Page 11

Quadrat	Number of <b>daisies</b>
1	<b>5</b>
2	<b>8</b>
3	<b>13</b>
4	<b>5</b>
5	<b>5</b>
6	<b>1</b>
7	<b>6</b>
8	<b>8</b>
9	<b>6</b>
10	<b>3</b>
<b>Average daisies per quadrat</b>	<b>6</b>

Average =  $\frac{\text{sum of numbers}}{\text{number of samples}}$

$$\text{Average} = \frac{5+8+13+5+5+1+6+8+6+3}{10}$$

$$\text{Average} = \frac{60}{10} = 6$$

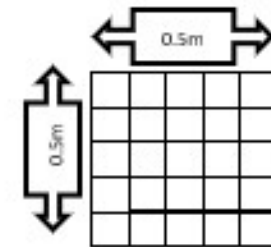
Numeracy extension:

1. Our quadrat measures 0.5 metres by 0.5 metres.  
What is the area of ONE quadrat?

*space for working*

$$0.5 \times 0.5 = 0.25$$

$$\text{Answer} = \underline{0.25} \text{ m}^2$$



2. What was the **average** abundance score (from table)?

$$\text{Answer} = \underline{6} \text{ plants}$$

3. The area we sampled was 20 metres by 60 metres  
Work out the area of our sample?

*space for working*

$$20 \times 60 = 1200$$

$$\text{Answer} = \underline{1200} \text{ m}^2$$

4. What is our estimate of the total number of plants in our sample area?

*space for working*

$$\frac{1200}{0.25} \times 6 = 4800 \times 6$$

$$\text{Answer} = \underline{28,800} \text{ estimated plants in area.}$$

Hint: Divide the total area (qn 3) by the area of one quadrat (qn 1)  
Then, multiply this by our average abundance score (qn 2)



# Rainy Day Quadrats



09/01/2025

There are a number of different ways we can practice using quadrats....

- Wrapping paper and 5cm x 5cm quadrat
- On the floor with stationary or buttons using our 0.5m x 0.5m quadrat
- On the smartboard on next slide!!!





# Plenary



Try to come up with a key word from this topic worth the most points in Scrabble.

See if you can beat the rest of the class!

# Sampling animals: Pitfall traps

09/01/2025

Page 12



## Starter:

1. State the piece of equipment that can be used to sample plants
2. Three quadrats were thrown. The results were as follows:

Quadrat Number	Abundance of daisies
1	12
2	10
3	5

Calculate the average number of daisies per quadrat.

3. The area of the quadrat is **1 m<sup>2</sup>** and the area of the whole field is **100 m<sup>2</sup>**.  
Calculate the estimated number of daisies in the **whole field**.



## **Learning Intentions:**

1. To sample invertebrates using a pit fall trap
2. To identify some invertebrates using a biological key

## Success Criteria

- ☐ I can use a pitfall trap to sample invertebrates
- ☐ I can use a biological key to identify some invertebrates

Tick me at the  
end if ***you can***

...

## Word bank

***Invertebrates***

***sample***


***pitfall trap***



- Pitfall traps are used to sample the **organisms** that live in the **soil**.

How to set up a pitfall trap:

1. Dig a hole in the soil
2. Pierce drainage holes in the bottom of the pitfall trap
3. Place the pitfall trap into the soil, level with the ground
4. Cover the trap with a leaf
5. When you come back to check your traps: **take pictures.....** you might be able to identify them later when we learn about biological keys!



- The pitfall trap was checked after 4 days and the following organisms counted:

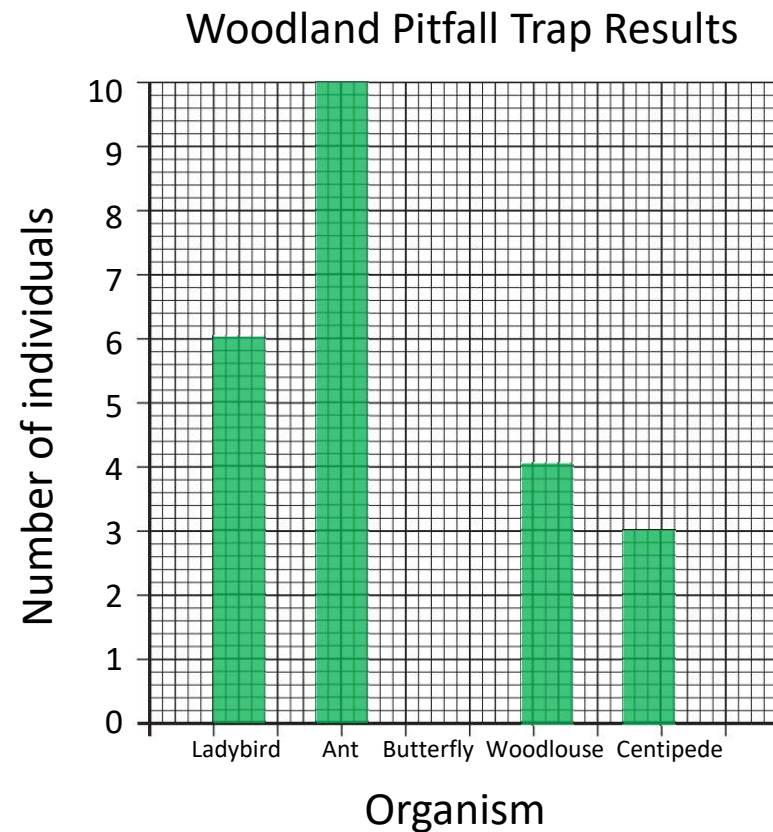
Organism	Number of individuals
Ladybird	6
Ant	10
Butterfly	0
Woodlouse	4
Centipede	3

- Activity: Construct a BAR graph using this information



## Bar Graph: WAGOLL

- Title
- X-axis label
- Y-axis label + units
- Appropriate scale
- Neat bars
- Correctly drawn bars



# Sampling animals: Pitfall traps

09/01/2025

Page 13

Conclusion:

The most abundant organism was \_\_\_\_\_

The least abundant organism was \_\_\_\_\_

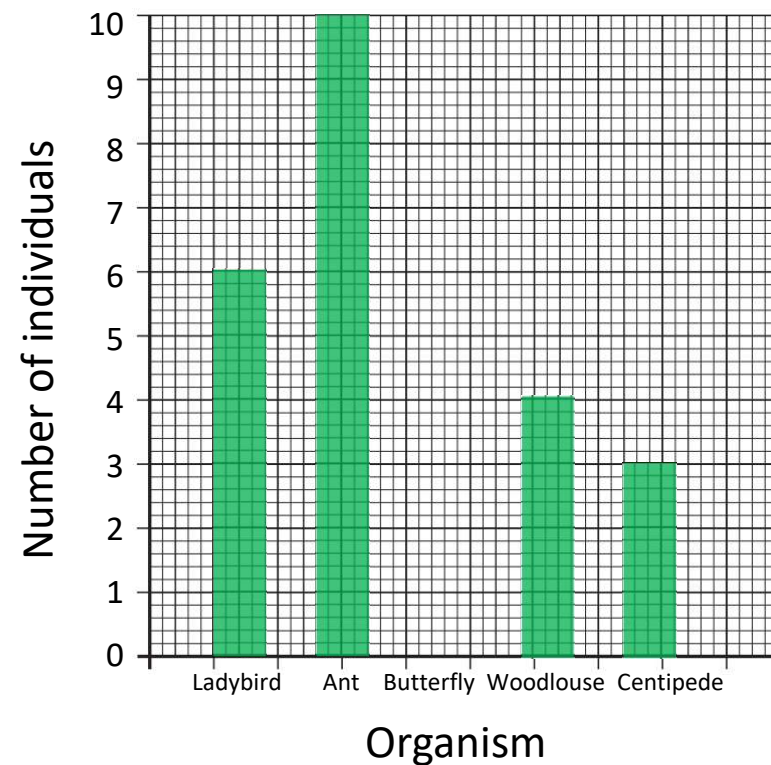
Why?

---

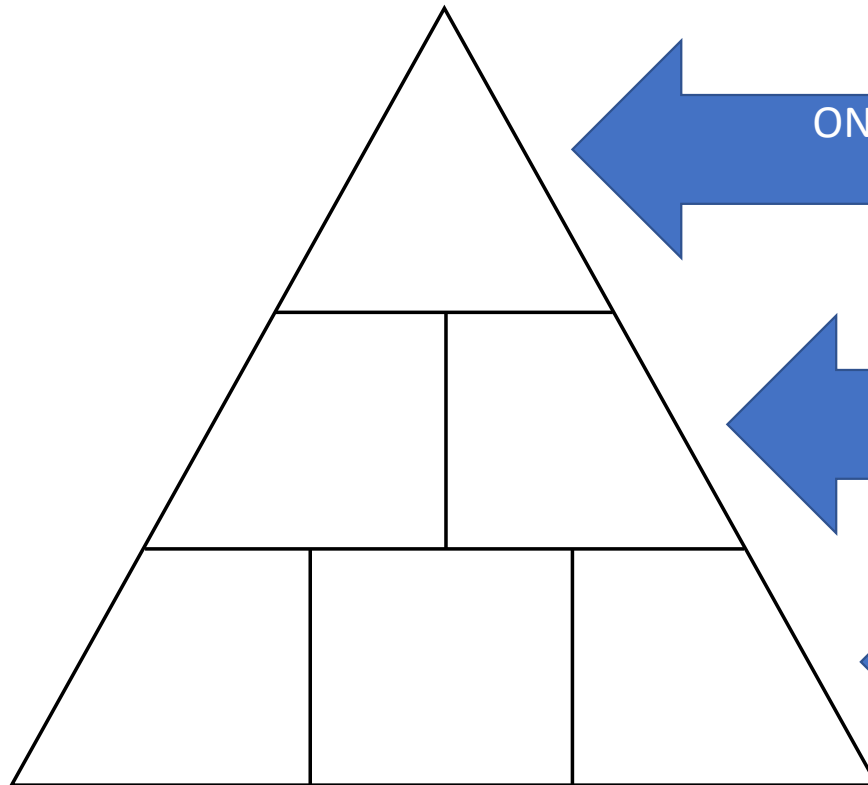
---

---

Woodland Pitfall Trap Results



## Plenary:



ONE thing I **still want to know** about  
SAMPLING ECOSYSTEMS

TWO things I **knew already**



THREE things I **learned today**

# Measuring Abiotic factors

09/01/2025

Page 14

**Starter:** Today we will be learning about measuring abiotic factors. Do you know what any of the devices below can be used to measure?





## **Learning Intentions:**

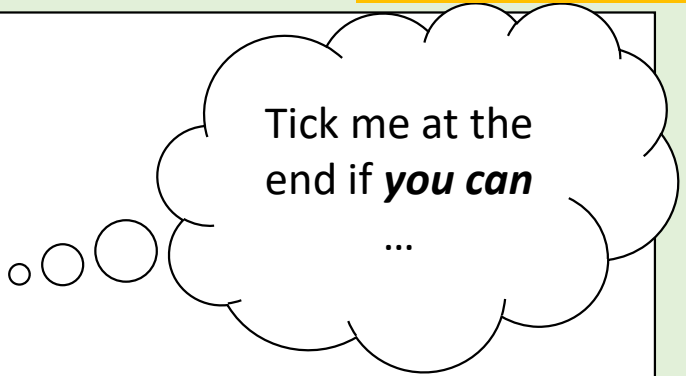
1. To state what an abiotic factor is
2. To name some examples of abiotic factors
3. To investigate an abiotic factor
4. To explain why measuring abiotic factors might be important

## Success Criteria

- ☐ I can state what an abiotic factor is
- ☐ I can name an abiotic factor
- ☐ I have investigated an abiotic factor

## Word bank

*abiotic*      *factor*      *measure*      *specific*



Tick me at the end if ***you can*** ...

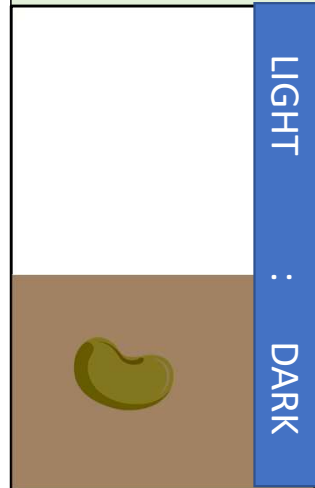


**Abiotic** factors are non-living factors such as temperature, soil pH and light intensity. Other examples include wind speed, carbon dioxide/oxygen levels, humidity, rainfall and air pressure but there are MANY MORE!

Living things need **specific** environmental conditions to survive.

For example:

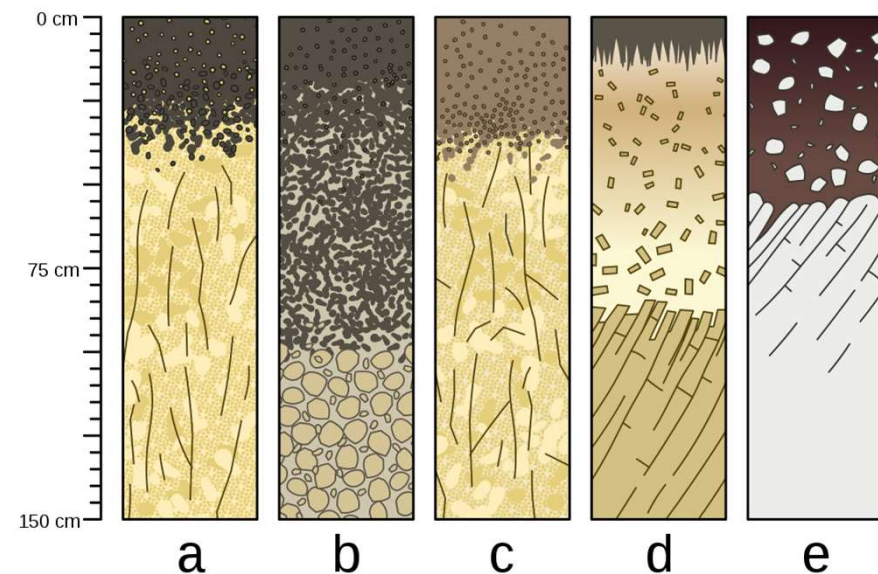
**Seeds** need water, oxygen and a suitable temperature to germinate. When the **seedling** comes through the soil it needs water, carbon dioxide, a suitable temperature and **LIGHT** to carry out photosynthesis (we will be learning about this soon!).



Plants need moisture to grow. You can use a moisture meter to measure soil moisture in the garden. You can also carry out an experiment to measure the percentage (%) water content in soil samples:

The picture shows 5 soil samples and the different compositions they have.

*What do you think the y-axis scale shows?  
How might soil type affect living things?*



**SCN 3-01a:** Identifies living things using biological keys. Collects and analyses increasingly complex data and information, for example, temperature and light intensity, to suggest reasons for the distribution of organisms within different habitats.

Aim: To investigate the moisture levels in different soil samples.

Kit:



Soil samples  
Oven  
Fine balance

Large spatula  
Metal crucible/foil case  
Access to soap & water!





## Method:

1. Use a large spatula to take soil samples from different areas in the school grounds.
2. Put each sample in a labelled sample bag
3. In the lab, weigh an EMPTY crucible and record the mass in your results table.
4. Transfer your soil sample to the crucible and re-weigh. Record the mass in your results table.
5. Place the crucibles in a warm place (your teacher may put them in an oven until next lesson)
6. Next lesson, re-weigh the crucible and work out how much water has evaporated.

## Results:

Sample Number	Sample location	Mass of empty crucible (g)	Mass of crucible plus "wet soil" (g)	Mass of "wet soil" (g)	Mass of crucible plus "dry soil" (g)	Mass of "dry soil" (g)	Mass of water evaporated (g)	Percentage water content of sample %
		a	b	c (b - a)	d	e (d - a)	f (e - c)	$\frac{f}{c} \times 100$
<i>example</i>	<i>polycrub</i>	0.2	2.4	$\frac{2.4 - 0.2}{= 2.2}$	0.8	$\frac{0.8 - 0.2}{= 0.6}$	$\frac{2.2 - 0.6}{= 1.6}$	$\frac{1.6}{2.2} \times 100$ = 73 %



## Example Results:

Sample Number	Sample location	Mass of empty crucible (g)	Mass of crucible plus "wet soil" (g)	Mass of "wet soil" (g)	Mass of crucible plus "dry soil" (g)	Mass of "dry soil" (g)	Mass of water evaporated (g)	Percentage water content of sample %
		a	b	c (b - a)	d	e (d - a)	f (c - e)	$\frac{f}{c} \times 100$
<i>example</i>	<i>playing field</i>	0.2	2.4	$2.4 - 0.2$ = 2.2	0.8	$0.8 - 0.2$ = 0.6	$2.2 - 0.6$ = 1.6	$\frac{1.6}{2.2} \times 100$ = 73 %
1	Long jump pit	0.2	2.8	$2.8 - 0.2$ = 2.6	2.4	$2.4 - 0.2$ = 2.2	$2.6 - 2.2$ = 0.4	$\frac{0.4}{2.6} \times 100$ = 15%
2	woodland	0.2	3.0	$3.0 - 0.2$ = 2.8	1.6	$1.6 - 0.2$ = 1.4	$2.8 - 1.4$ = 1.4	$\frac{1.4}{2.8} \times 100$ = 50%
3	marshland	0.2	5.0	$5.0 - 0.2$ = 4.8	1.2	$1.2 - 0.2$ = 1.0	$5.0 - 1.0$ = 4.0	$\frac{4.0}{4.8} \times 100$ = 83%





Conclusion:

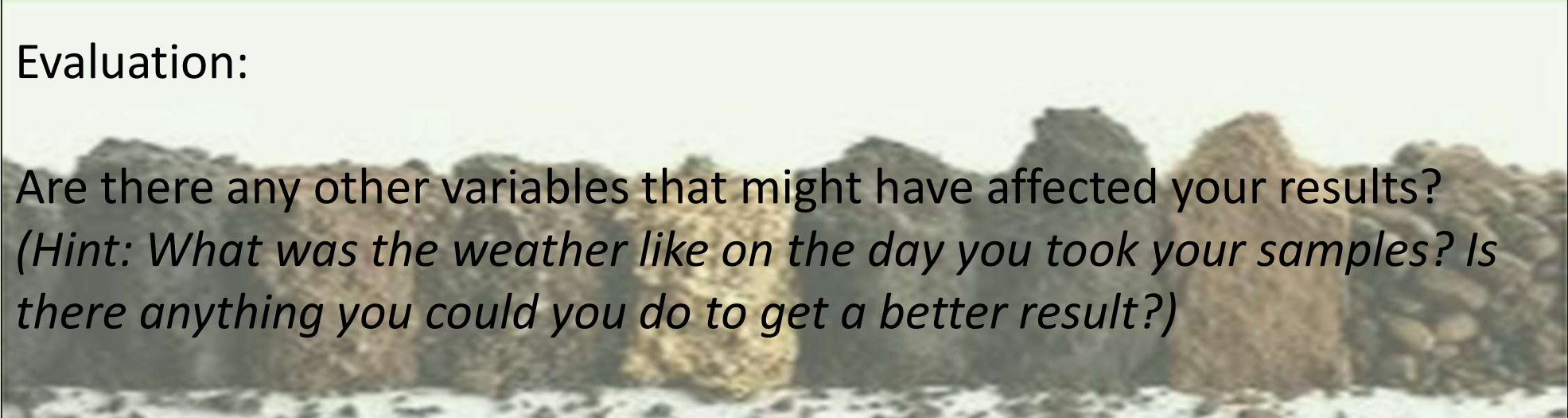
Were there differences in the percentage moisture of your soil samples?

*(Hint: which soil had the highest % moisture / lowest % moisture?)*

Evaluation:

Are there any other variables that might have affected your results?

*(Hint: What was the weather like on the day you took your samples? Is there anything you could you do to get a better result?)*



# Plenary

**POINTLESS!**  
**Kit used to measure abiotic factors**



**POINTLESS!**


Can you identify the  
sampling equipment in  
the picture?  
You need to be correct  
or score 100 points!  
Winner gets the  
lowest scoring answer!

Answers from highest scoring to lowest scoring on next slide.....



# Plenary

## POINTLESS! Kit used to measure abiotic factors



A: Light meter used to measure light intensity **63**

B: Thermometer used to measure temperature **88**

C: Hygrometer used to measure humidity **11**

D: Moisture meter used to measure soil moisture **52**

E: Impeller flowmeter used to measure river speed **0**

F: pH meter used to measure soil pH **38**

# Extra/Cover lesson

Watch:

How Motherwell's pitch survives Scotland's winter weather

- <https://www.youtube.com/watch?v=UST0M8PG66o>

Watch, completing the table at the back of the booklet (Page\_\_\_\_)

The Incredible Science of Football Pitches

- <https://www.youtube.com/watch?v=frGHtxOkVl8>

# Identifying Plants + Animals: Keys

09/01/2025

Page 16

## Starter:


Did you take any pictures of insects you found in your pitfall traps?

If yes, draw them here!

If no, draw a few of the insects below!



Did you take pictures??

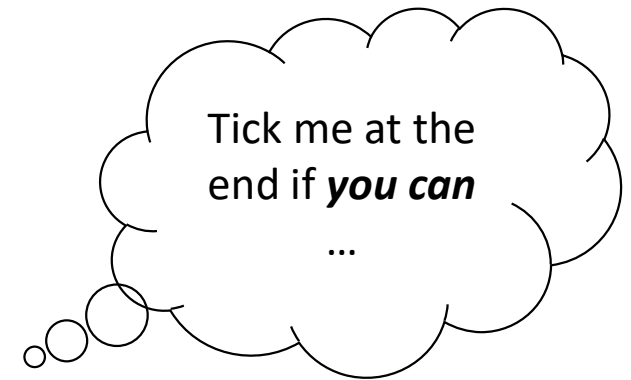


## Learning Intentions:

1. To identify differences between species of **plants**
2. To identify differences between species of **animals**
3. To **use** a biological key

## Success Criteria

- ☐ I can describe features of plants and animals to identify them from each other
- ☐ I can use a biological key to identify living things
- ☐ I can make my own biological key



## Word bank

<i>feature</i>	<i>characteristic</i>	<i>key</i>
<i>differences</i>	<i>similarities</i>	

SCN 3-01a - I can identify living things using biological keys.

**IMPORTANT:** many more examples of biological keys at the end of the powerpoint!!!





A biological key is use to identify living things by the features they have. There are so many different living things on Earth that it is IMPOSSIBLE for anyone to learn them all!

Over **one million** species of insects have been discovered and described but it is estimated that there may be as many as **10 million** species on earth.

What percentage of insect species have still to be discovered??

*Space for working*

%

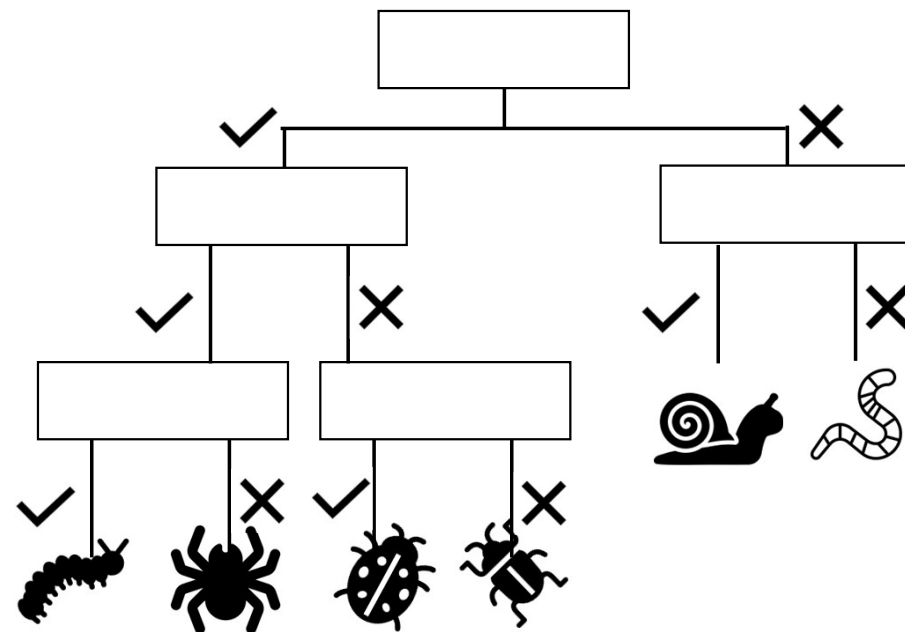


There are two main types of biological key:

## A paired statement key

- |                                   |             |
|-----------------------------------|-------------|
| 1. Insect has legs.....           | Go to 2     |
| Insect has no legs....            | Go to 3     |
| 2. Insect has 8 or more legs..... | Go to 4     |
| Insect has less than 8 legs....   | Go to 6     |
| 3. Insect has a shell.....        | SNAIL       |
| Insect has no shell.....          | WORM        |
| 4. Insect has antennae....        | CATERPILLAR |
| Insect has no antennae...         | SPIDER      |
| 5. Insect has spots...            | LADYBIRD    |
| Insect has no spots....           | BEETLE      |

## A branching key



Use the paired statement key 🖐️ .....

to complete the branching key 🖐️

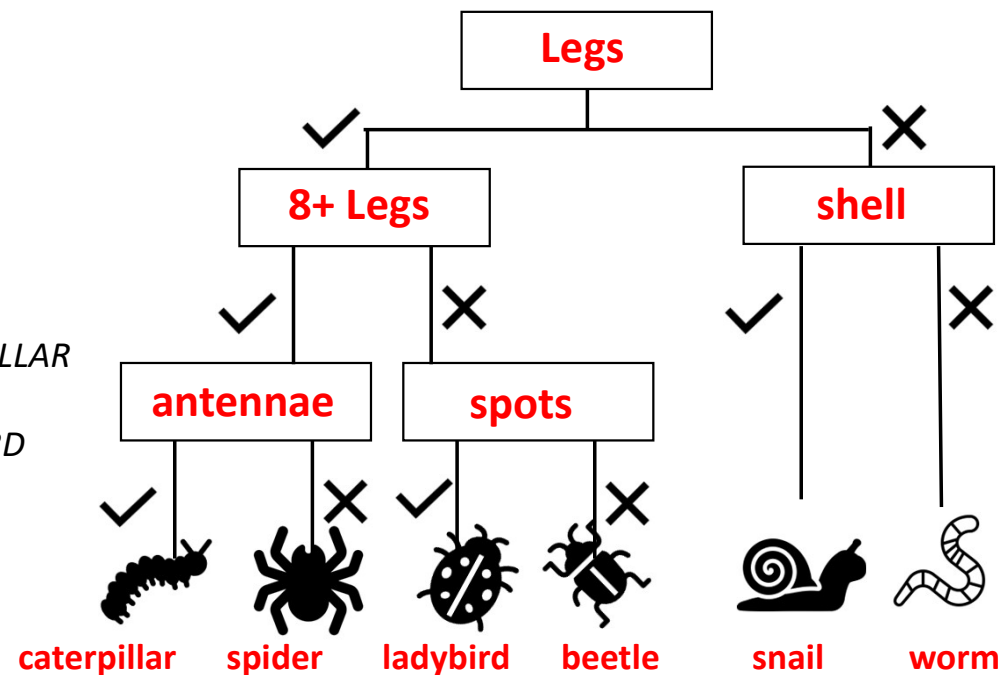


There are two main types of biological key:

## A paired statement key

- |                                  |             |
|----------------------------------|-------------|
| 1. Insect has legs.....          | Go to 2     |
| Insect has no legs....           | Go to 3     |
| 2. Insect has 8 or more legs.... | Go to 4     |
| Insect has less than 8 legs....  | Go to 6     |
| 3. Insect has a shell.....       | SNAIL       |
| Insect has no shell.....         | WORM        |
| 4. Insect has antennae....       | CATERPILLAR |
| Insect has no antennae...        | SPIDER      |
| 5. Insect has spots...           | LADYBIRD    |
| Insect has no spots....          | BEETLE      |

## A branching key



Use the paired statement key ..... to complete the branching key

## More Fun Facts!

1. There are approximately 1.4 billion insects for every person on Earth. The total weight of all the insects is about 70 times more than all the people.
2. It takes bees about 10 million nectar-collecting trips to make one pound of honey
3. The only insect indigenous to Antarctica is the wingless midge, *Belgica Antarctica*
4. Scientists estimate that insects make up to 90% of all species of animals on the planet and more than half of all living things.
5. Insects can be found in almost every habitat, from mountain ranges covered in snow to the hottest deserts on the planet.
6. Insects have been around for more than 350 million years, longer than the dinosaurs and flowering plants.
7. The largest known order of insects is Coleoptera (beetles), some 300,000 to 400,000 species of beetle have been described to date. The next largest is the Lepidoptera (butterflies and moths), followed by the Diptera (true flies) and then the Hymenoptera (ants, bees and wasps).

<https://www.royensoc.co.uk/understanding-insects/classification-of-insects/>

<https://www.woodlandtrust.org.uk/blog/2023/10/common-uk-insect-identification/>



## Additional Activity / Cover Lesson

### Poster:

Use the web links to research insects.

### Success Criteria:

- Title
- Poster describes what features insects have
- Identified one insect and drawn a picture
- Included "fun facts"
- ★ Why are insects so important?

# Identifying Plants + Animals: Keys

09/01/2025

Page 17


## Starter:

Pick **one** of the animals:

**Remember** your choice  
but don't tell anyone!!

Write down some  
features of your animal  
(*hint: number of legs, shape of  
ears, length of tail, fur colour, etc.*)

Your teacher may play  
“guess the animal” if you  
have time later!



goat



giraffe




moose



wolf



kangaroo




bear




lion



camel



elephant



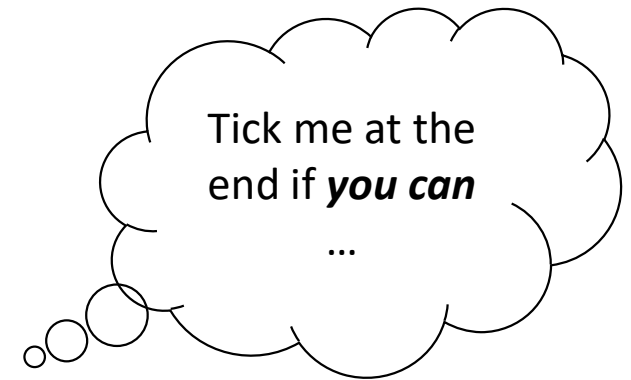


## Learning Intentions:

1. To identify differences between species of **plants**
2. To **construct** a biological key

## Success Criteria

- ☐ I can describe features of plants to identify them from each other
- ☐ I can make my own biological key



### Word bank

<i>variegated</i>	<i>serrated</i>	<i>lobular</i>	<i>pinnate</i>
<i>venation</i>	<i>needle</i>	<i>spiny</i>	

# Identifying Plants + Animals: Keys

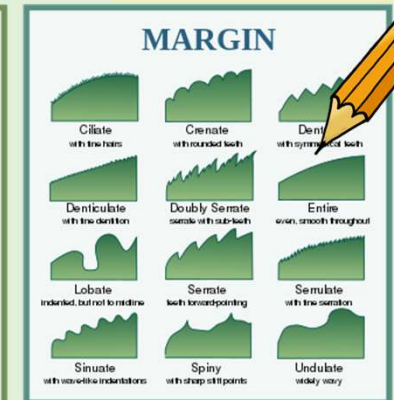

09/01/2025

Page 17

Identifying animals seems straightforward..... but what about plants?

The features that plants have include leaf colour, leaf shape, leaf arrangement, leaf surface, leaf edges, vein patterns, etc.

Using the slides, complete the table in your booklet






Variegated leaves

Leaves have more than one colour




serrated leaves

Leaves have **edges like teeth!**



*There are birch trees in the quad  
with serrated leaves:*





lobular leaves

Lobular leaves have rounded edges

*There are oak trees on the school grounds  
that have lobed leaves*



pinnate leaves


Have a **midline and paired leaves** like a feather

*Rowan trees have pinnate leaves (also serrated!)*



## Venation

Some leaves have **visible veins**



*Sycamore leaves have “palmate” veins.  
They are also lobular and can be serrated!!!*



## Needle leaves

Trees with leaves that **resemble needles** and tend to **stay on all year**

*Scots Pine can be found on school grounds*



Spiny leaves

Spiny leaves have **sharp points on their edges.**

*There are holly trees in the woodland at the rear of the school*






## Activity Choice:

### Outdoors

Collect 6-8 different leaves

### Indoors

Use leaf stencils to draw 6-8 different leaves




# Plenary

One person is picked to be the **mystery animal** *(you picked this during starter activity)*

Use a random generator to select players. Each turn the player gets to ask **one question**. Only **yes/no** answers can be given.


Each player gets a turn until the mystery is solved. The winner gets to be the “animal” for the next round!



## Starter:

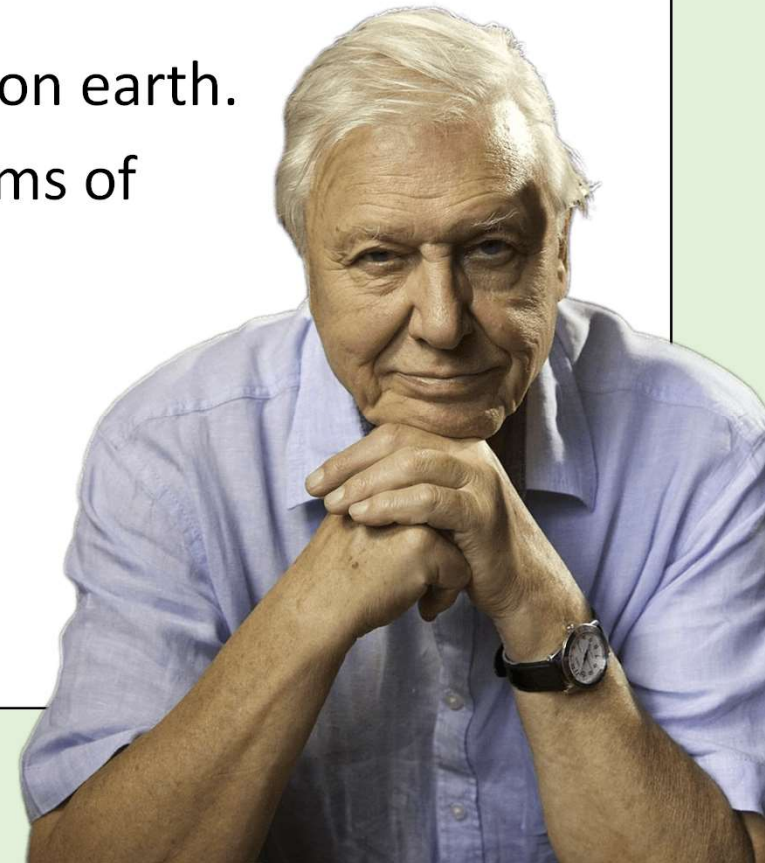
Page 18

Pick your favourite leaf.  
Write down two characteristics that you like about it! Use the words from Pg 17



## Learning Intentions:

1. To identify why plants are vital to sustaining life on earth.
2. To describe the process of photosynthesis in terms of raw materials and products



## Success Criteria

- ☐ I can state why plants are vital to life on earth
- ☐ I can describe photosynthesis in terms of raw materials and products

Tick me at the end if ***you can***

...

## Word bank

*photosynthesis*  
*water*

*reactants/raw materials*  
*carbon dioxide*

*oxygen*  
*sugars*

*plants*  
*starch*

SCN 3-02a - I have collaborated on investigations into the process of photosynthesis and I can demonstrate my understanding of why plants are vital to sustaining life on Earth.



Quoting the legendary David Attenborough!!!

Watch the video carefully. You will have to fill in Attenborough's missing words in your notes!!!



<https://www.bbc.co.uk/iplayer/episode/m0013cl5/the-green-planet-series-1-1-tropical-worlds>

## Quoting the legendary David Attenborough




The biggest living thing that exists on this planet is a **plant**, like this giant sequoia tree in **California**.

Plants, whether they are **enormous**, like this one, or **microscopic**, are the basis of all life, including ourselves.

We **depend** upon them for every mouthful of **food** that we eat and every lungful of **air** that we breathe.

*From first 40 seconds*



2

Throughout this forest, plants are competing ferociously with one another to claim the **light**. The battle is at its fiercest on the forest floor where only **2%** of the sunlight filters through.

*From 5:10*

3

That fuel is created in a plant's **leaves**, as they soak up the sun. It's a process called photosynthesis.....

A **chemical reaction** that is the basis of all life on Earth.

Leaves are covered by thousands of microscopic pores called stomata. When open, they extract **carbon dioxide** from the air, and, using **energy** from the sun, combine it with nutrients to build the plant's tissues. And critically for us, the process releases the **oxygen** that we and all animals need in order to breathe.

*From 11:50*

**Read over the speech bubbles. Your next task will involve two skills:**

- 1. Memorising facts**
- 2. Understanding information (sometimes called “interpreting”)**




*Memorising facts:*

Question 1: What is the biggest living thing that exist on our planet?

Question 2: Why are plants important?

Question 3: What is the chemical process that allows plants to make food?


Question 4: What percentage (%) of light filters through the forest?





*Understanding information:*

Question 5: The process that plants use to make food is an example of a chemical reaction. Chemists call the materials that are needed for a chemical reaction “reactants”. Biologists sometimes call reactants “raw materials”. What might you call the reactants/raw materials in Home Economics?



*Understanding information:*

Question 6: What are the raw materials plants use in photosynthesis?


Question 7: Where does the energy come from for photosynthesis?

Question 8: Is energy a raw material? Why?

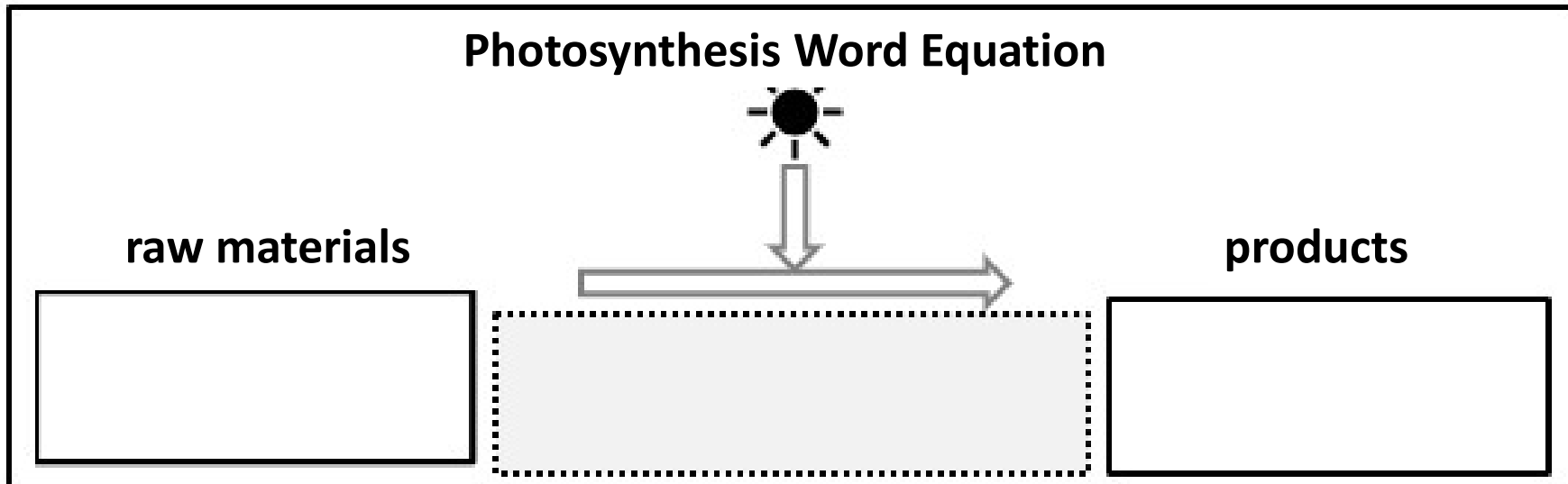
Question 9: What we are left with after a reaction takes place is called a “product”. What are the two products of photosynthesis?



Question 10: Complete the word equation below to show what you have learned about photosynthesis (the shaded box is for anything extra you want to say about photosynthesis that will impress your teacher!!):

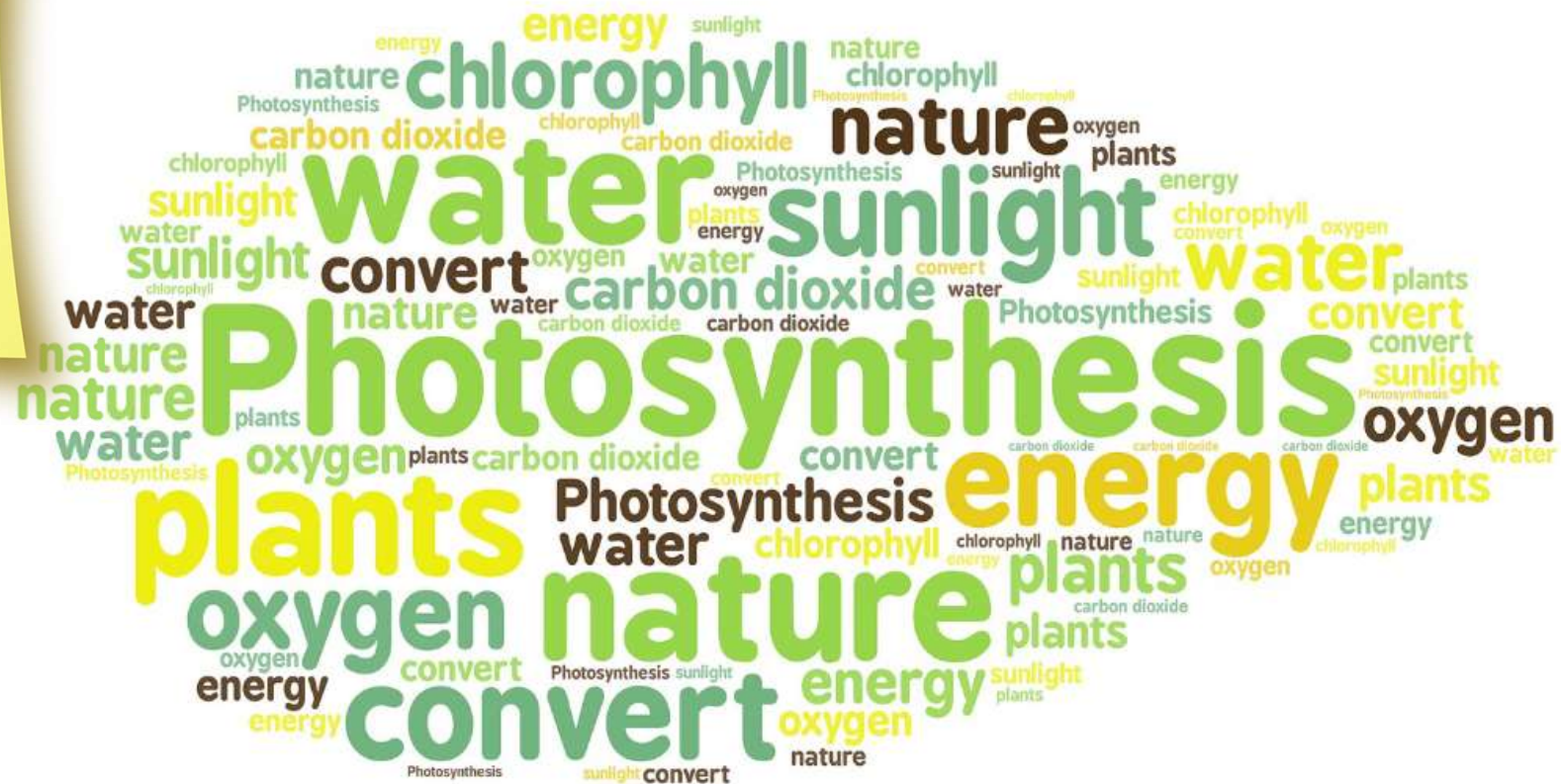


## Photosynthesis Word Equation



## Post-it Plenary:

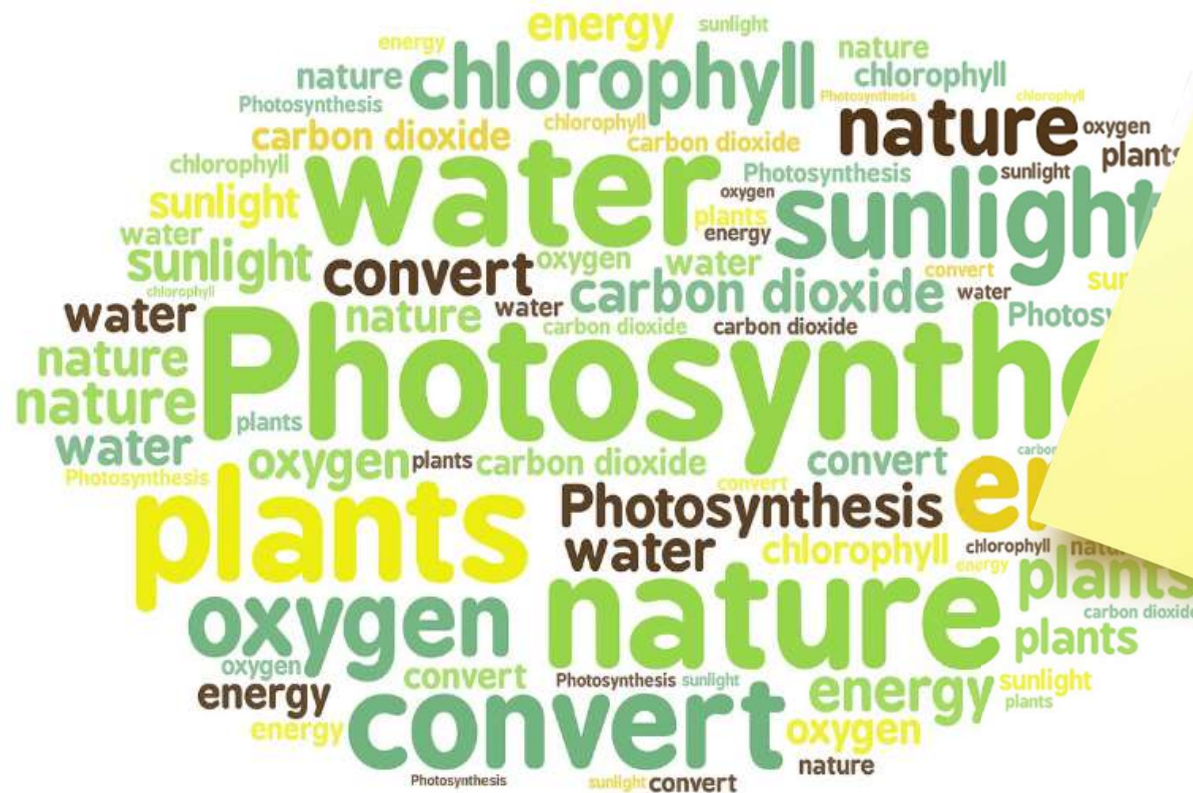
Use the word cloud to write three facts about photosynthesis:



**Starter:**

**Page 20**


**What three facts did you write down from the last lesson?**



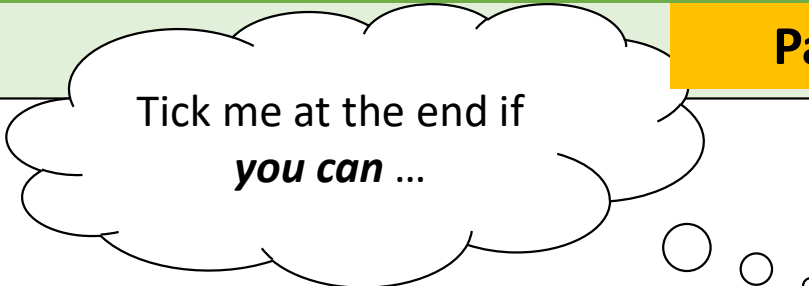


## Learning Intentions:

1. To describe the process of photosynthesis in terms of raw materials and products
2. To test leaves for starch



## Success Criteria



Tick me at the end if  
*you can ...*

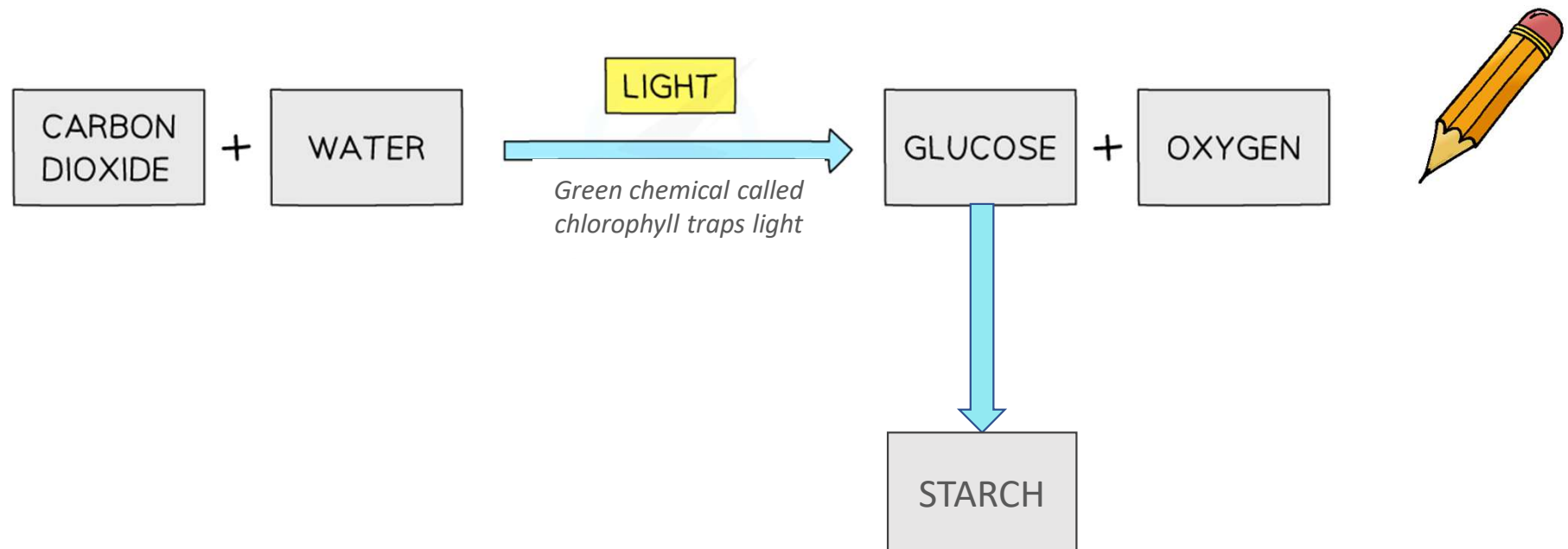
- ☐ I can describe photosynthesis in terms of raw materials and products
- ☐ I have tested leaves for starch

## Word bank

*photosynthesis*    *water*    *carbon dioxide*    *iodine*    *starch*    *glucose*

SCN 3-02a - I have collaborated on investigations into the process of photosynthesis and I can demonstrate my understanding of why plants are vital to sustaining life on Earth.

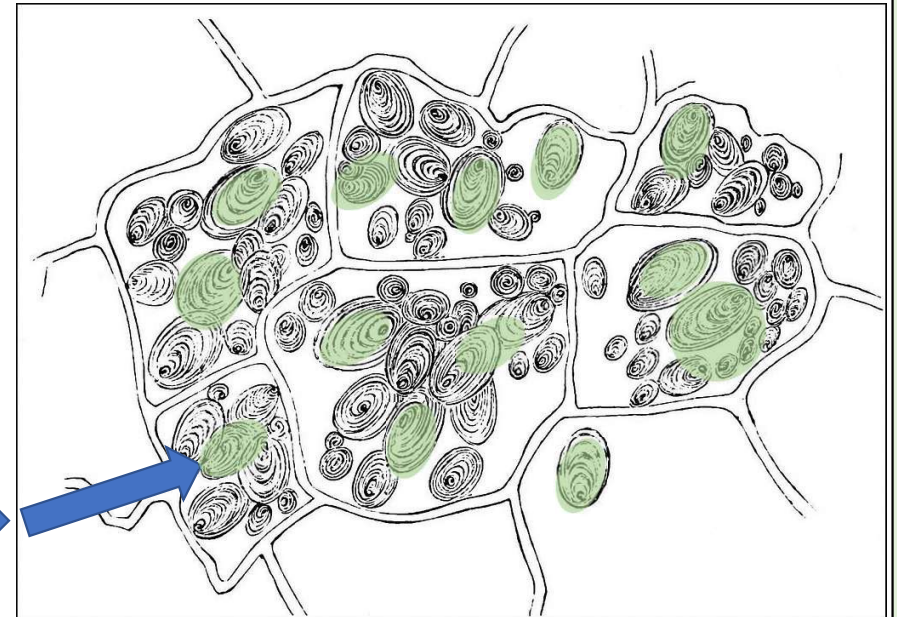
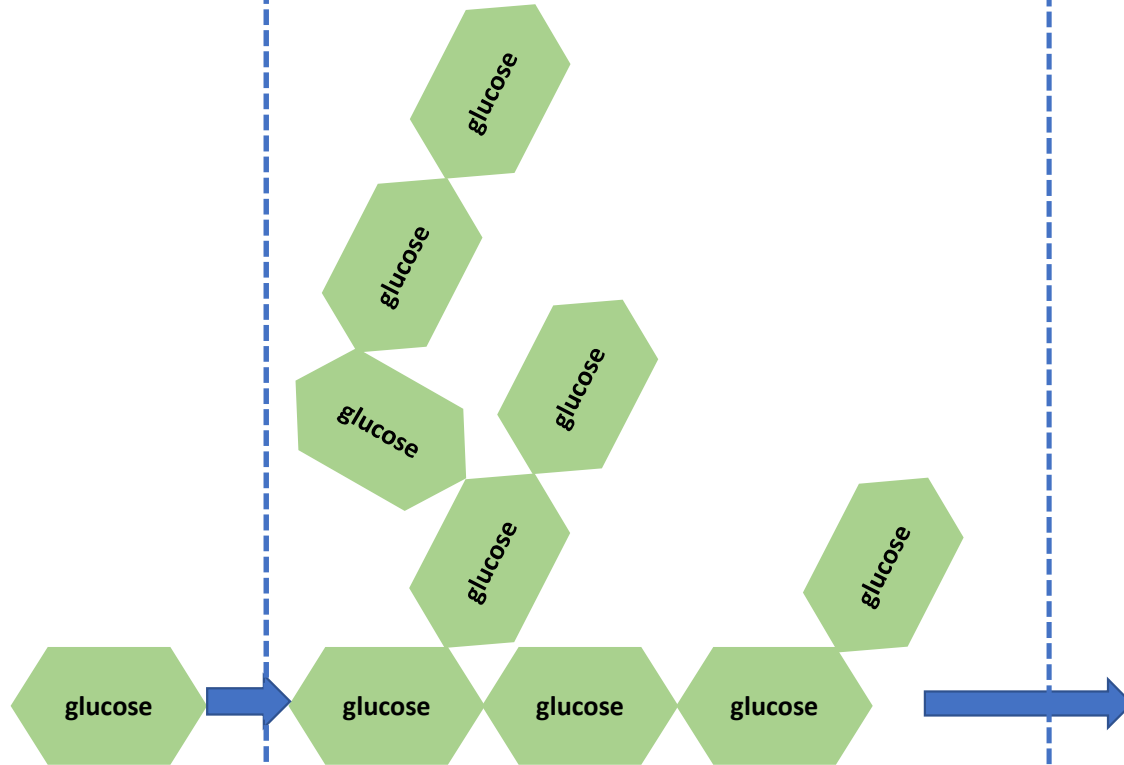
When a plant photosynthesises, it produces a sugar called **glucose**. It can't use all of the glucose at once, so it joins the sugar molecules together to make a storage carbohydrate called **starch**.



Glucose  
Molecule

Starch  
Molecule

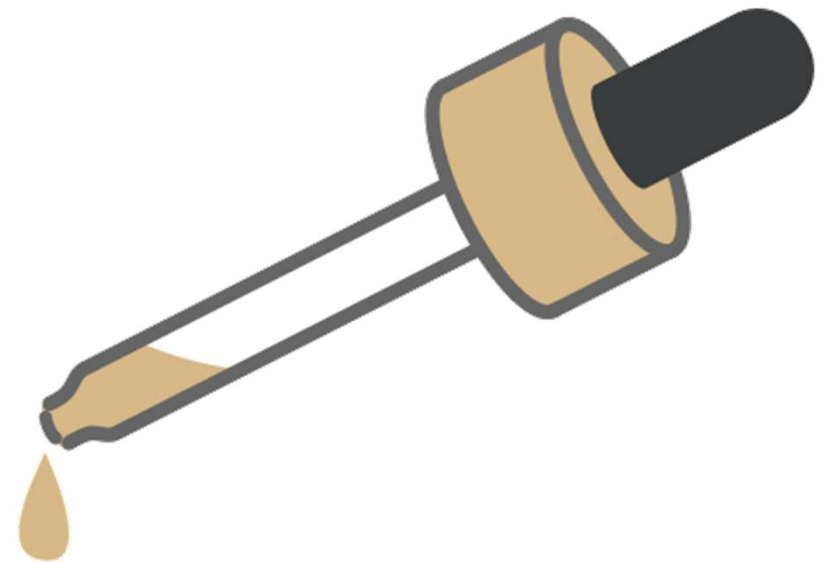
Starch  
Grains  
(inside leaf cells)



We can prove that photosynthesis is taking part in green leaves by testing them for starch.

Can you remember, in S1, what chemical we used to test for starch?

How does it show a positive result?



We use **iodine**. Iodine goes **blue-black** when in the presence of starch.



**Aim:** To test different parts of a leaf for starch.

**Equipment needed:**

- Eye protection
- A variegated geranium leaf
- Beaker of boiling water (250cm<sup>3</sup>)
- Ethanol
- Forceps (tweezers)
- Boiling tube
- Glass rod
- White tile



## Method

1. Collect your leaf and place it into your beaker of boiling water. Leave it in the boiling water for about 1 minute and remove using your forceps.
2. Drop your leaf into a boiling tube and push to the bottom using a glass rod.
3. Add enough ethanol to the boiling tube to cover the leaf.
4. Place the boiling tube in the beaker of hot water.
5. The ethanol will boil and the green chlorophyll will be removed from the leaf. Leave for 5 minutes.
6. Remove the leaf from the boiling tube using forceps and rinse in cold water.
7. Place the leaf on to a white tile.
8. Add a few drops of iodine to cover the leaf.
9. Leave for a few minutes and record results in your results table.

## Results:

Part of Plant	Starch present? ( ✓ / ✗ )
Green	
White	

## **Conclusion:**

*What part of the plant contained starch? Why?*

## **Evaluation:**

*How could we improve the results of this experiment?*

**Starter:**

**Page 21**

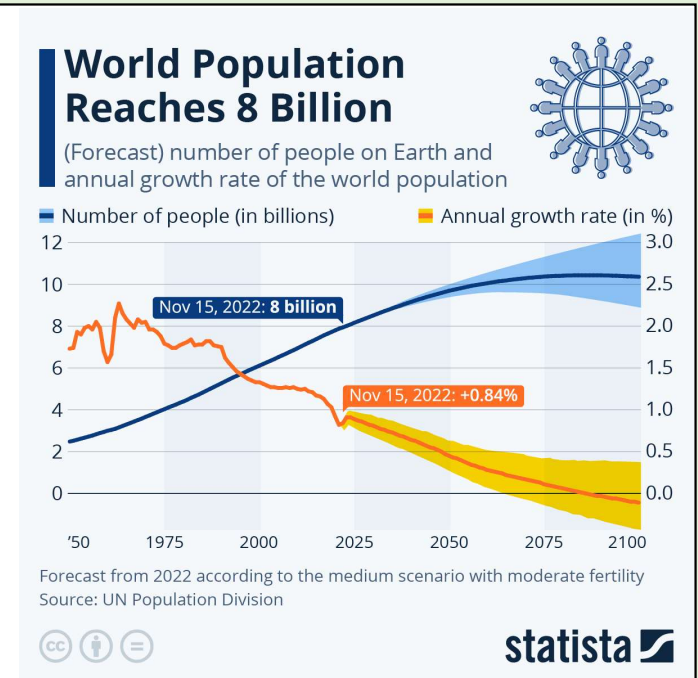
**What do farmers put on fields?**

**Why?**



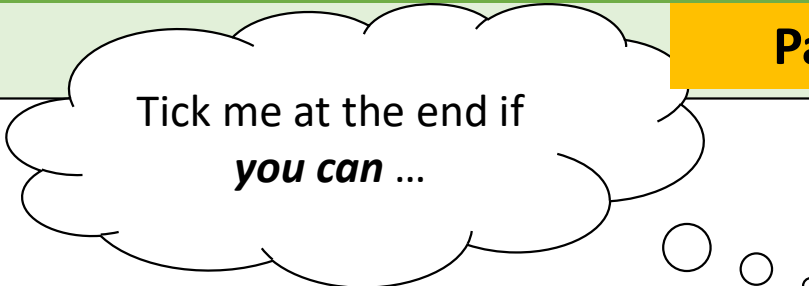
## Learning Intentions:

1. To investigate chemical fertilisers
2. To evaluate the impact on food production





## Success Criteria



Tick me at the end if  
*you can ...*

- ☐ I can state the effect of fertilisers on crop growth
- ☐ I can suggest how global food production may be improved

## Word bank

*photosynthesis*    *manure*    *fertiliser*    *nitrogen*    *phosphorus*    *potassium*

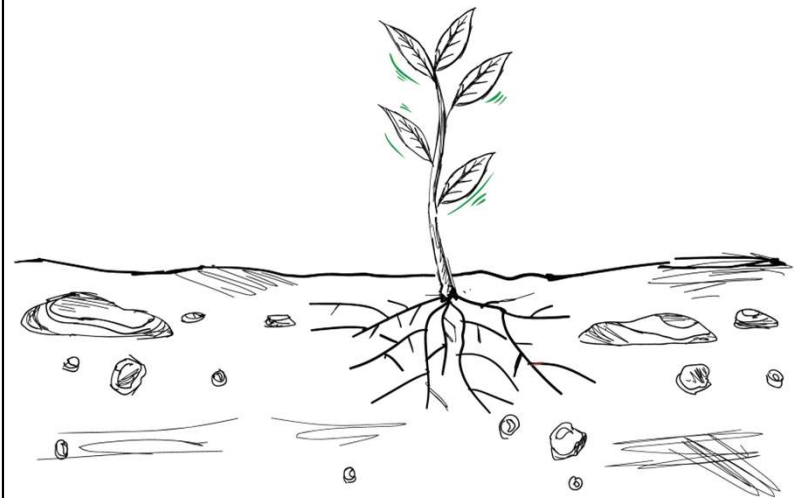
**SCN 3-03a** - Through investigations and based on experimental evidence, I can explain the use of different types of chemicals in agriculture and their alternatives and can evaluate their potential impact on the world's food production

## Fertilisers provide the minerals needed for healthy growth in plants.

As plants grow, they absorb minerals from the soil through their roots.

When crops are harvested, nitrogen is removed from the soil (in the protein of the plant products). Adding fertilisers to the soil can replace soil nitrogen. This makes the soil fertile again, allows more plant growth to occur and increases the yield of the next crop.

Fertilisers can be manmade chemicals or natural organic waste materials (manure and compost).



# Plants 3: Fertilisers



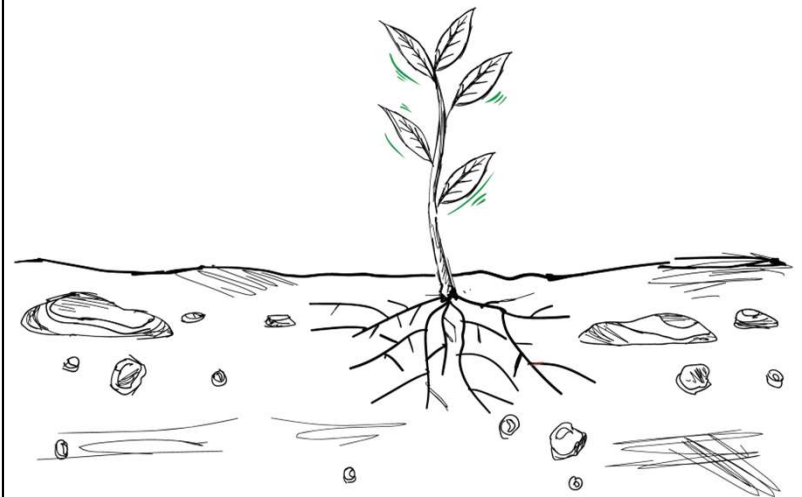
09/01/2025

Page 21

## Literacy task:

Use the passage in your notes to write a creative story about how plants use fertilisers to grow.

Use the diagram to help





## Literacy task:

Use the passage in your notes to write a creative story about how plants use fertilisers to grow.

Use the diagram to help



## Learning Intentions:

1. x



## Success Criteria



Tick me at the  
end if ***you can***

...

## Word bank

***x***




# Photosynthesis

09/01/2025

Page \*

**Starter:**

x



## Learning Intentions:

1. x

## Success Criteria



Tick me at the  
end if ***you can***

...

## Word bank

***x***

**Plenary:**

X





# Plants: Life on Earth

09/01/2025

Page \*

## Starter:

WALL-E trailer


<https://www.youtube.com/watch?v=CZ1CATNbXg0>

WALL-E Finds the last plant in the world

<https://www.youtube.com/watch?v=veySINgGMO0>

What do the creators of WALL-E think that life on earth will be like with no plants?

What is the significance of WALL-E finding a plant on Earth?




# Plants: Life on Earth

09/01/2025

Page \*

**Starter:**

x



## Learning Intentions:

1. x

## Success Criteria



Tick me at the  
end if ***you can***

...

## Word bank

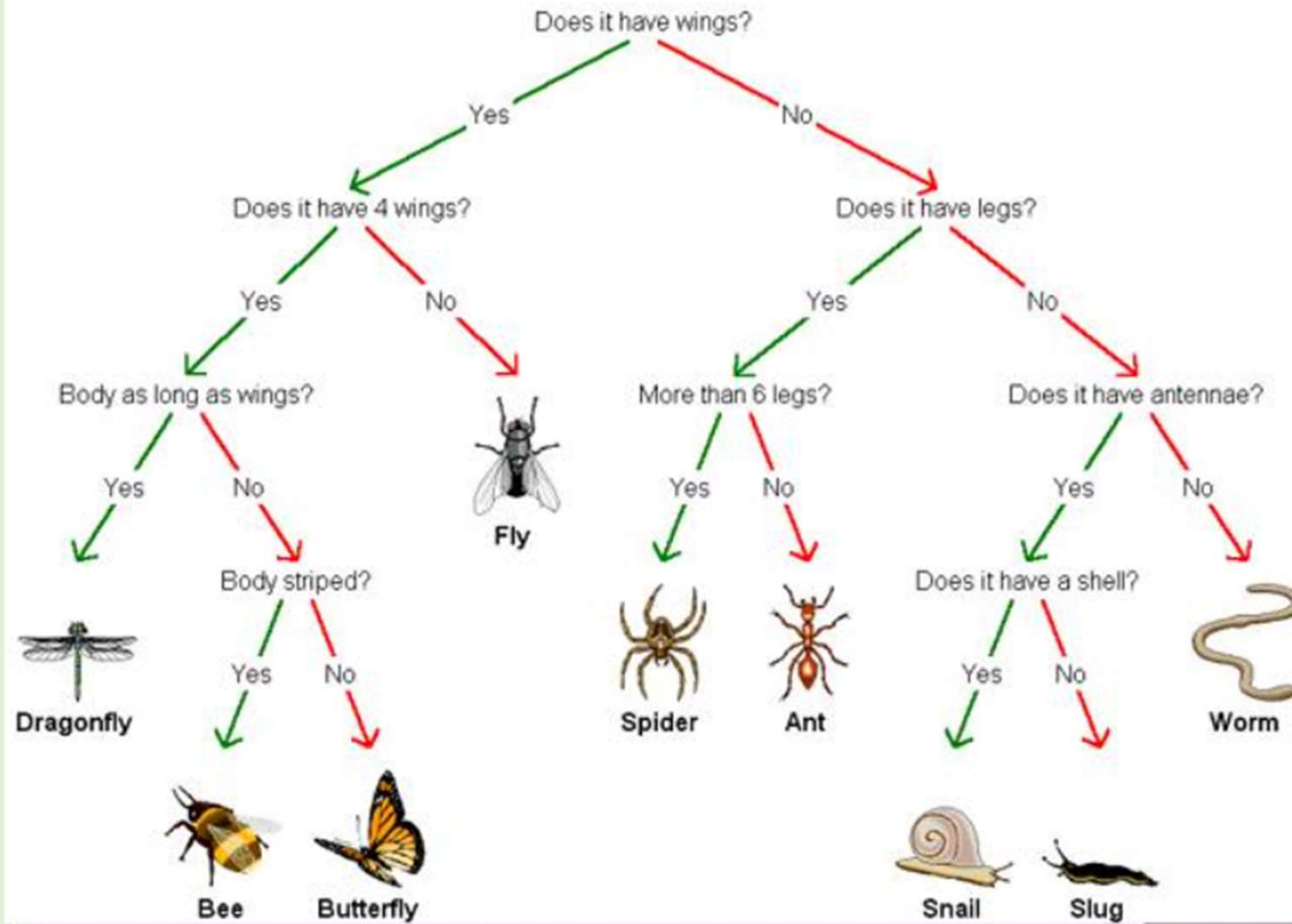
***x***

**Plenary:**

X

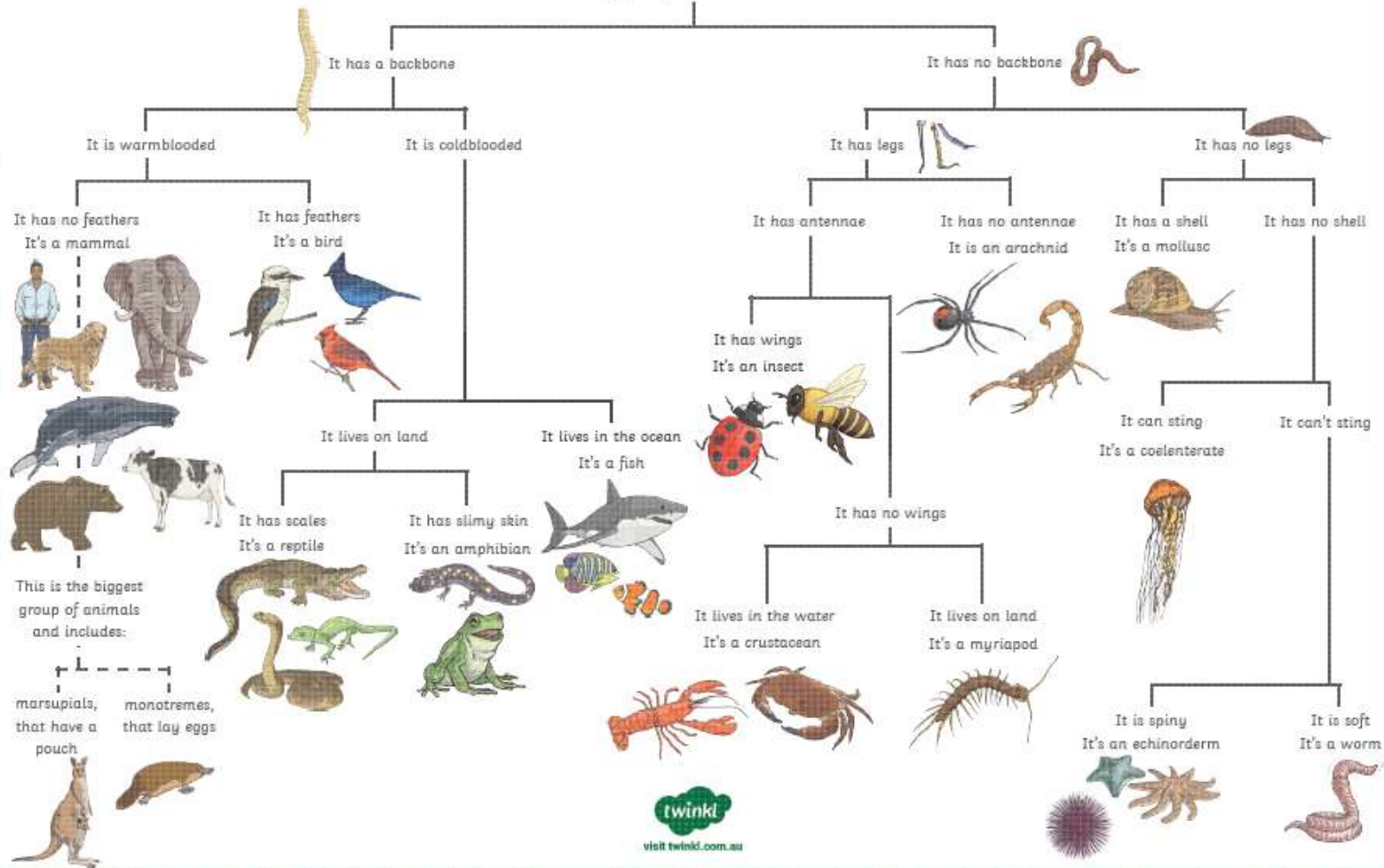


## Minibeasts



# Dichotomous Key for Animals

What type of animal is that?



## Ladybird detective



Credits: 7-spot ladybird (1) Ian Hawkins / 2-spot ladybird, 14-spot and harlequin ladybird (black) (1) Amy Lewis / Harlequin ladybird (orange), 22-spot ladybird, cream-spot ladybird, orange ladybird and pine ladybird (1) Rachel Scopes / 14-bru-spot ladybird (1) Lee Breen / 7-spot ladybird (1) Richard Barker

# Level 2 Learning Outcomes & Benchmarks

**SCN 2-01a - I can identify and classify examples of living things, past and present, to help me appreciate their diversity. I can relate physical and behavioural characteristics to their survival or extinction.**

- Classifies living things into plants (flowering and non-flowering), animals (vertebrates and invertebrates) and other groups through knowledge of their characteristics.
- Begins to construct and use simple branched keys which can be used to identify particular plants or animals. □
- Identifies characteristics of living things and their environment which have contributed to the survival or extinction of a species.
- Describes how some plants and animals have adapted to their environment, for example, for drought or by using flight.

**SCN 2-02a - I can use my knowledge of the interactions and energy flow between plants and animals in ecosystems, food chains and webs.**

- Describe how energy flows between plants and animals in more complex food chains and webs and ecosystems, using vocabulary such as 'producers', 'consumers' and 'herbivore'.

**SCN 2-02b - Through carrying out practical activities and investigations, I can show how plants have benefited society.**

- Relates findings from practical investigations to describe how plants have benefited society, for example, in medicine, dyes, fuels, construction, prevention of soil erosion and by influencing the balance of gases in the air.

**SCN 2-03a - I have collaborated in the design of an investigation into the effects of fertilisers on the growth of plants. I can express an informed view of the risks and benefits of their use.**

- Collaborates with others to present a reasoned argument, based on evidence, of the risks and benefits of using fertilisers, demonstrating understanding of the underlying scientific concepts.

# Level 4 Learning Outcomes & Benchmarks

**SCN 4-01a - I understand how animal and plant species depend on each other and how living things are adapted for survival. I can predict the impact of population growth and natural hazards on biodiversity**

- Describes how plants and animals depend on each other for food, shelter and pollination, using scientific vocabulary such as 'population', 'community' and 'species'.
- Explains the possible effects of removal or addition of species on food webs and biodiversity.
- Summarises research findings to provide examples of structural, physiological and behavioural adaptations which lead to species survival.

**SCN 4-02a - I have propagated and grown plants using a variety of different methods. I can compare these methods and develop my understanding of their commercial use.**

- Compares natural and artificial techniques to propagate plants, for example, seeds, bulbs and cuttings, and suggests commercial uses such as food production and food security.

**SCN 4-03a - Through investigating the nitrogen cycle and evaluating results from practical experiments, I can suggest a design for a fertiliser, taking account of its environmental impact.**

- Describes the nitrogen cycle and explains the importance of each stage.
- Explores and explains the possible impact of the use of fertilisers, for example, algal blooms.

## TOPICAL SCIENCE:

**SCN 4-20a I have researched new developments in science and can explain how their current or future applications might impact on modern life.**

- Researches and communicates developments in science, explaining how current and future applications might impact on life.
- Demonstrates increasing understanding of how the transferrable skills developed through the sciences are used in a wide variety of jobs including science, technology, engineering and mathematics (STEM) careers.

**SCN 4-20b Having selected scientific themes of topical interest, I can critically analyse the issues, and use relevant information to develop an informed argument.**

- Selects and analyses scientific content of topical interest from a range of sources, including the media.
- Identifies examples of bias in sources and justifies decisions in separating fact from opinion.
- Critically analyses a scientific issue and gives consideration to the ethical, moral, environmental, social or political implications of the scientific theme selected to develop an informed argument.