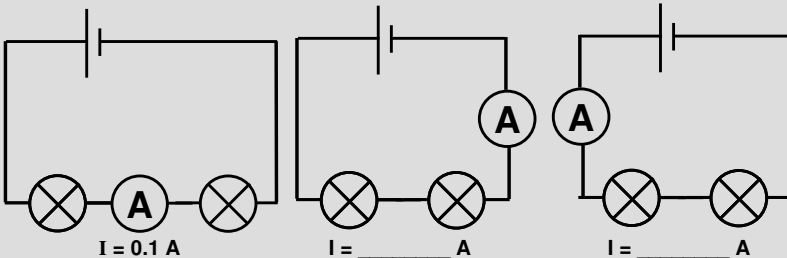


Name _____ Date Due _____

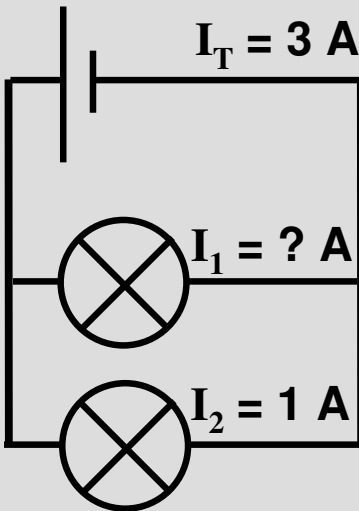
Homework – Electricity 2

1. Draw a circuit diagram with a cell, bulb and switch in parallel.

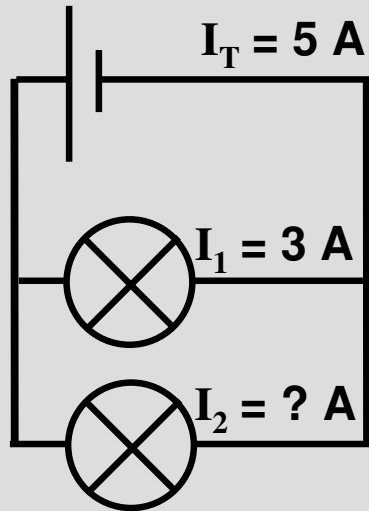
3. Complete these circuits showing the currents



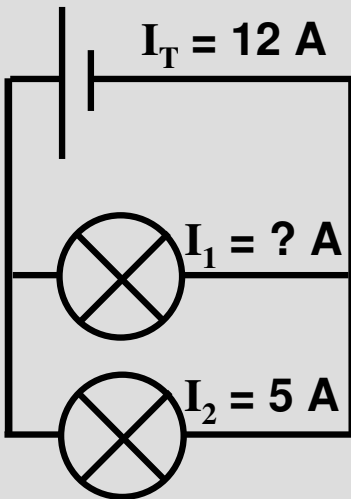
3. Complete these circuits showing the currents



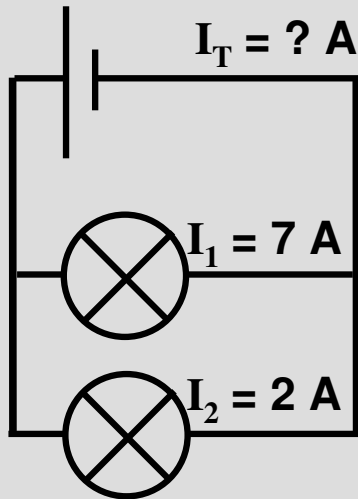
$I_1 = \underline{\hspace{2cm}} \text{ A}$



$I_2 = \underline{\hspace{2cm}} \text{ A}$



$I_1 = \underline{\hspace{2cm}} \text{ A}$



$I_T = \underline{\hspace{2cm}} \text{ A}$