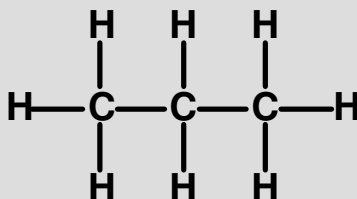
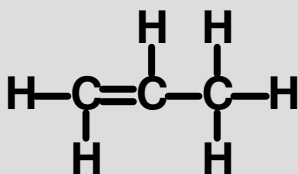


## Homework – Nature's Chemistry Revision

1. What are the three gases that make up most air pollution?

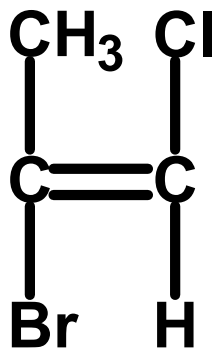
2. Write the names of these two molecules (A and B) in the boxes underneath them.



**A =**

**B =**

How do we know that A is an alkene and B is an alkane?



3. Draw a section the polymer (with at least three repeating units) made from the monomer shown above.

4. What is a fuel?