

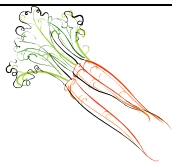
Name: \_\_\_\_\_

Date: \_\_\_\_\_

### Money

#### Working out Change from 10p


You have 10p in your purse and you buy one item each time.  
Using the coins in your pot work out the change you would receive.




8p




4p



7p



2p



5p



6p



9p



3p

Name: \_\_\_\_\_

Date: \_\_\_\_\_

### Money

#### Working out Change from 20p


You have 20p in your purse and you buy one item each time.  
Using the coins in your pot work out the change you would receive.




12p




9p



15p



13p



6p



8pp



11p



4p

Name: \_\_\_\_\_

Date: \_\_\_\_\_

### **Money**

#### **Working out Change from 50p**


You have 50p in your purse and you buy one item each time.  
Using the coins in your pot work out the change you would receive.



24p




15p



18p



36p



41p



23p



37p



39p