

TIME RIDDLES 1A



Use the clues to find the correct clock from the 4 possibilities.

CHALLENGE 1

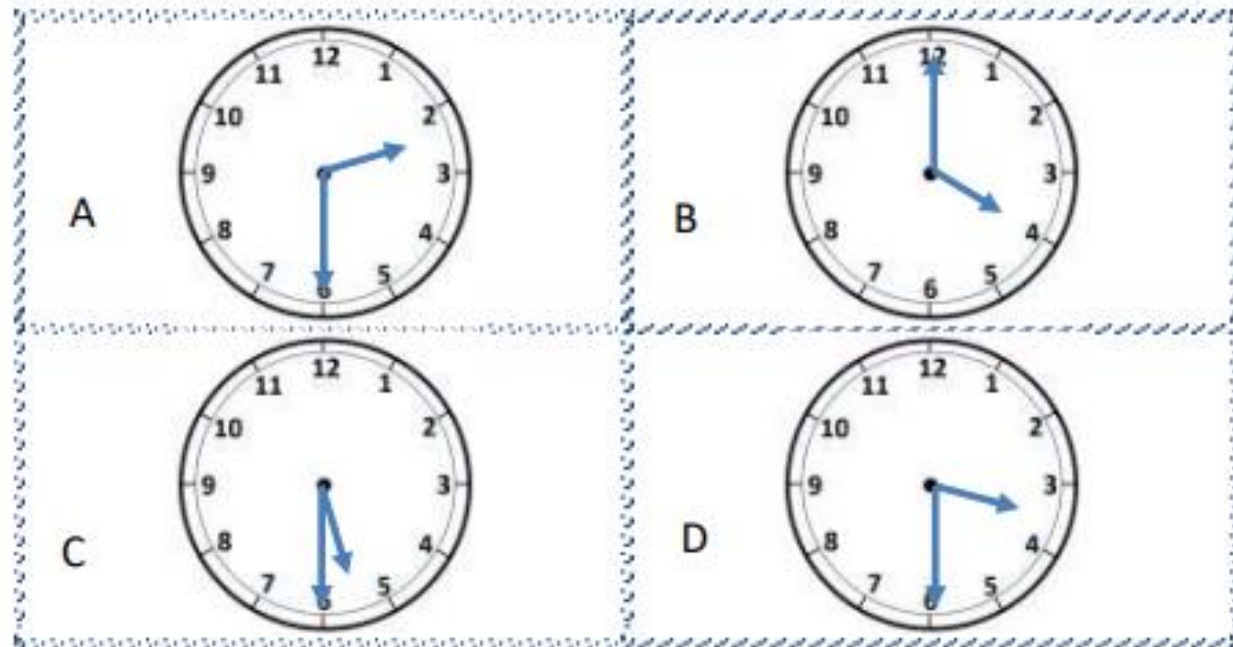
- I am between 3 o'clock and 6 o'clock.
- I am not an o'clock time.
- I am later than 4 o'clock.

What time am I? _____

CHALLENGE 2

- My big hand does not point to 12.
- I am earlier than 5 o'clock.
- My hour hand is between 2 and 3.

What time am I? _____



TIME RIDDLES 1B



Use the clues to find the correct clock from the 6 possibilities.

CHALLENGE 1

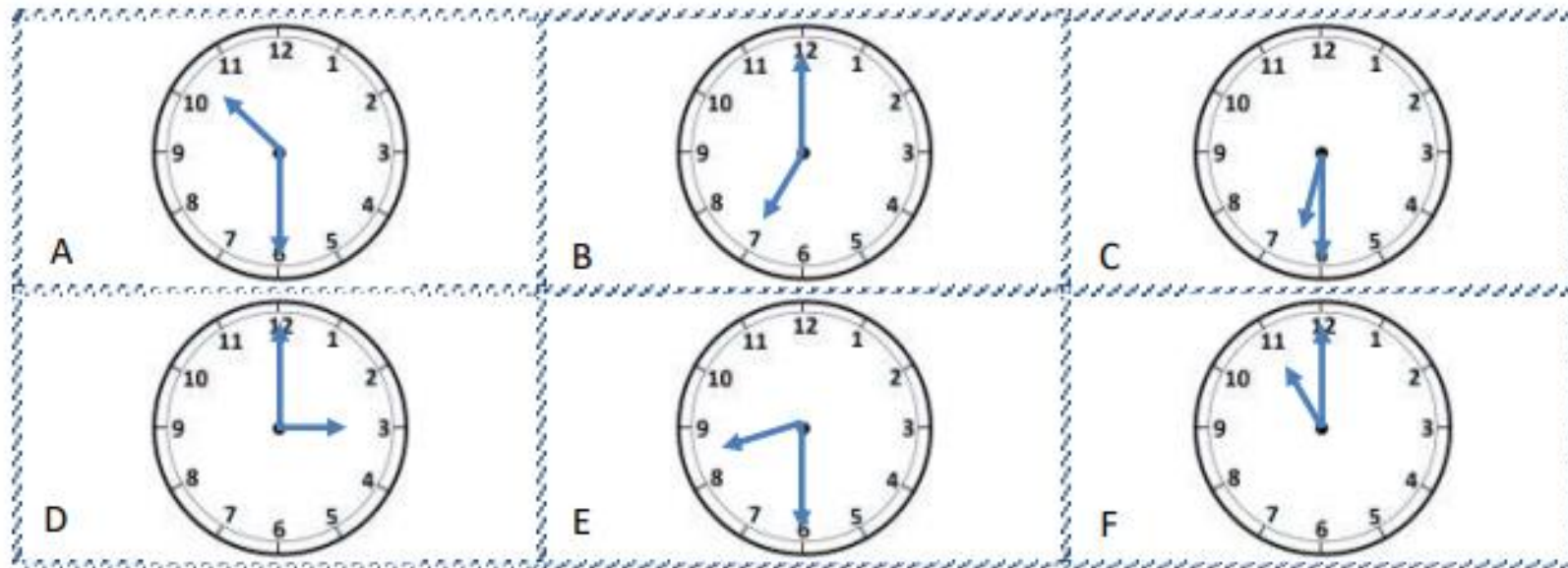
- I am between 6 o'clock and 10 o'clock.
- I am not a half-past time.
- My hour is an odd number.

What time am I? _____

CHALLENGE 2

- I am earlier than 10 o'clock.
- I am later than 7 o'clock.
- My big hand points to 6.
- My hour is an even number.

What time am I? _____



TIME RIDDLES 2A



Use the clues to find the correct clock from the 6 possibilities.

CHALLENGE 1

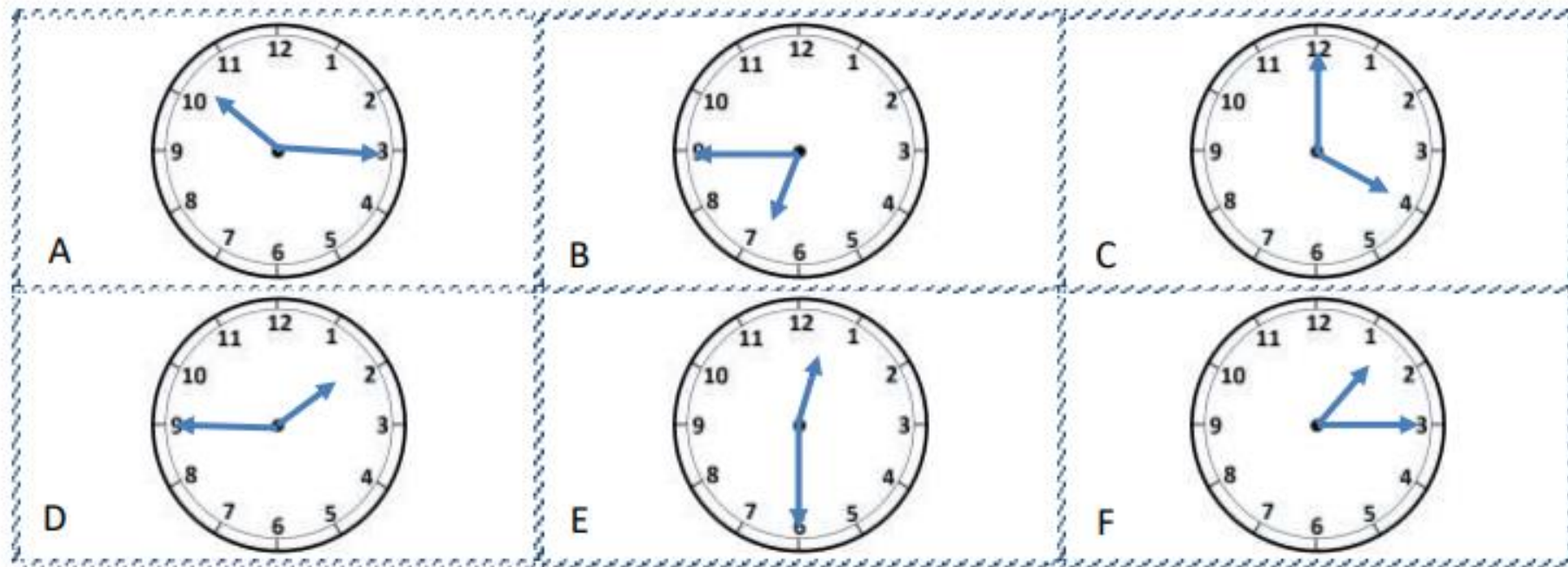
- I am between 1 o'clock and 4 o'clock.
- I am not a half-past time.
- I am closer to 2 o'clock than 1 o'clock.

What time am I? _____

CHALLENGE 2

- I am not an o'clock time.
- My time is between 12 o'clock and 2 o'clock.
- I am not a quarter-past time.
- My time is half-way between 12 o'clock and one o'clock.

What time am I? _____



TIME RIDDLES 2B

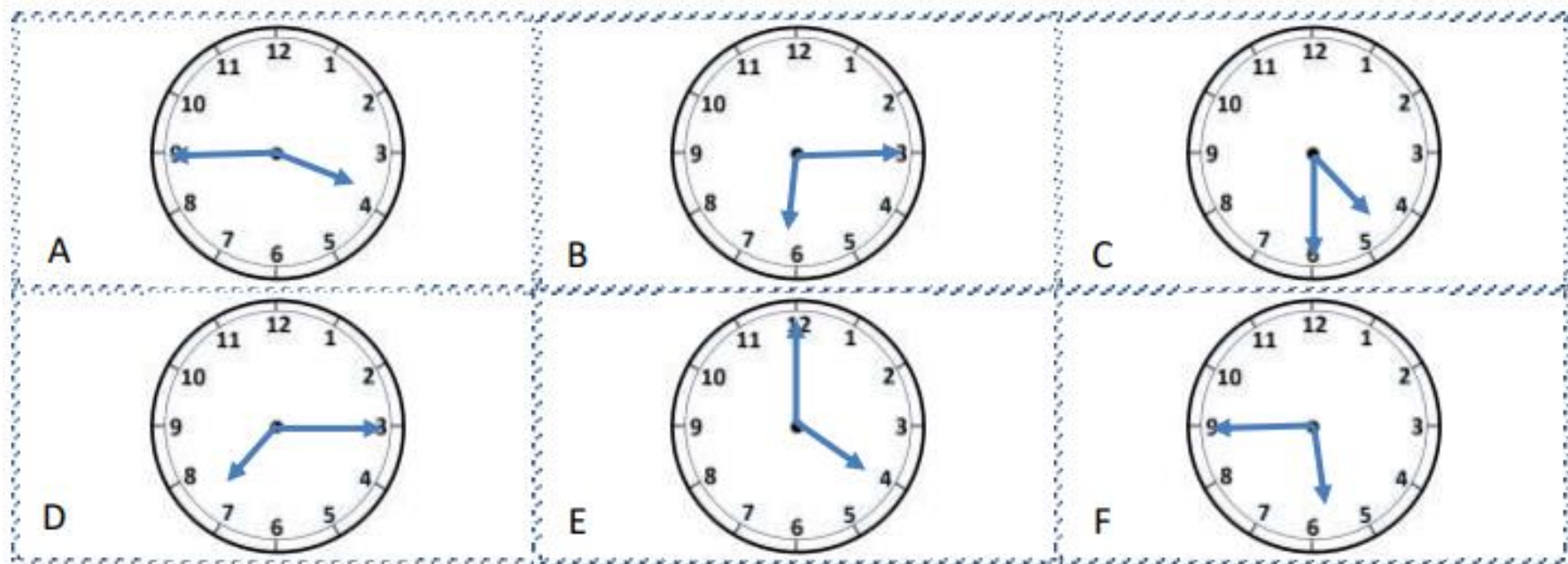


Use the clues to find the correct clock from the 6 possibilities.

CHALLENGE 1

- I am between 4 o'clock and 6 o'clock.
- I am not a quarter-past time
- My hour is an even number.
- My minute hand is not at number 12.

What time am I? _____



CHALLENGE 2

- I am later than 5 o'clock but earlier than 8 o'clock.
- My number of minutes past is not 30.
- I am more than 15 minutes past the hour.
- In a quarter of an hour I will be the next o'clock.

What time am I? _____