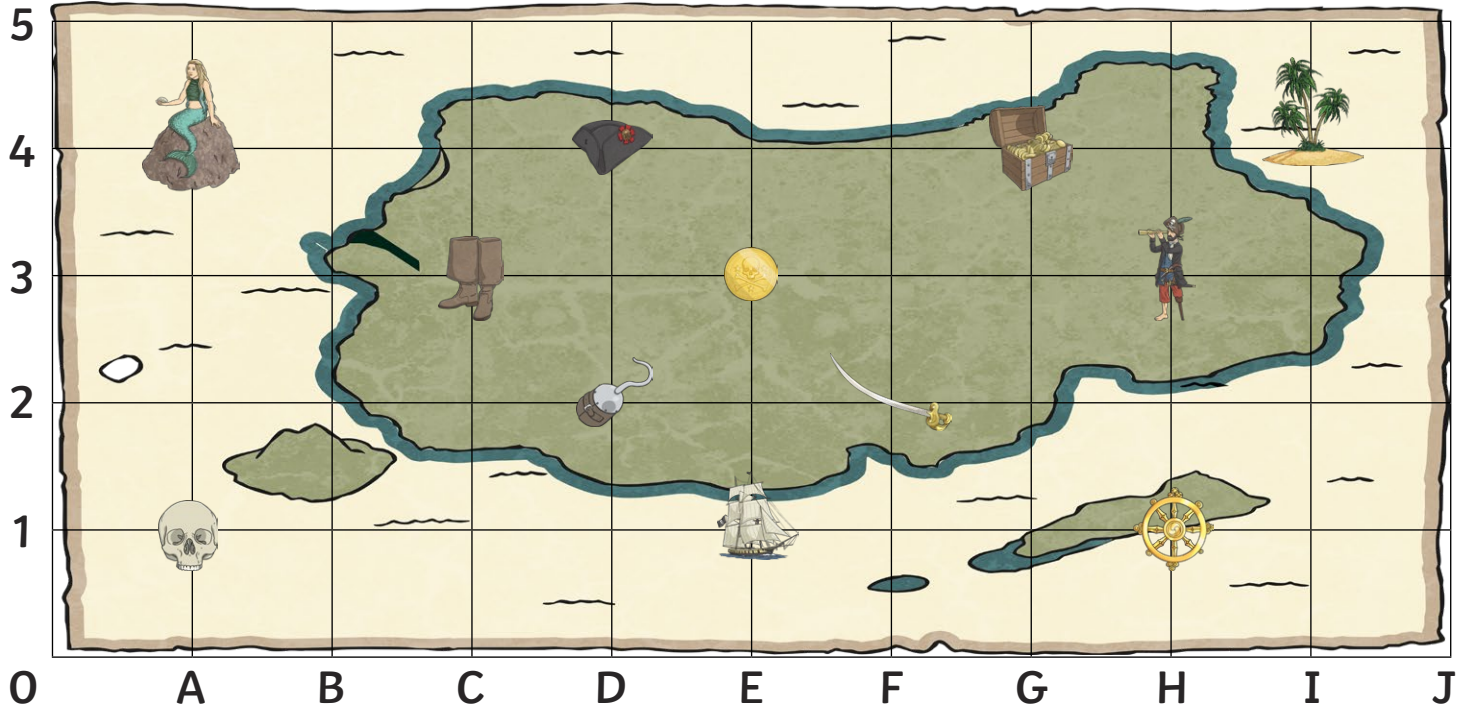




Pirate Map Coordinates

I can read, write and plot coordinates in the first quadrant.



What is at these coordinates on the pirate map?

(I,4) = _____


(A,1) = _____


(E,3) = _____


(F,2) = _____


(G,4) = _____

Write the coordinate of these places on the pirate map:

 = (,)

 = (,)

 = (,)

 = (,)

 = (,)

Plot these coordinates on the grid using a cross.

(B,1)

(C,4)

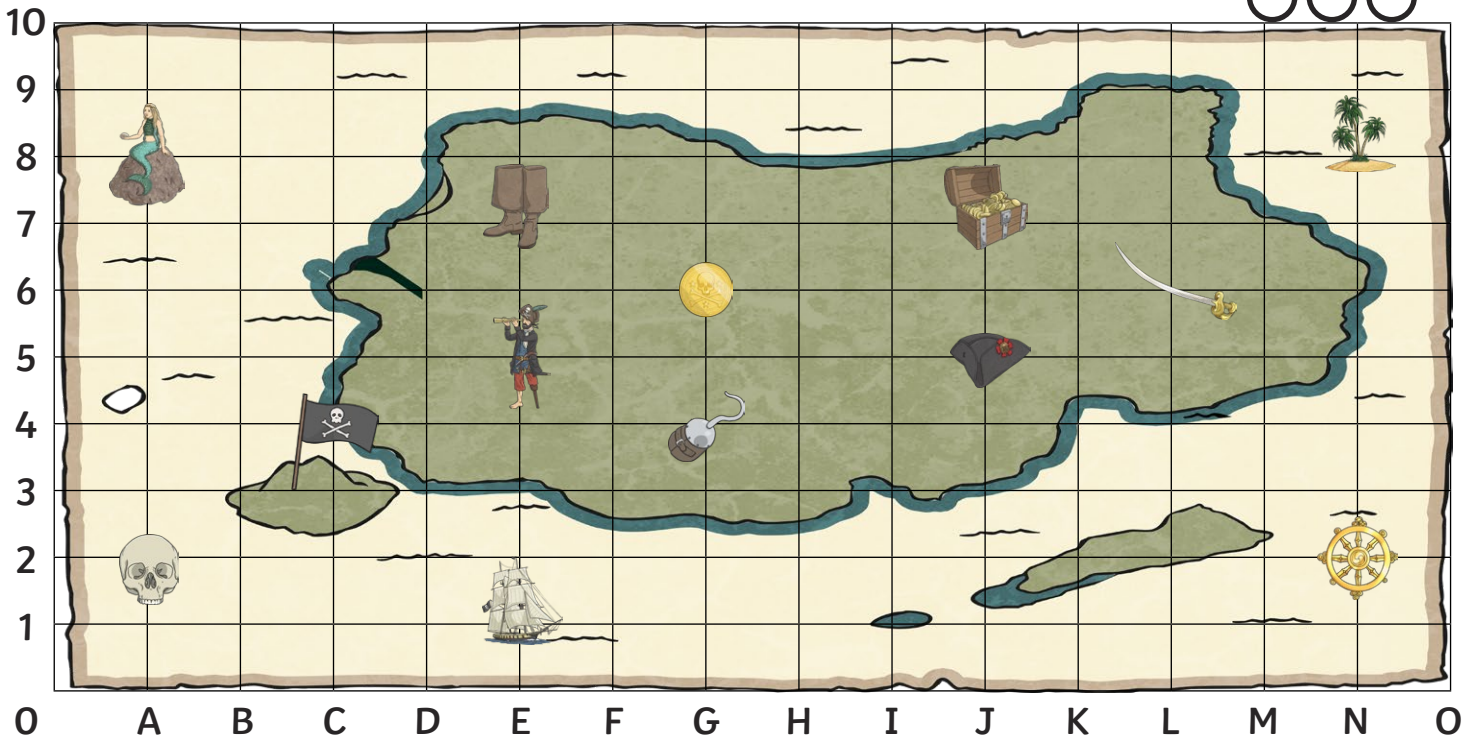
(E,2)

(I,1)

(G,3)

Pirate Map Coordinates

I can read, write and plot coordinates in the first quadrant.



What is at these coordinates on the pirate map?

(E,5) = _____


(G,6) = _____

(L,6) = _____


(J,7) = _____


(A,8) = _____


Write the coordinate of these places on the pirate map:

 = (,)

 = (,)

 = (,)

 = (,)

 = (,)

Plot these coordinates on the grid using a cross.

(B,1)

(N,5)

(I,5)

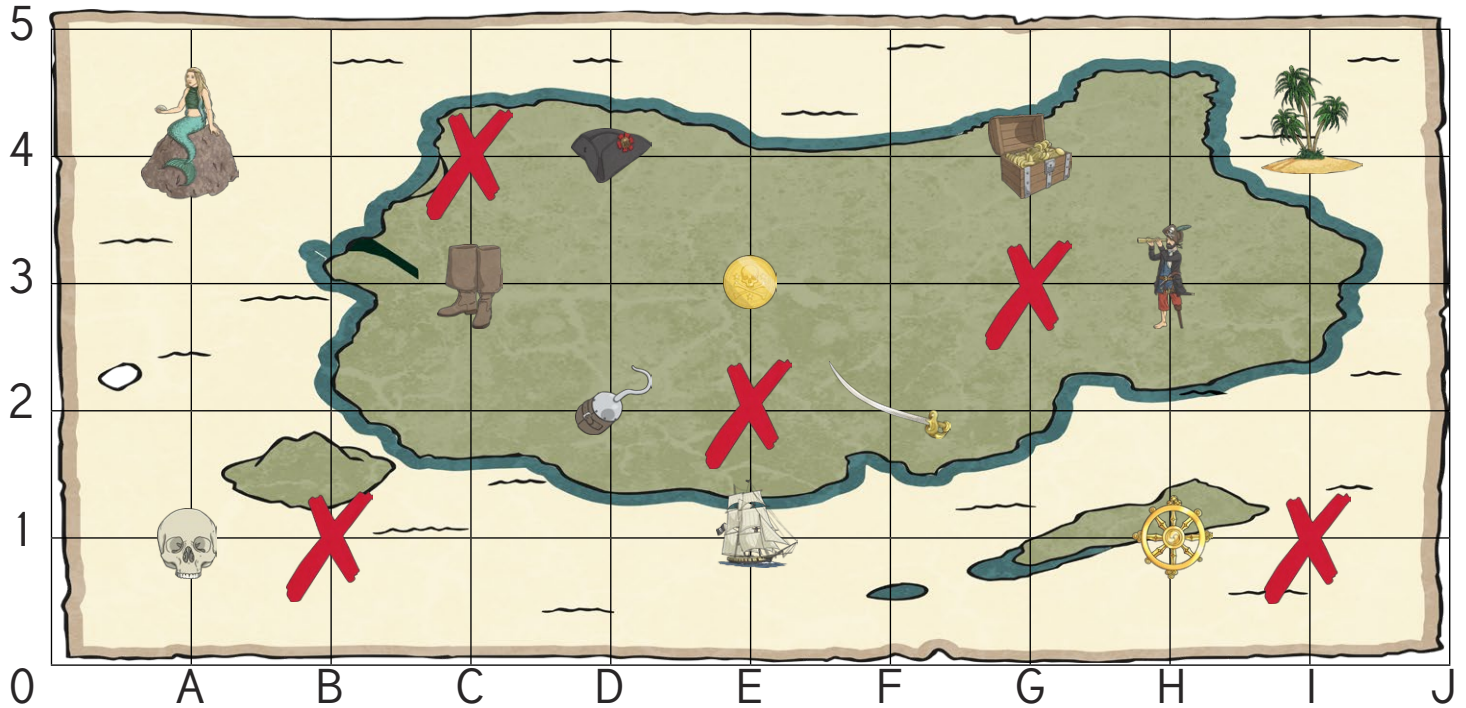
(D,9)

(H,10)



Pirate Map Coordinates Answers

I can read, write and plot coordinates in the first quadrant.



What is at these coordinates on the pirate map?

(I,4) = palm trees


(A,1) = skull


(E,3) = gold coin


(F,2) = sword


(G,4) = treasure

Write the coordinate of these places on the pirate map:

 = (**C** , **3**)

 = (**H** , **3**)

 = (**E** , **1**)

 = (**H** , **1**)

 = (**D** , **4**)

Plot these coordinates on the grid using a cross.

(B,1)

(C,4)

(E,2)

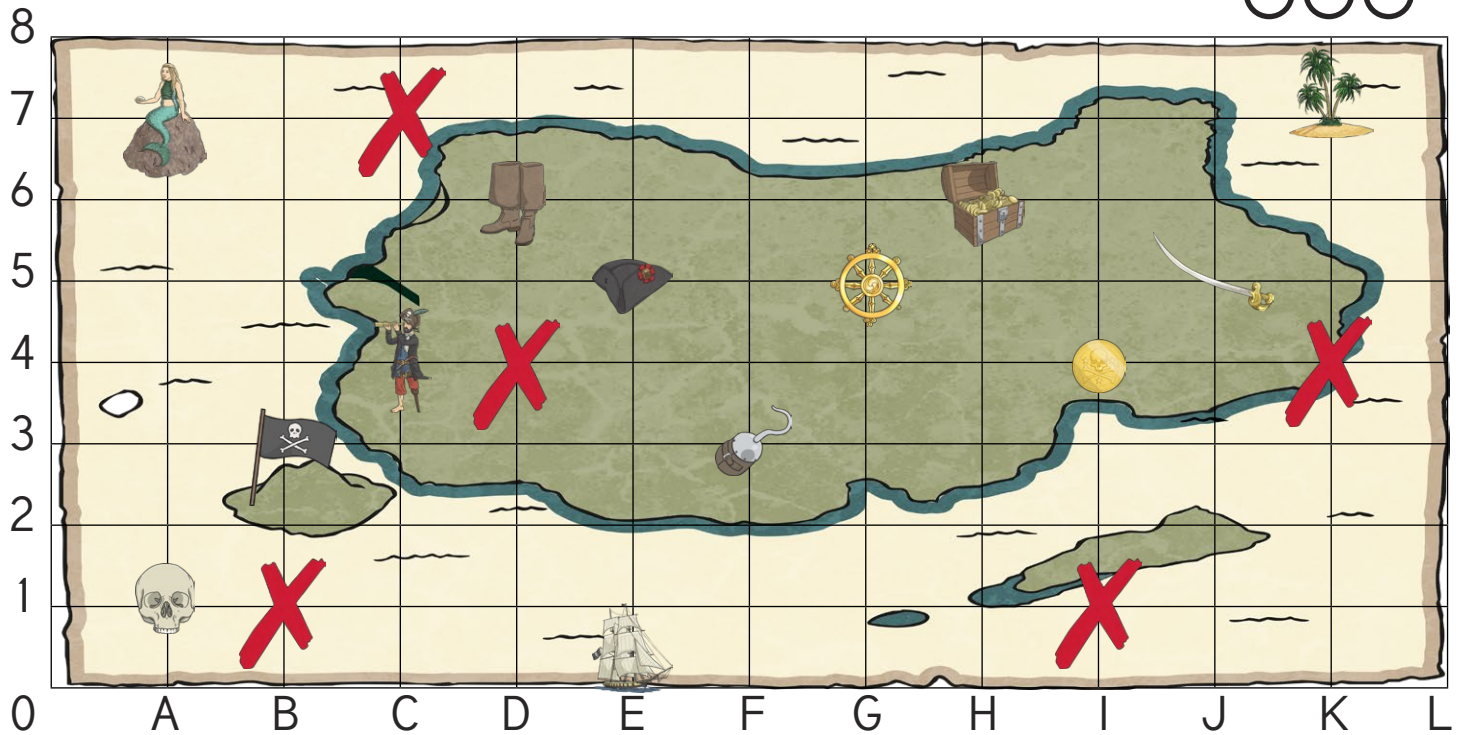
(I,1)

(G,3)



Pirate Map Coordinates **Answers**

I can read, write and plot coordinates in the first quadrant.



What is at these coordinates on the pirate map?

(A,7) = mermaid


(A,1) = skull

(E,0) = ship


(I,4) = gold coin


(H,6) = treasure


Write the coordinate of these places on the pirate map:

 = (**D** , **6**)

 = (**F** , **3**)

 = (**K** , **7**)

 = (**B** , **3**)

 = (**G** , **5**)

Plot these coordinates on the grid using a cross.

(B,1)

(C,7)

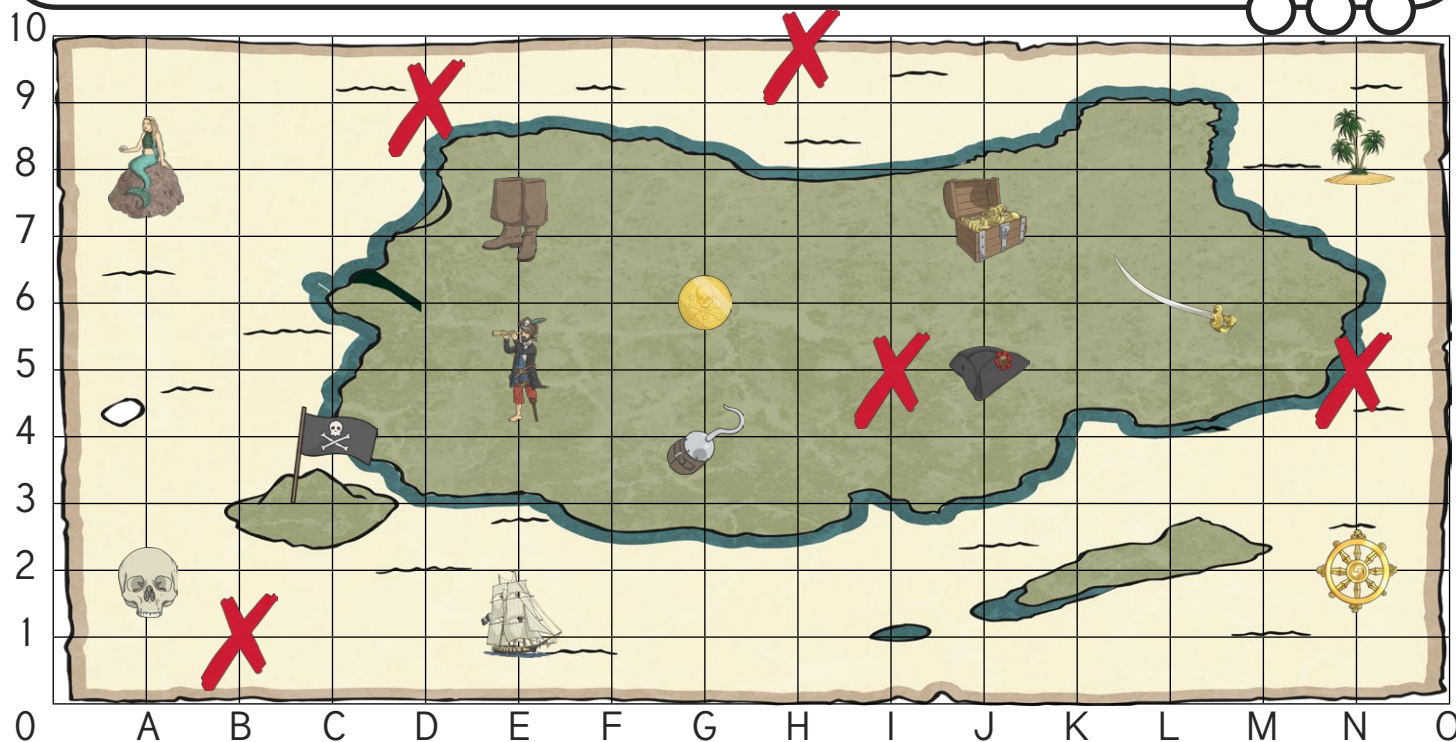
(D,4)

(I,1)

(K,4)

Pirate Map Coordinates

I can read, write and plot coordinates in the first quadrant.



What is at these coordinates on the pirate map?

(E,5) = pirate


(G,6) = gold coin


(L,6) = sword


(J,7) = treasure


(A,8) = mermaid


Write the coordinate of these places on the pirate map:

 = (**E** , **7**)

 = (**G** , **4**)

 = (**N** , **8**)

 = (**C** , **4**)

 = (**N** , **2**)

Plot these coordinates on the grid using a cross.

(B,1)

(N,5)

(I,5)

(D,9)

(H,10)