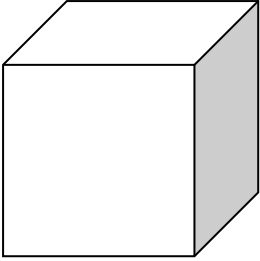


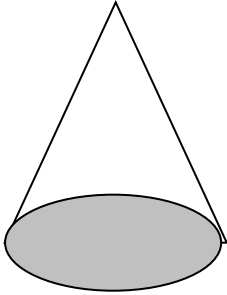
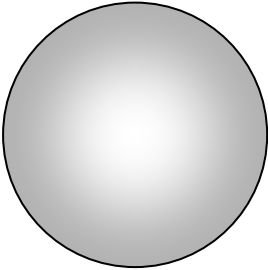


## 3D Shape Properties

Write a description for each shape. Try to find an object in the house that you can hold to help you describe the properties. How many faces, edges and vertices does it have? The first one has been done for you.

	<p>This 3D shape is a <u>Cube</u>.</p> <p>It has 6 faces, 12 straight edges and 8 vertices (corners).</p>
	<p>This 3D shape is a _____.</p> <p>It has</p>
	<p>This 3D shape is a _____.</p> <p>It has</p>
	<p>This 3D shape is a _____.</p> <p>It has</p>
	<p>This 3D shape is a _____.</p> <p>It has</p>

**Cube    Cylinder    Cuboid    Cone    Sphere**