


Copy the bar graph in each question and use the information given in the table to complete it.

2. a The hair colour of a group of pupils was recorded.

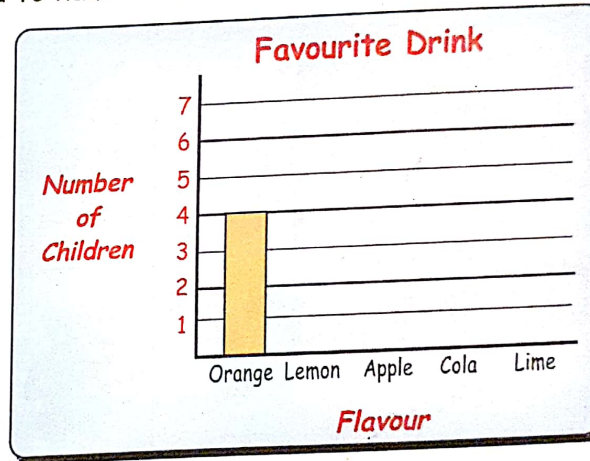
Colour	No.
Brown	7
Black	2
Blond	4
Red	1



b Twenty children are asked to name their favourite drink.




Drink	No.
Orange	4
Lemon	3
Apple	1
Cola	7
Lime	5




c A Primary 3 class were asked to name their favourite colours.

Colour	No.
Green	6
Blue	7
Red	5
	2
Yellow	4




2. d Children in a maths class were asked how many sides a **hexagon** has.

Four	6
Five	3
Six	9
Seven	8
Eight	2



e Josie's family were asked how many teddy bears they owned when they were younger.

Mum	4
Dad	2
Gran	10
Papa	0
Aunt Isa	5



f A group of gardeners were asked what beasties they would find in the garden.

10	said worms
3	said ants
12	said snails
9	said beetles
1	said spiders

