

2. People were asked to name any Scottish town starting with an A



- a Copy the table and complete the **total column**.
- b How many people were asked?

Town	Tally	Total
Ayr		3
Aberdeen		...
Annan		...
Arbroath		...
Airdrie		...

3. People were asked to name all 6 cities of Scotland.

The table shows what they said :-

- a Copy the table and fill in missing **tally marks** and **totals**.
- b Find out which is **not** a city?
- c How many people gave a wrong answer?



City	Tally	Total
Dundee		5
Inverness		...
Glasgow	8
Edinburgh	7
Stirling		...
Perth		...
Aberdeen	3

4. Here are the colours of the dresses the girls wore to their school dance.

pink	black	blue	blue
red	black	black	black
orange	blue	red	red
blue	red	orange	red
black	orange	pink	black

Colour	Tally	Total
orange
Red
Black
Blue
Pink

- a Copy the tally table and fill in all the **tally marks** and **totals**.
- b Which colour of dress did **most** girls wear?
- c How many girls were asked about the colour of their dress?
- d How many girls did **not** wear a black dress?




5. Use **tally marks** to show the number :-

- a 3 (= III) b 2 c 5 d 6
 e 8 f 9 g 10 h 15.


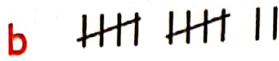
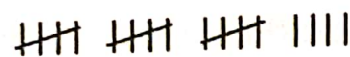
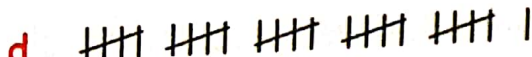
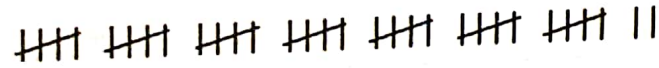
Count these tally marks . (15 or 16 ?)

It is too easy to lose count with bigger numbers !

It is better to put tally marks in groups of 5's.

 (16 in total)
 5 5 5 1

6. What **numbers** do these tally marks show ?

- a  b 
 c  d 
 e 

7. In the same way, use **tally marks** to show these numbers :-

- a 5 b 7 c 10 d 15
 e 17 f 20 g 26

Worksheet 25-5

8. Using tally marks in **groups of five**, make a **tally table** to show the responses to "what's your favourite flower ?"

Rose	Tulip	Pansy	Daffodil	Pansy
Pansy	Rose	Tulip	Pansy	Pansy
Tulip	Pansy	Tulip	Tulip	Daffodil
Marigold	Tulip	Rose	Daffodil	Marigold
Rose	Daffodil	Tulip	Tulip	Daffodil
Tulip	Pansy	Tulip	Rose	Daffodil

Flower	Tally	Total
Rose		
Pansy		

