


Name \_\_\_\_\_

Date \_\_\_\_\_



## COUNTING MONEY TO £1 SHEET 2



Count the money, and work out the total of all the coins!




\_\_\_ p



\_\_\_ p




\_\_\_ p



\_\_\_ p



\_\_\_ p



\_\_\_ p

Work out the total of the coins below:

$$50p + 20p + 10p + 5p = \underline{\quad} p$$

$$20p + 20p + 5p + 5p + 2p = \underline{\quad} p$$

$$50p + 10p + 5p + 2p + 2p = \underline{\quad} p$$

$$20p + 20p + 20p + 10p = \underline{\quad} p$$



Free Math Sheets, Math Games and Math Help

[MATH-SALAMANDERS.COM](http://MATH-SALAMANDERS.COM)