



Number stories

9 ducks on the pond.
3 fly away.
How many are left?

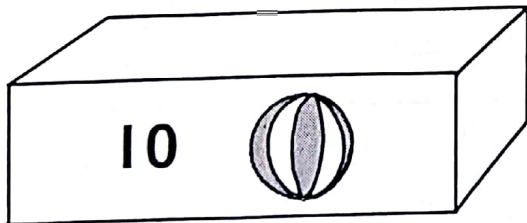

$$9 - 3 =$$




4 birds at the table.
6 more come.
How many altogether?

$$4 + 6 =$$




8 buttons on the jacket.
3 fall off.
How many are left?



10 balls in the box.
2 are sold.
How many are left?



How many cars altogether?



Draw more currants.

