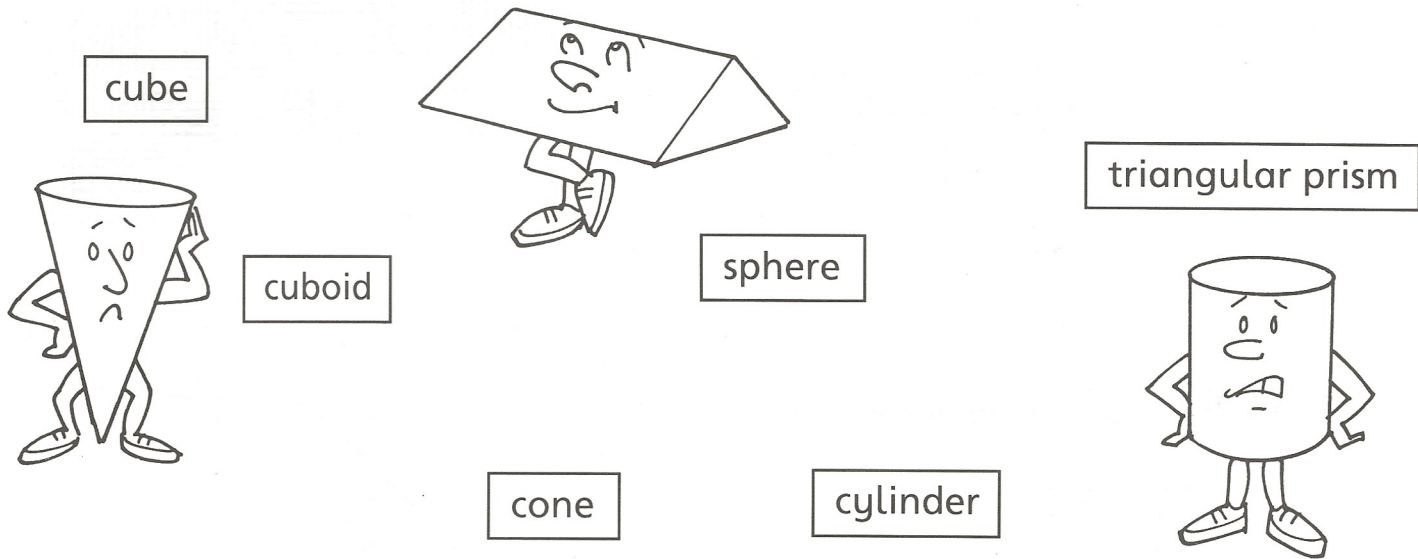


Name _____


1 These shape people have lost their names.




Match the correct name to each shape.

You may use 3D shapes.

2



I have _____ faces
_____ edges
_____ corners



I have _____ faces
_____ edges
_____ corners

3 What shape am I?

■ I have 6 square faces
12 edges
8 corners.

■ I have 1 curved face
1 circle face
1 corner.

■ I have 0 corners and 1 curved face. _____