

Name 7 30/3

# Workbook 2

## Check-up 3


Ma 2/3bc 3/2a

M/B I MD/B I PS/B I

N/3fg A/2d

£1 coin;

2, 3, 4, 5 and 10 times tab



Find the cost of

2 cars **£16**

5 planes **£30**

10 jigsaws **£50**

4 games **£36**




2 planes and 1 jigsaw **£17**

3 boats and 1 car **£29**

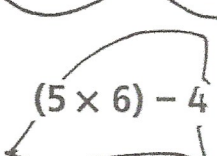
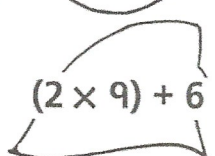
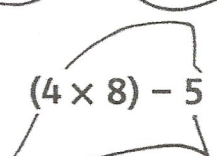
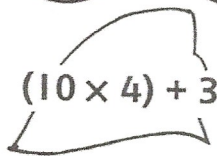
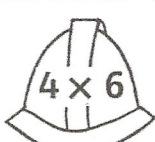

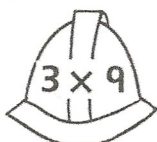
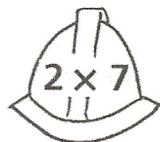
## Fire Station

odd

even



2 Write each fireman's number on the correct ladder.



3



Pat has £1.  
She has only 20p coins.  
How many coins  
does she have?

**5**



Sam has £1.  
He has only 50p coins.  
How many coins  
does he have?

**2**



Kim has £1.  
She has 4 coins.  
Write the coins she has.

