

Name 7 30/3

Workbook 2

Check-up 3


Ma 2/3bc 3/2a

M/B1 MD/B1 PS/B1

N/3fg A/2d

£1 coin;

2, 3, 4, 5 and 10 times tab



Find the cost of

2 cars _____ 5 planes _____

10 jigsaws _____ 4 games _____

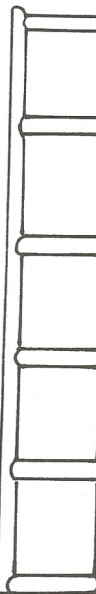
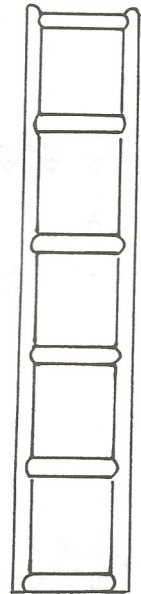
2 planes and 1 jigsaw _____

3 boats and 1 car _____


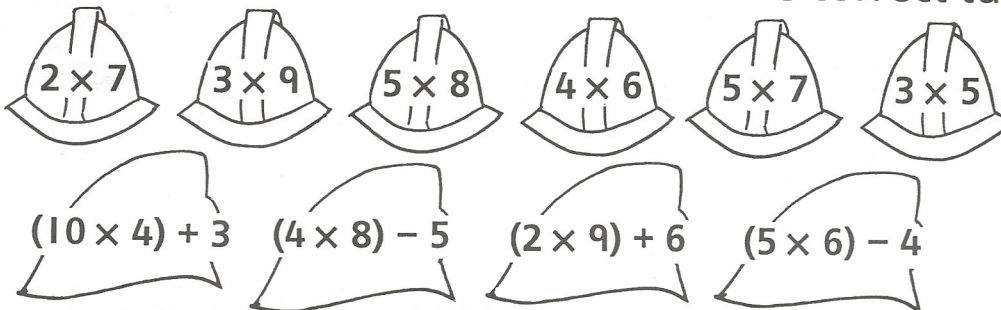
Fire Station

odd

even



2 Write each fireman's number on the correct ladder.



3



Pat has £1.
She has only 20p coins.
How many coins
does she have?



Sam has £1.
He has only 50p coins.
How many coins
does he have?



Kim has £1.
She has 4 coins.
Write the coins she has.

