




# Monday's Mental Maths

1)	What is 100 more than 237?	
2)	What is this shape? <b>hexagon    parallelogram</b> <b>kite        octagon</b>	
3)	$22 - 7$	
4)	How many 5s make 30?	
5)	$100 + 70 + \underline{\quad} = 179$	
6)	How many socks in 7 pairs?	
7)	Which of these numbers are even? <b>627   176   130   159   241</b>	
8)	How many days in August?	
9)	What is the digit 7 worth in the number 675?	
10)	What is the time? 	
11)	How many ml in 6 litres?	
12)	How many right angles? 	
13)	Tyger has 35p. How much more to make 50p?	
14)	The time is 8:10am. What is the time in half an hour?	<b>am</b>
15)	What is the next number? <b>2   5   8   11   14   <u>   </u></b>	
16)	$70\text{cm} + 50\text{cm} = \underline{\quad} \text{ m } \underline{\quad} \text{ cm}$	