











# Food Shopping Costs Activity

				
<p>One loaf bread Cost = £ .</p>	<p>Bag of frozen chips Cost = £ .</p>	<p>Box of Cereal Cost = £ .</p>	<p>Butter Cost = £ .</p>	<p>1 frozen pizza Cost = £ .</p>
				
<p>Pack of 4 yoghurts Cost = £ .</p>	<p>Pack of 6 apples Cost = £ .</p>	<p>2 pints of milk Cost = £ .</p>	<p>Pack of 10 eggs Cost = £ .</p>	<p>Pack of 6 bananas Cost = £ .</p>

What is the total cost of the full shop? £ .

What is the highest costing item? \_\_\_\_\_

What is the lowest costing item? \_\_\_\_\_