

Here is another coin you might use every day.



£1 coin

There are 100 pence in £1.

6. How many



pieces are in



?


Worksheet 8.1

7. a How many 20p pieces can I get for £1 ?

b How many 10p pieces can I get for £1 ?

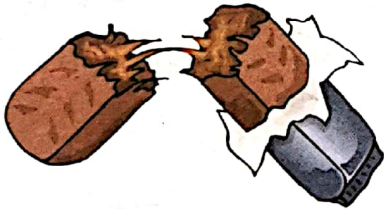
c How many 5p pieces can I get for £1 ?

d How many 2p pieces can I get for £1 ?



8. List the coins you might use to pay for each item **exactly** :-

a



25p

b



80p

c




57p

d




76p

e



48p

f



99p

9. Make up some questions of your own, similar to question 8.

Worksheet 8.2