





Name: _____ Class: _____

Use the information to make a pictogram.

Favourite Pets:




hamster: 5



dog: 10




cat: 8



fish: 2



Key:

Each  = 1 child

1	hamster	
2	dog	
3	cat	
4	fish	

Use the pictogram to answer the following questions.

- 5 How many children like hamsters the best? _____
- 6 How many children would like a cat for a pet? _____
- 7 How many children like dogs better than cats? _____
- 8 Which pet do the least number of children like? _____
- 9 Which pet do the most number of children like? _____
- 10 How many children altogether like hamsters and fish? _____

