







Name: _____ Class: _____

Look at the clocks and write the correct time underneath. Remember to add a.m. or p.m.



1 morning **2** afternoon **3** morning



4 evening **5** evening **6** morning


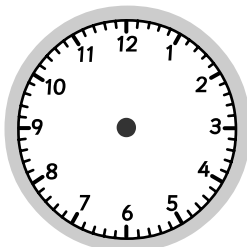
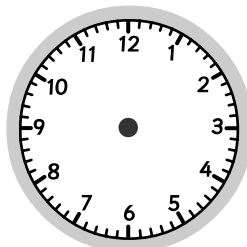


7 afternoon **8** morning



Draw the clock hands to show the correct time.

1 2:25 **2** 3:41 **3** 6:18



4 5:52 **5** 9:37 **6** 12:07

