



# Units of measure




- 1 What could you measure using
- (a) a metre stick \_\_\_\_\_
  - (b) a balance and 100 g weights \_\_\_\_\_
  - (c) centimetre squares \_\_\_\_\_
  - (d) a litre jug \_\_\_\_\_
  - (e) a tape marked in centimetres \_\_\_\_\_
  - (f) scales which show kilograms? \_\_\_\_\_

- 2 What measure equipment would you use to find
- (a) the weight of a cake \_\_\_\_\_
  - (b) the volume of water in a bucket \_\_\_\_\_
  - (c) the length of this page \_\_\_\_\_
  - (d) the area of a postcard \_\_\_\_\_
  - (e) the time taken to read a comic? \_\_\_\_\_

3 Complete each sentence with a unit of measure.




John is about  
129 \_\_\_\_\_ tall.



Fiona weighs about  
36 \_\_\_\_\_.

Usma is  
8 \_\_\_\_\_ old.



The door is about  
2 \_\_\_\_\_ in height.

