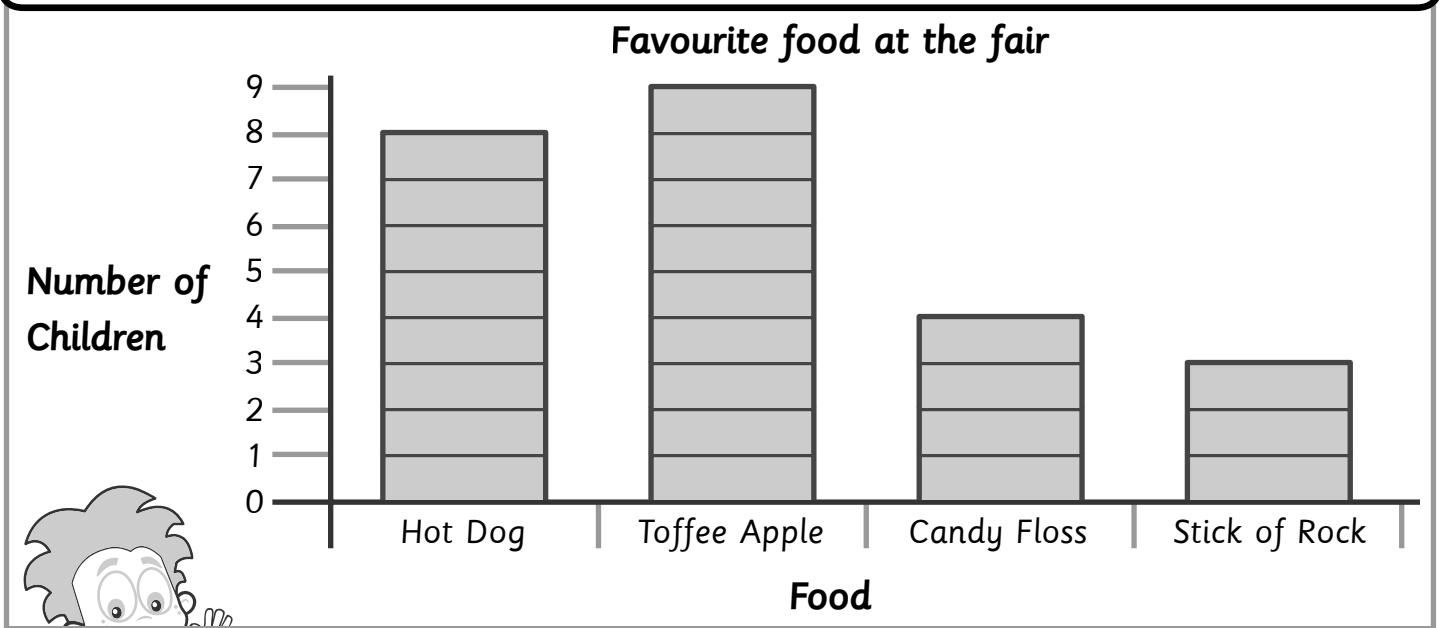


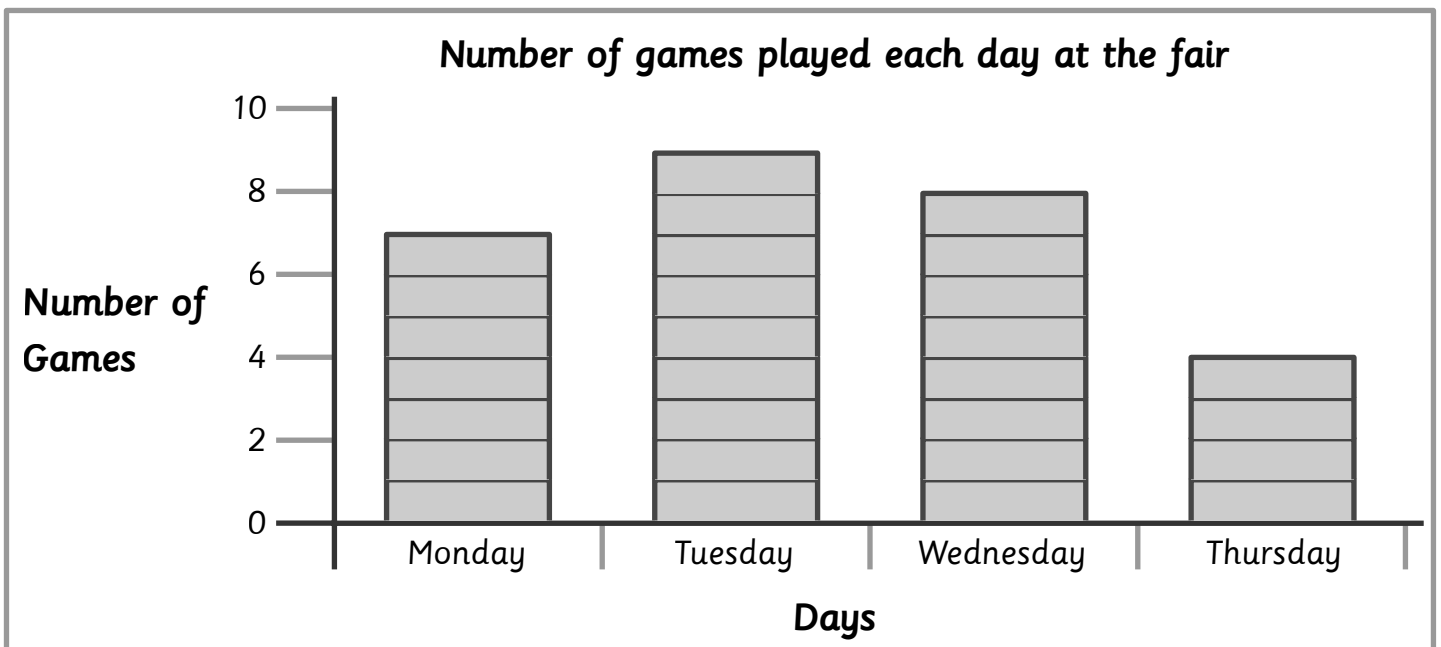


Name: _____ Class: _____

Use the block diagram to answer each question.



- How many children altogether chose hot dogs and candy floss as their favourite food at the fair? 12
- How many children altogether chose toffee apples and hot dogs as their favourite food at the fair? 17
- How many more children chose toffee apples than sticks of rock as their favourite food? 6
- How many more children chose hot dogs than candy floss as their favourite food? 4
- What was the most popular food at the fair? toffee apples
- What was the least popular food at the fair? sticks of rock



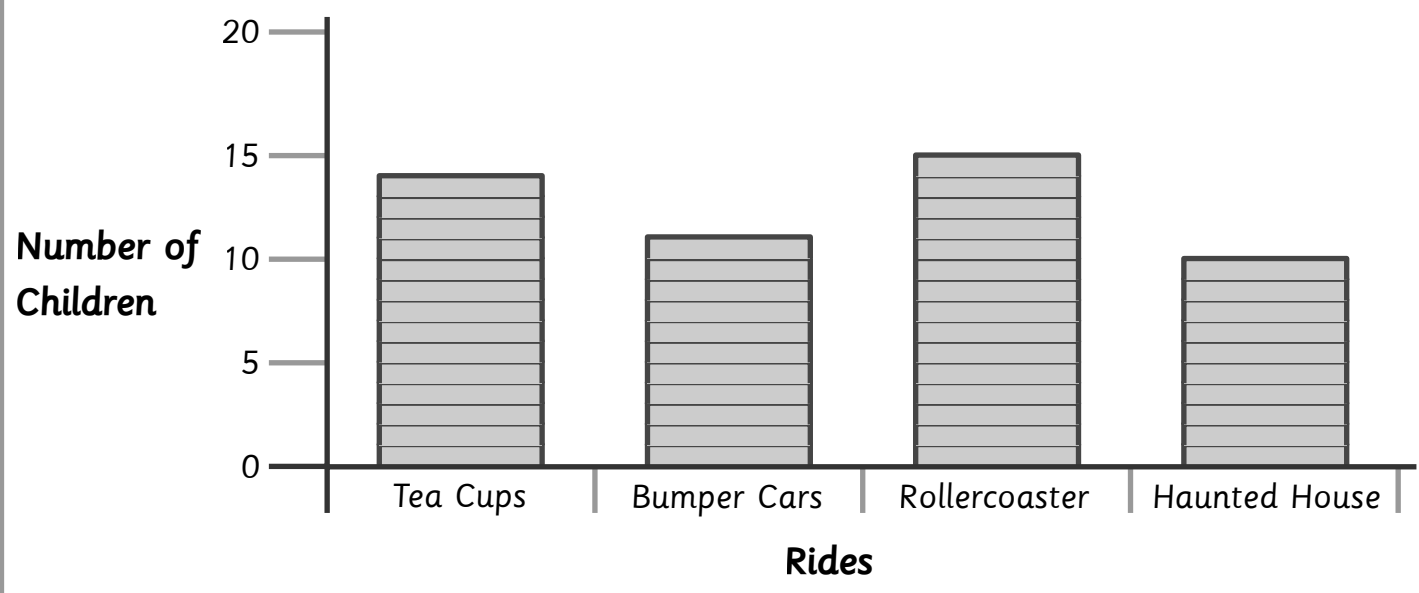


Name: _____ Class: _____

Use the block diagram to answer each question.

- 1 How many games were played at the fair on Monday and Wednesday altogether? 11
- 2 How many games were played at the fair on Thursday and Tuesday altogether? 13
- 3 How many more games were played on Tuesday than Wednesday? 5
- 4 How many more games were played on Monday than Thursday? 3
- 5 On which day were the most games played? Tuesday
- 6 On which days were the same number of games played?
Wednesday and Thursday

Favourite Rides



- 1 How many children chose the tea cups and the bumper cars altogether as their favourite rides? 25
- 2 How many children chose the rollercoaster and haunted house altogether as their favourite rides? 26
- 3 How many more children chose the rollercoaster than the haunted house as their favourite ride? 5
- 4 How many more children chose the tea cups than the bumper cars as their favourite ride? 3
- 5 Which was the most popular ride at the fair? rollercoaster
- 6 Which was the least popular ride at the fair? haunted house