



Name: _____ Class: _____

How much change has Stig given?

1



= 76 p

2



= 51 p

3



= 95 p

4



= 63 p

5



= 55 p

6



= 58 p

7

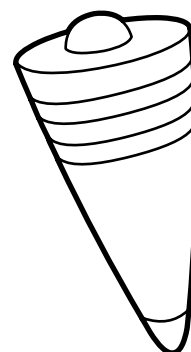




= 66 p

8



= 85 p



This ice cream costs 65p.
Using the following coins, how many different ways can you make 65p?
Write your answers on the back of this sheet.

