



Name: _____ Class: _____

Draw the hands on the clocks.

1




twenty past 5

2



ten to 12

3



twenty-five past 1

4




twenty to 3

5



twenty-five to 4

6



five past 7

Write the times that the clocks are showing.

7




twenty-five to 11

8



ten to 5

9



ten past 2

10




ten to 7

11



five past 9

12



quarter past 5