

Name : _____

Score : _____

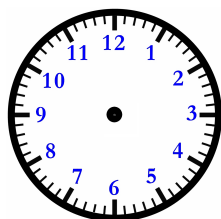
Teacher : _____

Date : _____

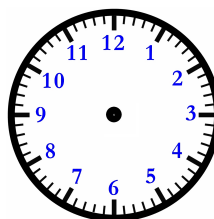
Filling In Time On Clocks

Fill out each missing clock based off the time of its pair.

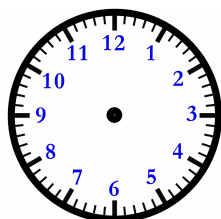
1)



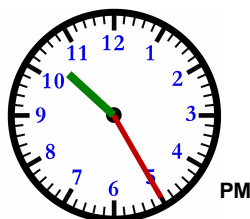
6)



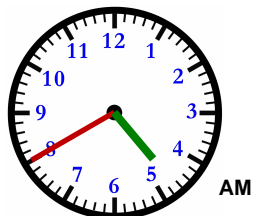
2)



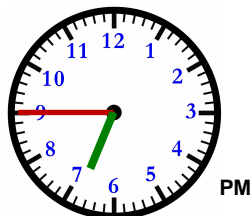
7)



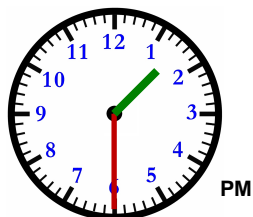
3)



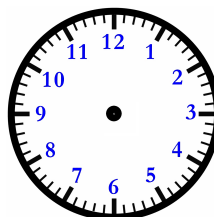
8)



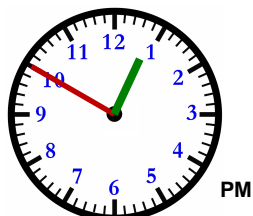
4)



9)



5)



10)

