




Name: \_\_\_\_\_ Class: \_\_\_\_\_

Look at the clocks and write the correct time underneath. Remember to add a.m. or p.m.


**1** morning      **2** afternoon      **3** morning



**4:20 a.m.**




**2:12 p.m.**




**5:39 p.m.**

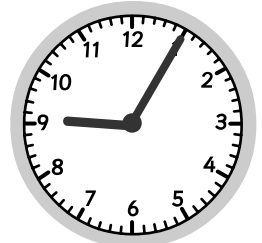
**4** evening      **5** evening      **6** morning



**7:42 p.m.**




**6:19 p.m.**




**9:05 a.m.**

**7** afternoon      **8** morning



**3:51 p.m.**





**6:41 a.m.**



Draw the clock hands to show the correct time.

**1** 2:25      **2** 3:41      **3** 6:18



**4** 5:52      **5** 9:37      **6** 12:07

