


# Treasure hunt



Jed and Jake are pirates.

Between them they have three precious jewels:  
a ruby (R), a diamond (D) and an emerald (E).



Complete the table.

Show what jewels each pirate could have.

Jed	Ⓡ						
Jake	Ⓢ ⓓ						

### Teaching objectives



Solve a given problem by organising and interpreting data in a simple table.  
Explain methods and reasoning.

# Stamps

Tilly's parcel cost 55p to post.

She stuck on eight stamps.

Each stamp was either 10p or 5p.



How many of each stamp did Tilly stick on her parcel?

Make up your own puzzle like this.

Ask a friend to do it.

## Teaching objectives

Solve mathematical problems or puzzles.  
Know multiplication facts for 5 and 10 times tables.