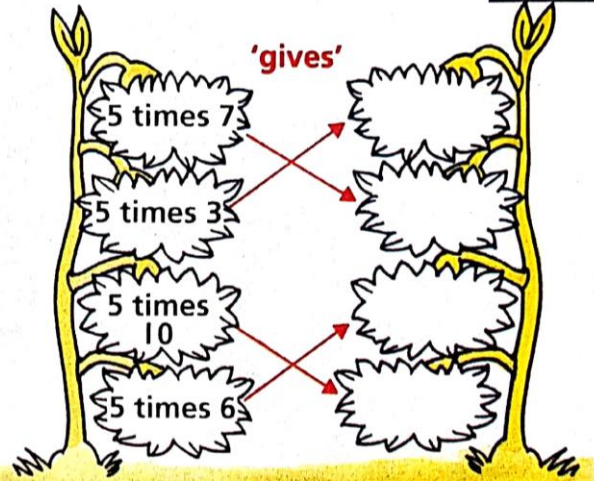





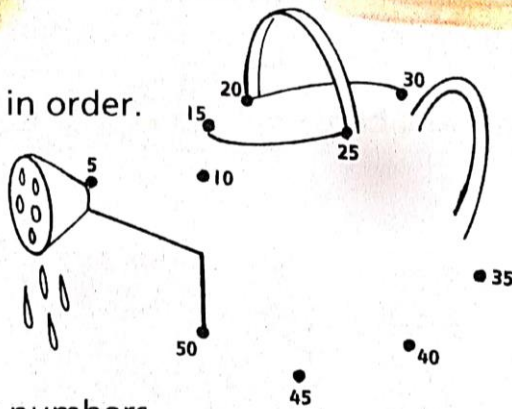
1 Complete.



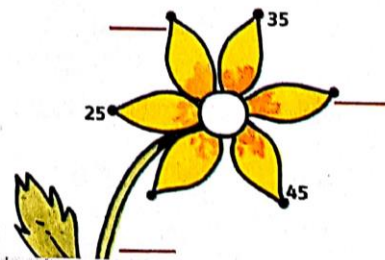
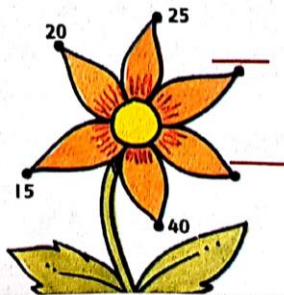
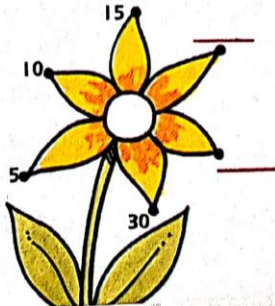
2 Colour to match.



3 Join the numbers in order.



4 Write the missing numbers.



H 35

R 18

5 times table

You should now know the :-

2 times table, the
3 times table and the
4 times table.

The 5 times table can be
found in a similar way.

Use

Worksheet 3-2

to complete the 5 times table.



$5 \text{ sets of } 0 = 0$

$5 \text{ sets of } 1 = 5$

$5 \text{ sets of } 2 = 10$

$5 \text{ sets of } 3 = 15$

$5 \text{ sets of } 4 = 20$

$5 \text{ sets of } .. = ..$

$5 \text{ sets of } .. = ..$

$5 \text{ sets of } .. = ..$

$5 \text{ sets of } .. = ..$

$5 \text{ sets of } .. = ..$

$5 \text{ sets of } .. = ..$

Be able to
multiply by 4
and learn.

$5 \times 0 = 0$

$5 \times 1 = 5$

$5 \times 2 = 10$

$5 \times 3 = 15$

$5 \times 4 = 20$

$5 \times 5 = 25$

$5 \times 6 = ..$

$5 \times 7 = ..$

$5 \times .. = ..$

$5 \times .. = ..$

$.. \times .. = ..$

Exercise 2



1. Copy and complete :-

a $5 \times 3 =$

b $5 \times 2 =$

c $5 \times 4 =$

d $5 \times 10 =$

e $5 \times 6 =$

f $5 \times 5 =$

g $5 \times 8 =$

h $5 \times 7 =$

i $5 \times 9 =$

2. Missing numbers again. Find them.

a $5 \times \dots = 25$

b $5 \times \dots = 10$

c $5 \times \dots = 5$

d $5 \times \dots = 15$

e $5 \times \dots = 35$

f $5 \times \dots = 45$

g $5 \times \dots = 20$

h $5 \times \dots = 30$

i $5 \times \dots = 40.$

Mild Task 2 - Answers will be posted at 3pm. You can use cubes, Lego etc. to make groups or sets of 5 and check your answers. Remember to write out the calculation.

Homework Examples

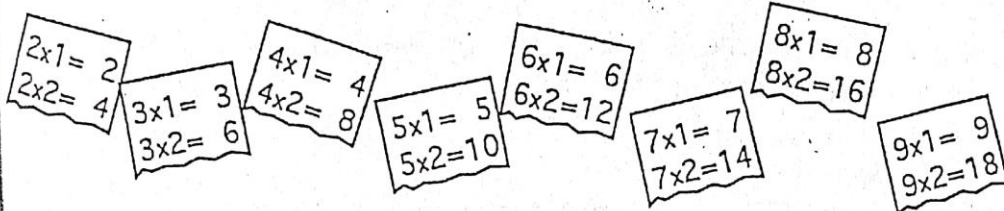
Page

REVISION

18-
32.

By now you should know all your tables from 2 times to 9 times.

1. Practice your tables on a friend or relative.



2. Ask a parent or friend to time you for these. Just write down the answers :-

- (a) 7×6 (b) 9×3 (c) 8×5 (d) 6×9 (e) 7×8
 (f) 6×3 (g) 4×9 (h) 5×7 (i) 8×8 (j) 7×7
 (k) 9×8 (l) 3×8 (m) 8×6 (n) 4×7 (o) 5×6
 (p) 4×4 (q) 5×6 (r) 9×9 (s) 5×5 (t) 9×5
 (u) 8×4 (v) 4×6 (w) 7×9 (x) 3×7 .

Write down the time in seconds Check your answers (add 5 seconds penalty on for each wrong answer) Final Score - ??

3. Copy these down and do them :-

(a) $\begin{array}{r} 39 \\ \times 2 \\ \hline \hline \end{array}$	(b) $\begin{array}{r} 46 \\ \times 3 \\ \hline \hline \end{array}$	(c) $\begin{array}{r} 58 \\ \times 4 \\ \hline \hline \end{array}$	(d) $\begin{array}{r} 63 \\ \times 5 \\ \hline \hline \end{array}$
--------------------------------------------------------------------	--------------------------------------------------------------------	--------------------------------------------------------------------	--------------------------------------------------------------------

(e) $\begin{array}{r} 71 \\ \times 6 \\ \hline \hline \end{array}$	(f) $\begin{array}{r} 57 \\ \times 7 \\ \hline \hline \end{array}$	(g) $\begin{array}{r} 84 \\ \times 8 \\ \hline \hline \end{array}$	(h) $\begin{array}{r} 29 \\ \times 9 \\ \hline \hline \end{array}$
--------------------------------------------------------------------	--------------------------------------------------------------------	--------------------------------------------------------------------	--------------------------------------------------------------------

- (i) 6×54 (j) 38×7 (k) 30×9 (l) 8×55 .

Hot Task - Answers will be posted at 3pm. If you want to, you can time yourself for Q2. Remember to write out the calculation for Q3. Have fun!

Page

Homework Examples

4. Help to decide what numbers have been blotted out by Jock.

(a)
$$\begin{array}{r} 4 \\ \times 6 \\ \hline 288 \end{array}$$

(b)
$$\begin{array}{r} 36 \\ \times \\ \hline 252 \end{array}$$

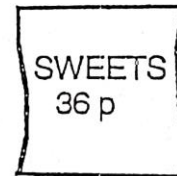


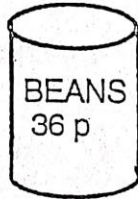
(c)
$$\begin{array}{r} 7 \\ \times 8 \\ \hline 696 \end{array}$$

(d)
$$\begin{array}{r} \\ \times 9 \\ \hline 306 \end{array}$$



6.


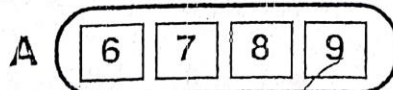
C



Copy out this bill and calculate the total :-

	£
7 tins of beans	=
5 packets of biscuits	=
6 jars of coffee	=
8 packets of sweets	=
TOTAL	£ <input type="text"/>

7.



A card was chosen from set A and another from set B. The 2 numbers on the cards were multiplied together and the answer came to 266. Find which 2 cards must have been chosen.

Hot Task 2 - Answers will be posted at 3pm. Remember to write out the calculation and write the unit of measure or appropriate sign with your answer. Have fun!