


# In the hall

Work with a partner.


- 1 Estimate, then measure, the lengths of these objects. Choose two more of your own.

Object	Estimate	Measure
skipping rope		
bench		
bat		



- 2 Estimate, then measure, the length around some things in the hall.

Object	Estimate	Measure



- 3 What would you use to measure each of these? Draw lines to match.




length of my shoe



length around my head



how far I can walk in 6 paces



150 cm tape



metre stick



30 cm rule