



Name: _____ Class: _____

Look at the coins and notes. How much money is there?



83p



84p



95p



£55




£95



£7 and 90p



£50.67



£80 and 70p




Name: _____ Class: _____

Circle the exact money needed to buy each item.

Suggested answers


9 Sten buys a bag of whole-wheat pasta for 75p, what coins will he need?



10 The total cost of Manu's groceries is £35.
Which notes can Manu use to pay the exact amount?



11 Klara buys olive oil and eggs for £3 and 49p.
Which coins and notes can Klara use to pay?



12 The total cost of Stig's shopping is £55 and 20p.
Which notes and coins can Stig use to pay?

