














## Cards A

<p><b>12.17</b></p>		<p><b>9.37</b></p>
	<p><b>11.04</b></p>	
<p><b>7.49</b></p>		<p><b>5.02</b></p>
	<p><b>2.56</b></p>	

## Cards B

<p><b>20.59</b></p>		<p><b>13.13</b></p>
	<p><b>22.29</b></p>	
<p><b>00.17</b></p>		<p><b>15.58</b></p>
	<p><b>18.42</b></p>	

## Clock faces



## Time Cards

Half past nine	Five to two	Quarter past five
Quarter to eleven	Five past four	Twenty-five to twelve
Twenty to eight	Twenty past twelve	Ten past three
Ten to six	Seven o'clock	Twenty-five past one

Name: \_\_\_\_\_

## Elapsed Time

### Word Problems



1. Jenna begins her morning jog at 4:05 A.M. She jogs for 45 minutes. What time is Jenna done jogging? \_\_\_\_\_

2. Jake goes for a 1 hour and 15 minute bike ride every day. On Monday, he begins his bike ride at 3:58 P.M. What time will he finish riding his bike? \_\_\_\_\_

3. Sylvia works for 8 hours a day at a restaurant. If she begins work at 8:00 A.M., what time will she go home? \_\_\_\_\_

4. Camille took her cookies out of the oven at 2:12 P.M. She let them cool on the kitchen table for 20 minutes before she put them on a plate. What time did Camille put her cookies on a plate? \_\_\_\_\_

5. Lou arrived at the bank at 7:10 A.M. The sign on the door said:

Sorry, we're closed.  
Bank Hours: 8:00 A.M. - 5:00 P.M.

How long will Lou have to wait for the bank to open? \_\_\_\_\_

## Elapsed Time

### Word Problems



1. Jenna begins her morning jog at 4:05 A.M. She jogs for 45 minutes. What time is Jenna done jogging?

4:50 A.M.

2. Jake goes for a 1 hour and 15 minute bike ride every day. On Monday, he begins his bike ride at 3:58 P.M. What time will he finish riding his bike?

5:13 P.M.

3. Sylvia works for 8 hours a day at a restaurant. If she begins work at 8:00 A.M., what time will she go home?

4:00 P.M.

4. Camille took her cookies out of the oven at 2:12 P.M. She let them cool on the kitchen table for 20 minutes before she put them on a plate. What time did Camille put her cookies on a plate?

2:32 P.M.

5. Lou arrived at the bank at 7:10 A.M. The sign on the door said:


Sorry, we're closed.  
Bank Hours: 8:00 A.M. - 5:00 P.M.

How long will Lou have to wait for the bank to open?

50 minutes

Name: \_\_\_\_\_

## Elapsed Time Practice



a. 4:55 P.M. to 5:05 P.M.

\_\_\_\_\_

b. 5:30 A.M. to 7:10 A.M.

\_\_\_\_\_

c. 1:45 P.M. to 3:55 P.M.

\_\_\_\_\_

d. 8:35 A.M. to 9:40 A.M.

\_\_\_\_\_

e. 2:50 P.M. to 4:05 P.M.

\_\_\_\_\_

f. 11:00 A.M. to 1:55 P.M.

\_\_\_\_\_

g. 11:55 A.M. to 12:45 P.M.

\_\_\_\_\_

h. 2:10 P.M. to 4:50 P.M.

\_\_\_\_\_

i. 6:05 A.M. to 7:10 A.M.

\_\_\_\_\_

j. 2:25 P.M. to 4:40 P.M.

\_\_\_\_\_

k. 7:20 A.M. to 8:40 A.M.

\_\_\_\_\_

l. Noon to 3:05


\_\_\_\_\_

m. Midnight to 2:25 A.M.

\_\_\_\_\_

Name: \_\_\_\_\_

## Elapsed Time Practice



- a. 4:55 P.M. to 5:05 P.M. 10 minutes
- b. 5:30 A.M. to 7:10 A.M. 1 hour and 40 minutes
- c. 1:45 P.M. to 3:55 P.M. 2 hours and 10 minutes
- d. 8:35 A.M. to 9:40 A.M. 1 hour and 5 minutes
- e. 2:50 P.M. to 4:05 P.M. 1 hour and 15 minutes
- f. 11:00 A.M. to 1:55 P.M. 2 hours and 55 minutes
- g. 11:55 A.M. to 12:45 P.M. 50 minutes
- h. 2:10 P.M. to 4:50 P.M. 2 hours and 40 minutes
- i. 6:05 A.M. to 7:10 A.M. 1 hour and 5 minutes
- j. 2:25 P.M. to 4:40 P.M. 2 hours and 15 minutes
- k. 7:20 A.M. to 8:40 A.M. 1 hour and 20 minutes
- l. Noon to 3:05 3 hours and 5 minutes
- m. Midnight to 2:25 A.M. 2 hours and 25 minutes